

रोल नं.

Roll No.

--	--	--	--	--	--	--

परीक्षार्थी कोड को उत्तर-पुस्तिका के मुख-पृष्ठ पर अवश्य लिखें ।

Candidates must write the Code on the title page of the answer-book.

- कृपया जाँच कर लें कि इस प्रश्न-पत्र में मुद्रित पृष्ठ 8 + 2 मानचित्र हैं ।
- प्रश्न-पत्र में दाहिने हाथ की ओर दिए गए कोड नम्बर को छात्र उत्तर-पुस्तिका के मुख-पृष्ठ पर लिखें ।
- कृपया जाँच कर लें कि इस प्रश्न-पत्र में 30 प्रश्न हैं ।
- कृपया प्रश्न का उत्तर लिखना शुरू करने से पहले, प्रश्न का क्रमांक अवश्य लिखें ।
- इस प्रश्न-पत्र को पढ़ने के लिए 15 मिनट का समय दिया गया है । प्रश्न-पत्र का वितरण पूर्वाह्न में 10.15 बजे किया जाएगा । 10.15 बजे से 10.30 बजे तक छात्र केवल प्रश्न-पत्र को पढ़ेंगे और इस अवधि के दौरान वे उत्तर-पुस्तिका पर कोई उत्तर नहीं लिखेंगे ।
- Please check that this question paper contains 8 printed pages + 2 Maps.
- Code number given on the right hand side of the question paper should be written on the title page of the answer-book by the candidate.
- Please check that this question paper contains 30 questions.
- **Please write down the Serial Number of the question before attempting it.**
- 15 minute time has been allotted to read this question paper. The question paper will be distributed at 10.15 a.m. From 10.15 a.m. to 10.30 a.m., the students will read the question paper only and will not write any answer on the answer-book during this period.

## संकलित परीक्षा – II

### SUMMATIVE ASSESSMENT – II

## सामाजिक विज्ञान

### SOCIAL SCIENCE

निर्धारित समय : 3 घण्टे

Time allowed : 3 hours

अधिकतम अंक : 90

Maximum Marks : 90

### सामान्य निर्देश :

- (i) इस प्रश्न-पत्र में कुल **30** प्रश्न हैं । सभी प्रश्न **अनिवार्य** हैं ।
- (ii) प्रत्येक प्रश्न के अंक उसके सामने दिए गए हैं ।
- (iii) प्रश्न संख्या **1** से **8** तक अति लघु-उत्तरीय प्रश्न हैं । प्रत्येक प्रश्न **1** अंक का है ।
- (iv) प्रश्न संख्या **9** से **20** तक प्रत्येक प्रश्न **3** अंक का है । इनमें से प्रत्येक प्रश्न का उत्तर **80** शब्दों से अधिक का नहीं होना चाहिए ।
- (v) प्रश्न संख्या **21** से **28** तक प्रत्येक प्रश्न **5** अंक का है । इनमें से प्रत्येक प्रश्न का उत्तर **100** शब्दों से अधिक का नहीं होना चाहिए ।
- (vi) प्रश्न संख्या **29** और **30** इतिहास और भूगोल के मानचित्र वाले प्रश्न प्रत्येक **3** अंक के हैं । इन्हें पूरा करने के बाद, मानचित्रों को उत्तर-पुस्तिका के अंदर नट्थी कर दीजिए ।

### General Instructions :

- (i) *The question paper has **30** questions in all. All questions are **compulsory**.*
- (ii) *Marks are indicated against each question.*
- (iii) *Questions from serial number **1** to **8** are Very Short Answer Questions. Each question carries **1** mark.*
- (iv) *Questions from serial number **9** to **20** are **3** mark questions. Answers of these questions should not exceed **80** words each.*
- (v) *Questions from serial number **21** to **28** are **5** mark questions. Answers of these questions should not exceed **100** words each.*
- (vi) *Questions number **29** and **30** are map questions of **3** marks each from History and Geography both. After completion, attach the maps inside your answer-book.*

1. चुनाव आयोग ने किसी राजनीतिक दल को 'राज्य दल' की मान्यता प्राप्त करने हेतु क्या शर्त निश्चित की है ? 1  
What is the requirement laid down by the Election Commission for a political party to be recognized as a 'State Party' ?
2. जवाहरलाल नेहरू पत्तन का विकास क्यों किया गया था ? 1  
Why was Jawaharlal Nehru port developed ?
3. सरकार के किस रूप को सबसे उत्तम माना जाता है ? 1  
Which form of government is considered the best ?
4. लोकतांत्रिक व्यवस्था अन्य वैकल्पिक शासन व्यवस्थाओं से क्यों बेहतर है ? 1  
Why is a democratic government better than other alternatives ?
5. भारतीय सरकार ने विदेश व्यापार तथा विदेशी निवेश पर से काफ़ी हद तक अवरोधों को क्यों हटाया ? 1  
Why did the Indian Government remove barriers to a large extent on foreign trade and foreign investment ?
6. आधुनिक करेंसी (मुद्रा) के दो रूप कौन-से हैं ?  $\frac{1}{2} + \frac{1}{2} = 1$   
What are the two forms of modern currency ?
7. खाद्य तेल का टिन खरीदते समय आप उस पर कौन-सा शब्दचिह्न (लोगो) देखना चाहेंगे ? 1  
Which logo would you like to see while purchasing a tin of edible oil ?
8. उदारवादी राष्ट्रवादियों द्वारा उठाया गया प्रमुख मुद्दा क्या था ?

**अथवा**

- न्घे अन और हा तिन्ह प्रान्तों को वियतनाम की लपलपाती चिंगारी क्यों कहा जाता था ? 1  
What was the major issue taken up by the liberal nationalists ?

**OR**

Why were Nghe An and Ha Tinh provinces called the electrical fuses of Vietnam ?

9. “भारत में राजनीतिक दलों के सुधार हेतु वैधिक संगठनों ने गम्भीर प्रयास किए ।” कथन की पुष्टि कीजिए । 3  
 “Serious efforts were made by the legal organisations to reform political parties in India.” Support the statement.
10. सविनय अवज्ञा आंदोलन में महिलाओं ने किस प्रकार भाग लिया ? स्पष्ट कीजिए । 3  
 How did women participate in Civil Disobedience Movement ? Explain.
11. बायोगैस किस प्रकार ऊर्जा समस्या को विशेषकर ग्रामीण भारत में हल कर सकती है ? अपने सुझाव दीजिए ।  $3 \times 1 = 3$   
 How can biogas solve the energy problem mainly in rural India ? Give your suggestions.
12. भारत में सड़क परिवहन की तीन प्रमुख समस्याओं का वर्णन कीजिए ।  $3 \times 1 = 3$   
 Describe three major problems faced by the road transport in India.
13. उद्योगपति सविनय अवज्ञा आन्दोलन से किस प्रकार जुड़े ? उनकी भूमिका का विश्लेषण कीजिए । 3  
 How did the industrialists relate to the Civil Disobedience Movement ? Analyse their role.
14. आप बाज़ार से दवाएँ खरीदने वाले उपभोक्ता को कौन-सी सावधानियाँ बरतने का सुझाव देंगे ? 3  
 What precautions do you suggest for a consumer to take while purchasing medicines from the market ?
15. द्वि-दलीय प्रणाली की किन्हीं तीन प्रमुख विशेषताओं का वर्णन कीजिए ।  $3 \times 1 = 3$   
 Describe any three main features of two-party system.
16. “मुद्रा ने लेन-देन को आसान बना दिया है ।” पुष्टि कीजिए । 3  
 “Money has made transactions easy.” Justify.
17. “प्रौद्योगिकी ने वैश्वीकरण की प्रक्रिया को उत्प्रेरित किया है ।” उदाहरण दे कर कथन की पुष्टि कीजिए । 3  
 “Technology has stimulated the globalisation process.” Support the statement with examples.

18. “कुछ लोगों का मानना है कि लोकतंत्र में सरकार कम प्रभावी होती है ।” इस कथन का विश्लेषण कीजिए । 3

“Some people think that democracy produces a less effective government.”  
Analyse the statement.

19. परिवहन और संचार के सघन एवं सक्षम जाल का होना आज के स्थानीय, राष्ट्रीय और वैश्विक व्यापार के विकास के लिए पूर्व अपेक्षित क्यों है ? अपने विचार व्यक्त कीजिए । 3

Why is a dense and efficient network of transport and communication a prerequisite for the development of local, national and global trade of today ? Give your opinion.

20. आर्थिक राष्ट्रवाद की लहर ने किस प्रकार यूरोप में पनप रही व्यापक राष्ट्रवादी भावनाओं को मज़बूत बनाया ? स्पष्ट कीजिए ।

#### अथवा

औपनिवेशिक काल में शिक्षा नीति किस प्रकार वियतनामी विद्यार्थियों के प्रतिकूल थी ? स्पष्ट कीजिए । 3

How did a wave of economic nationalism strengthen the wider nationalist sentiment growing in Europe ? Explain.

#### OR

How was the education policy unfavourable to the Vietnamese students during the colonial period ? Explain.

21. “जन संघर्ष लोकतंत्र के विकास के अभिन्न अंग हैं ।” इस कथन का विश्लेषण कीजिए । 5

“The popular struggles are integral to the development of democracy.”  
Analyse the statement.

22. भारत के स्वतंत्रता संघर्ष में सविनय अवज्ञा आन्दोलन की महत्ता का वर्णन कीजिए । 5

Describe the significance of the Civil Disobedience Movement in the freedom struggle of India.

23. छोटानागपुर पठारी क्षेत्र में और उसके आस-पास लोहा और इस्पात उद्योग के संकेन्द्रण के लिए उत्तरदायी किन्हीं पाँच कारकों का वर्णन कीजिए ।  $5 \times 1 = 5$

Describe any five factors responsible for the concentration of iron and steel industry in and around Chhotanagpur Plateau region.

24. “उन्नीसवीं सदी के पूर्वार्ध में राष्ट्रवाद का आदर्शवादी उदारवादी-जनतांत्रिक स्वभाव सीमित लक्ष्यों वाला संकीर्ण सिद्धान्त बन गया।” इस कथन की परख कीजिए।

अथवा

“वियतनाम में साम्राज्य-विरोधी आन्दोलन में महिलाओं की भूमिकाएँ विविध थीं।” कथन की परख कीजिए।

5

“The idealistic liberal-democratic sentiment of nationalism in the first half of the nineteenth century became a narrow creed with limited ends.” Examine the statement.

OR

“The roles of women varied in the anti-imperialist movement in Vietnam.” Examine the statement.

25. “आधुनिक लोकतांत्रिक व्यवस्थाएँ राजनीतिक दलों के बिना नहीं चल सकतीं।” कथन की परख कीजिए।

5

“Modern democracies cannot exist without political parties.” Examine the statement.

26. “न्यायसंगत वैश्वीकरण सभी के लिए अवसर प्रदान करेगा और यह सुनिश्चित भी करेगा कि वैश्वीकरण के लाभों में सबकी बेहतर हिस्सेदारी हो।” इस कथन की पुष्टि कीजिए।

5

“Fair globalisation would create opportunities for all and also ensure that benefits of globalisation are shared better.” Support the statement.

27. सूचना पाने के अधिकार (आर.टी.आई.) अधिनियम के प्रभाव की उदाहरण सहित व्याख्या कीजिए।

5

Explain with example the impact of the Right to Information Act (R.T.I.).

28. “भारत में सड़क परिवहन और रेल परिवहन परस्पर प्रतिस्पर्धी नहीं हैं, अपितु एक-दूसरे के पूरक हैं।” इस कथन को न्यायसंगत ठहराइए।

5

“Road transport and Rail transport in India are not competitive but complementary to each other.” Justify the statement.

29. तीन लक्षण A, B और C भारत के दिए गए राजनीतिक रेखा-मानचित्र (पृष्ठ 9 पर), में अंकित किए गए हैं। इन लक्षणों को निम्नलिखित जानकारी की सहायता से पहचानिए और उनके सही नाम, मानचित्र में खींची गई रेखाओं पर लिखिए : 3×1=3

- A. वह स्थान जहाँ भारतीय राष्ट्रीय कांग्रेस का अधिवेशन हुआ था।
- B. वह स्थान जहाँ सूती कपड़ा कारखानों के मज़दूरों ने सत्याग्रह आन्दोलन किया था।
- C. वह नगर जो जलियाँवाला बाग घटना से सम्बन्धित है।

Three features A, B and C are marked on the given political outline map of **India** (on page 9). Identify these features with the help of the following information and write their correct names on the lines marked in the map :

- A. The place where the Indian National Congress Session was held.
- B. The place where cotton mill workers organized a Satyagraha Movement.
- C. The city related to Jallianwala Bagh incident.

**नोट :** निम्नलिखित प्रश्न केवल दृष्टिबाधित परीक्षार्थियों के लिए प्रश्न संख्या 29 के स्थान पर हैं :

**Note :** The following questions are for the **Visually Impaired Candidates** only, in lieu of Question Number 29 :

(29.1) उस स्थान का नाम लिखिए, जहाँ दिसम्बर, 1920 में भारतीय राष्ट्रीय कांग्रेस का अधिवेशन हुआ था।

(29.2) उस स्थान का नाम लिखिए, जहाँ सूती कपड़ा कारखानों के मज़दूरों ने सत्याग्रह किया था।

(29.3) उस नगर का नाम लिखिए जो जलियाँवाला बाग घटना से सम्बन्धित है। 3×1=3

(29.1) Name the place where the Indian National Congress Session was held in December, 1920.

(29.2) Name the place where cotton mill workers organised Satyagraha.

(29.3) Name the city related to Jallianwala Bagh incident.

30. (30.1) दो लक्षण A और B, **भारत** के दिए गए राजनीतिक रेखा-मानचित्र (पृष्ठ 11 पर), में अंकित किए गए हैं। इन लक्षणों को निम्नलिखित जानकारी की सहायता से पहचानिए और उनके सही नाम, मानचित्र में खींची गई रेखाओं पर लिखिए :  $2 \times 1 = 2$
- A. कोयला की खानें
- B. उत्तर-दक्षिण गलियारे के सिरे का स्टेशन

- (30.2) इसी मानचित्र में निम्नलिखित को दर्शाइए और उसका नाम लिखिए : 1
- भिलाई लोहा और इस्पात संयंत्र

- (30.1) Two features A and B are marked on the given political outline map of **India** (on page 11). Identify these features with the help of the following information and write their correct names on the lines marked in the map :

- A. Coal mines
- B. The terminal station of North-South Corridor

- (30.2) On the same map locate and label the following :
- Bhilai Iron and Steel Plant.

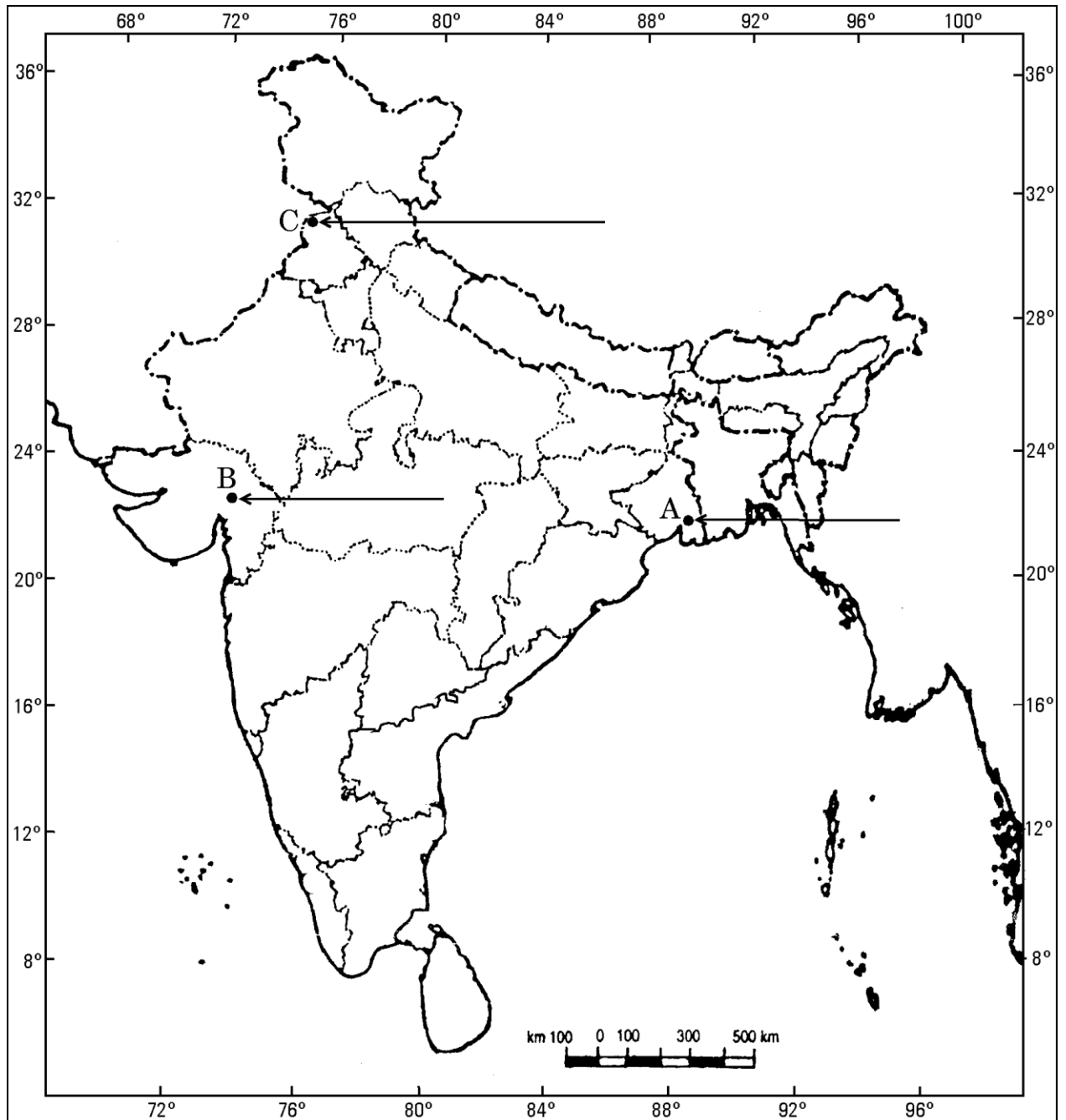
**नोट :** निम्नलिखित प्रश्न केवल दृष्टिबाधित परीक्षार्थियों के लिए प्रश्न संख्या 30 के स्थान पर हैं :

**Note :** The following questions are for the **Visually Impaired Candidates** only, in lieu of Question Number 30 :

- (30.1) ओडिशा में स्थित किसी एक कोयला खान का नाम लिखिए।
- (30.2) उत्तर-दक्षिण गलियारे के दक्षिणी सिरे के स्टेशन का नाम लिखिए।
- (30.3) भिलाई लोहा और इस्पात संयंत्र किस राज्य में स्थित है ?  $3 \times 1 = 3$
- (30.1) Name any one coal mine located in Odisha.
- (30.2) Name the Southern terminal station of North-South Corridor.
- (30.3) In which State is Bhilai Iron and Steel Plant located ?

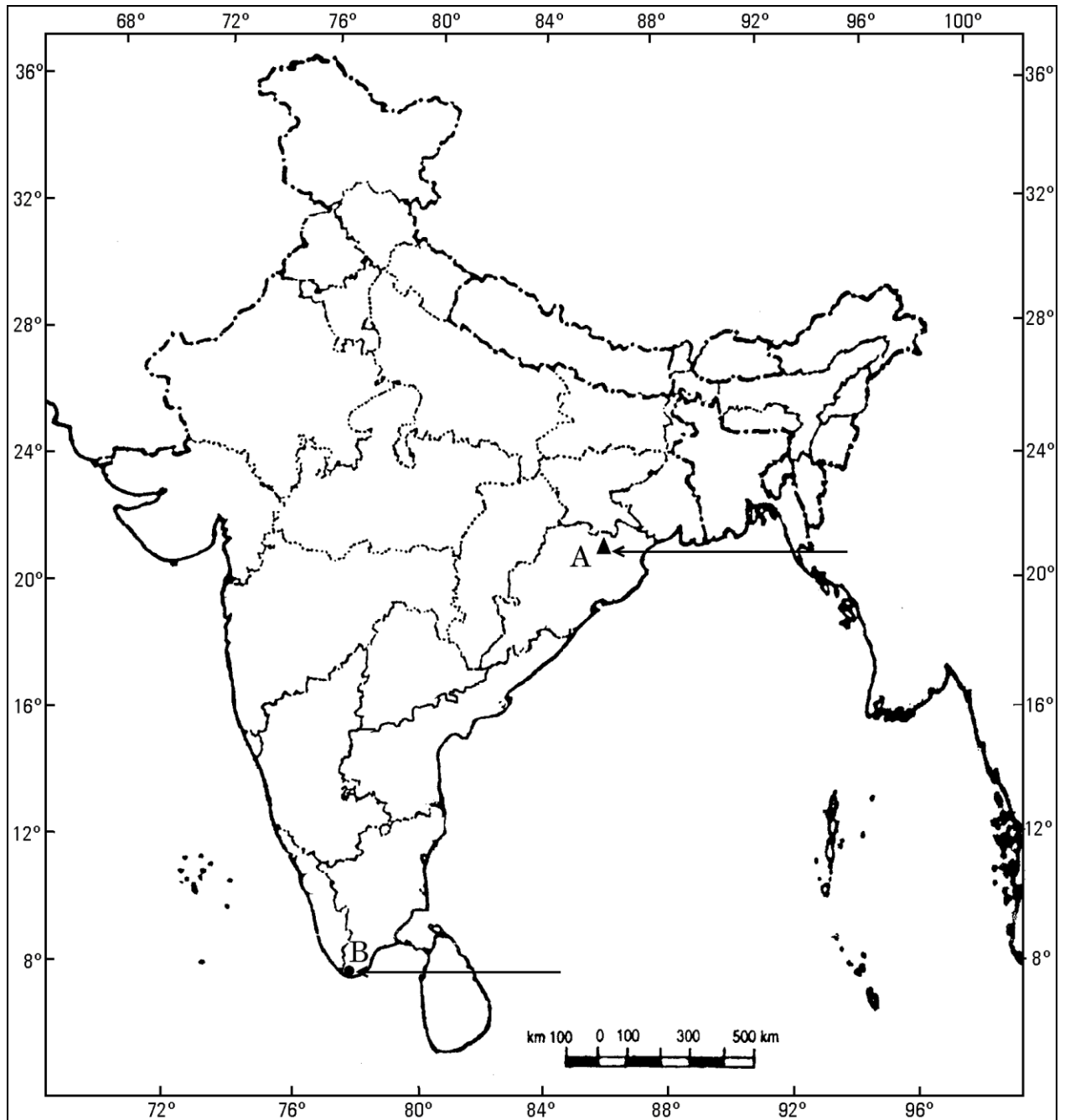


भारत का रेखा-मानचित्र (राजनीतिक)  
Outline Map of India (Political)





भारत का रेखा-मानचित्र (राजनीतिक)  
**Outline Map of India (Political)**



# MARKING SCHEME

## SOCIAL SCIENCE (FOREIGN)

SECONDARY SCHOOL EXAMINATION

MARCH 2015

**CODE NO. 32/2/3**

Q.NO.	EXPECTED ANSWERS/ VALUE POINTS	Page	MARKS
1	<b>Requirement for a political party to be recognized as a ‘State Party’</b>  A party that secures at least six percent of the total votes in an election to the legislative Assembly of a state and wins at least two seats is recognized as a state party	Pg-79(D)	<b>1</b>
2	<b>JawaharLal Nehru port developed</b>  To decongest the Mumbai port and serve as a hub port for the region.	Pg-87(G)	<b>1</b>
3	Democracy is the best form of government.	Pg-90(D)	<b>1</b>
4	<b>Democracy is a better form of Government or any other alternative</b>  It promotes equality among citizens/ enhances the dignity of the individual / improves the quality of decision- making / Allows room to correct mistakes.	Pg-90(D)	<b>1</b>
5	<b>Indian Government removed barriers:</b>  The Government felt that competition would improve the performance of producer within the country.	Pg-64(E)	<b>1</b>
6	<b>Two forms of modern currency</b>  Paper notes and coins	Pg-40(E)	$\frac{1}{2} + \frac{1}{2} = \mathbf{1}$
7	<b>Logo like to see on a tin of edible oil</b>  Agmark	Pg-85(E)	<b>1</b>
8	<b>Major issues taken up by the liberal nationalists</b>  Freedom of the Press	Pg-12(H)	

	<p><b>Or</b></p> <p><b>Nghe An and Ha Tinh</b></p> <p>Provinces of Vietnam were among the poorest and had an old radical tradition</p>	Pg-43(H)	<b>1</b>
9	<p><b>Efforts made by the legal organisation to reform political parties in India</b></p> <p>(1) To check defection, the constitution was amended to prevent elected MLA and MPS from changing parties.</p> <p>(2) The Supreme Court passed an order to reduce the influence of money and criminal, by making it mandatory to produce an affidavit giving details of property and criminal cases pending.</p> <p>(3) The election commission passed an order making it necessary for political parties to hold their organizational election and file their income tax returns.</p> <p>(4) Any other relevant point.</p> <p>Explain three points</p>	Pg-86(D)	<b>3</b>
10	<p><b>Participation of women in Civil Disobedience Movement</b></p> <p>(1) Women in large number participated in Civil Disobedience Movement.</p> <p>(2) During salt march thousands of women came out of their homes to listen to Gandhiji.</p> <p>(3) They participated in protest marches, manufactured salt.</p> <p>(4) They picketed foreign cloth and liquor shops.</p> <p>(5) Many went to jail.</p> <p>(6) They began to see service to the nation as a sacred duty of women.</p> <p>(7) Any other relevant point.</p> <p>Any three points</p>	Pg-66,67(H)	<b>3</b>
11	<p><b>Biogas to solve energy problem:</b></p> <p>(1) Availability of raw material.</p>		

	<p>(2) Awareness to be created about biogas.</p> <p>(3) It will reduce the burden on conventional sources of energy.</p> <p>(4) Educate the rural people about the use of biogas.</p> <p>(5) It is a renewable source of energy.</p> <p>(6) Eco-friendly</p> <p>(7) Model structures to be introduced by the government agencies at a subsidised rate.</p> <p>(8) Any other relevant point.</p> <ul style="list-style-type: none"> <li>• Since it is a value based question, children's view reflecting local conditions and additional points may be given due consideration.</li> </ul>	Pg-62(G)	<b>3X1=3</b>
12	<p><b>Major problems faced by the road transport</b></p> <p>(1) The road network in India is inadequate.</p> <p>(2) About 50% roads are metalled which limit their usage during the rainy season.</p> <p>(3) The National Highways are inadequate too.</p> <p>(4) Roadways are highly congested in cities.</p> <p>(5) Most of the bridges and culverts are old and narrow.</p> <p>(6) Any other relevant point</p> <p>Any three points to be described</p>	Pg-84(G)	<b>3X1=3</b>
13	<p><b>Industrialist relate to Civil-Disobedience Movement-</b></p> <p>(1) Indian industrialist had made huge profits during the First World War.</p> <p>(2) They became powerful. They wanted to expand their business, they wanted protection against imports of foreign goods.</p> <p>(3) They formed the Indian Industries and commercial Congress in 1920 and 1927.</p> <p>(4) They formed Federation of the Indian Chamber of Commerce and Industries.</p>		

	<p>(5) Purshotamdas, Thakurdas and G.D Birla attacked colonial control over the Indian economy and supported the Civil Disobedience Movement.</p> <p>(6) They gave financial assistance and refused to buy or sell imported goods.</p> <p>(7) Any other relevant point.</p> <p>Analyse any three points</p>	Pg-66(H)	<b>3X1=3</b>
14	<p><b>While buying / purchasing medicine the following precautions should be taken:-</b></p> <p>(1) Price , batch no. , date of manufacture.</p> <p>(2) Address of the manufacturing company.</p> <p>(3) Expiry date.</p> <p>(4) Directions of proper use.</p> <p>(5) Information relating to side effects and risk associated with usage of that medicine.</p> <p>(6) Any other relevant point .</p> <p>Any three points</p>	Pg-80(E)	<b>3</b>
15	<p><b>Main features of two-party system</b></p> <p>(1) Power usually changes between two parties, several may exist.</p> <p>(2) In such system people get clear choice.</p> <p>(3) The party that wins majority forms the government and the other sits in opposition.</p> <p>(4) Strong opposition is good for democracy.</p> <p>(5) Prompt decisions are taken and implemented.</p> <p>(6) More development and less corruption.</p> <p>(7) Any other relevant point.</p> <p>Any three points</p>	Pg-77(D)	<b>3</b>

16	<p><b>Money has made transactions easy</b></p> <p>(1) Any person holding money can easily exchange it with any commodity or service that he desires.</p> <p>(2) Everyone prefer to receive payments in money and then exchange the money for articles that they desires.</p> <p>(3) In fact money transaction system is far better than the barter system. It solve the problems of double coincidence of wants.</p> <p>(4) Money makes the economic activities quite independent from each other.</p> <p>(5) Any other relevant point</p> <p>Any three points</p>	Pg-39,40(E)	3
17	<p>(1) Rapid improvement in technology has been one of the major factor that has stimulated the globalization process.</p> <p>(2) There are several improvements in transportation technology which has made much faster delivery of goods across long distances possible at lower costs.</p> <p>(3) There have been remarkable developments in information and communication technology.</p> <p>(4) In recent times, technology in the areas of telecommunications , computers, internet has been changing rapidly.</p> <p>(5) Any other relevant point.</p> <p>Explain any three points</p>	Pg-62,63(E)	3
18	<p><b>It is true some people think that democracy produces a less effective government because-</b></p> <p>(1) Non-democratic rulers do not have to bother about deliberation in assemblies or worry about majorities and public opinion.</p> <p>(2) They can be very quick and efficient in decision-making and implementation.</p> <p>(3) But democracy is based on the idea of deliberation and negotiation. So, some delay is bound to take place.</p>		



	<p>(4) Most democracies fall short of elections that provide a fair chance to everyone.</p> <p>(5) Democratic governments do not have a very good record when it comes to sharing information with citizens.</p> <p>(6) Democracies often frustrate the needs of the people and often ignore the demands of a majority of its population.</p> <p>(7) Any other relevant point</p> <p>Any three points</p>	Pg-91,92(D)	<b>3</b>
19	<p><b>Dense and efficient network of transport and communication--</b></p> <p>(1) We use different material and services in our daily life. Some of these are available in our immediate surroundings while other requirements are met by bringing things from other places. Movement of these goods and services can be over three domains of earth.</p> <p>(2) Today the world has converted into a large village with the help of efficient and fast moving transport.</p> <p>(3) Transport has been able to achieve this with the help of equally developed communication system.</p> <p>(4) Therefore transport , communication and trade are complementary to each other.</p> <p>(5) Today India is well linked with rest of the world despite its vast size diversity , linguistic and socio-cultural plurality.</p> <p>(6) Any other relevant point.</p> <p>Any three points to be explained</p>	Pg-81(G)	<b>3</b>
20	<p><b>Economic nationalism strengthened the wider nationalist sentiment.</b></p> <p>(1) In the economic sphere liberalization stood for the freedom of markets and the abolition of state imposed restrictions on the movement of goods and capital.</p> <p>(2) There was a strong demand of the emerging middle classes. For example, the German speaking regions in the first half of the 19<sup>th</sup> century.</p>		



21	<p><b>The popular struggles are integral to the development of democracy----</b></p> <p>(1) Popular struggles are a part of working democracy.</p> <p>(2) Struggles are essential to save democracy. For example Nepal's struggle for restoration of democracy and Bolivia's water war.</p> <p>(3) It is only in democracy that different individual groups can express their feelings.</p> <p>(4) The people do not agree with policies of the government, they can oppose it with all their might and constant popular struggle to achieve their goal.</p> <p>(5) Democracy evolves through popular struggle.</p> <p>(6) Any other relevant point.</p>	Pg-60(D)	5
22	<p><b>Significance of the Civil Disobedience Movement</b></p> <p>(1) The Civil Disobedience movement launched against the arrival of the Simon Commission. This continues between 1930-34.</p> <p>(2) Complete Independence was the main aim of Civil Disobedience movement which formulated this demand in the Lahore session.</p> <p>(3) It was full fledged mass movement.</p> <p>(4) Mahatma Gandhi started famous Salt march.</p> <p>(5) On 6<sup>th</sup> April, he ceremonically violated the law, manufacturing salt by boiling sea water.</p> <p>(6) This marked the beginning of Civil Disobedience Movement.</p> <p>To be assessed as a whole</p>	Pg-62,63	5
23	<p><b>Factors responsible for concentration of Iron and Steel Industries in Chotanagpur Plateau:-</b></p> <p>(1) Low cost of Iron-ore.</p> <p>(2) High grade raw material in proximity.</p> <p>(3) Cheap labour.</p>		

	<p>(4) Vast growth potential to the home market.</p> <p>(5) Good transport connectivity.</p> <p>(6) Availability of water resources.</p> <p>(7) Any other relevant point</p> <p>Any five points to be explained</p>	Pg-73(G)	5
24	<p><b>Sentiment of Nationalism in the first half of the 19<sup>th</sup> century</b></p> <p>(1) Nationalist groups became increasingly intolerant, which leads to war.</p> <p>(2) Major European powers manipulated the nationalist aspirations to further their own imperialist aims.</p> <p>(3) Source of nationalist tension in Europe was the area called Balkans.</p> <p>(4) Idea of romantic nationalism in the Balkan together with disintegration of the Ottoman Empire made this region very explosive.</p> <p>(5) One by one , European nationalities broke away from its control and declared independence.</p> <p>(6) The Balkan peoples based their claims for independence or political rights on nationality to prove that they were once independent but were subjugated by foreign power.</p> <p>(7) As the different salvic nationalities struggled to define their identity and independence, the Balkan area became an area of intense conflict.</p> <p>To be assessed as a whole</p> <p><b>Or</b></p> <p><b>Role of Women in the anti-imperialist movement</b></p> <p>Women played very important role in anti-imperialist movement in Vietnam in the following ways:-</p> <p>(1) In 1960's photographs in magazines and journals showed women as brave fighters.</p> <p>(2) They have portrayed as young , brave and dedicated .</p>	Pg-26(H)	5

	<p>(3) Women were represented not only as warriors but also as hard workers as shown with a rifle in one hand and hammer in the other.</p> <p>(4) Whether young or old, women began to be depicted as selflessly working and fighting to save the country.</p> <p>(5) Many women responded and joined the resistance movement. They helped in nursing the wounded constructing underground rooms tunnels and fighting the enemy</p> <p>(6) Between 1965 to 1975, of the 17000 youth who worked on the trail, 70 to 80% were women.</p> <p>(7) Any other relevant point</p> <p>Any five points to be explained</p>	Pg-50(H)	5
25	<p><b>Modern democracy cannot exist without political parties:</b></p> <ul style="list-style-type: none"> <li>• We can understand the necessity of political parties by imagining a situation without parties.</li> <li>• Every candidate in the elections will be independent .</li> <li>• So, no one will be able to make any promises to the people about any major policy changes.</li> <li>• The government may be formed, but its utility will remain even uncertain.</li> </ul> <p>Elected representatives will be accountable to their constituency for what they do in the locality. But no one will be responsible for how the country will be run.</p> <p>To be assessed as a whole.</p>	Pg-74(D)	5
26	<p><b>Fair Globalization create opportunities-</b></p> <p>Globalization is not proving to be a fair deal. Fair globalization would create opportunities for all and also ensure that benefits of globalization are shared better.</p> <p>(1) Government policies must protect the interests not only of the rich and powerful but of all the people in the country.</p>		

	<p>(2) Government can ensure that labour laws are properly implemented and the workers get their rights.</p> <p>(3) Government can support small producers to improve their performance till they become strong enough to compete.</p> <p>(4) It can negotiate at the WTO for fairer rules.</p> <p>(5) Any other relevant point.</p>	Pg-70(D)	5
27	<p><b>Impact of the Right to Information Act</b></p> <p>(1) In October 2005, the Government of India enacted a law popularly known as R.T.I which ensures its citizen all the information about the functions of Government Departments.</p> <p>(2) Now it is possible for the affected citizens to pursue the progress of any scheme or policy.</p> <p>(3) To build a pressure on Government officials to deliver the results in a time bound frame.</p> <p>(4) It brings transparency in the system.</p> <p>(5) It has checked corruption to an extent.</p> <p>(6) Examples can be cited from child's own experience or from Text Book.</p> <p>(7) Any other relevant point.</p> <p>Explain any five points</p>	Pg-80(E)	5
28	<p><b>Road Transport and Rail Transport-</b></p> <p>The statement 'Road Transport' and 'Rail Transport' in India are not competitive but complementary to each other are justified in the following ways—</p> <p>(1) Road transport is more suitable for short distances whereas rail transport is more suitable for long distances.</p> <p>(2) Road transport is economical in transportation of few persons and relatively smaller amount of goods over short distances whereas rail transport is more suitable for large number of people and heavy goods.</p>		

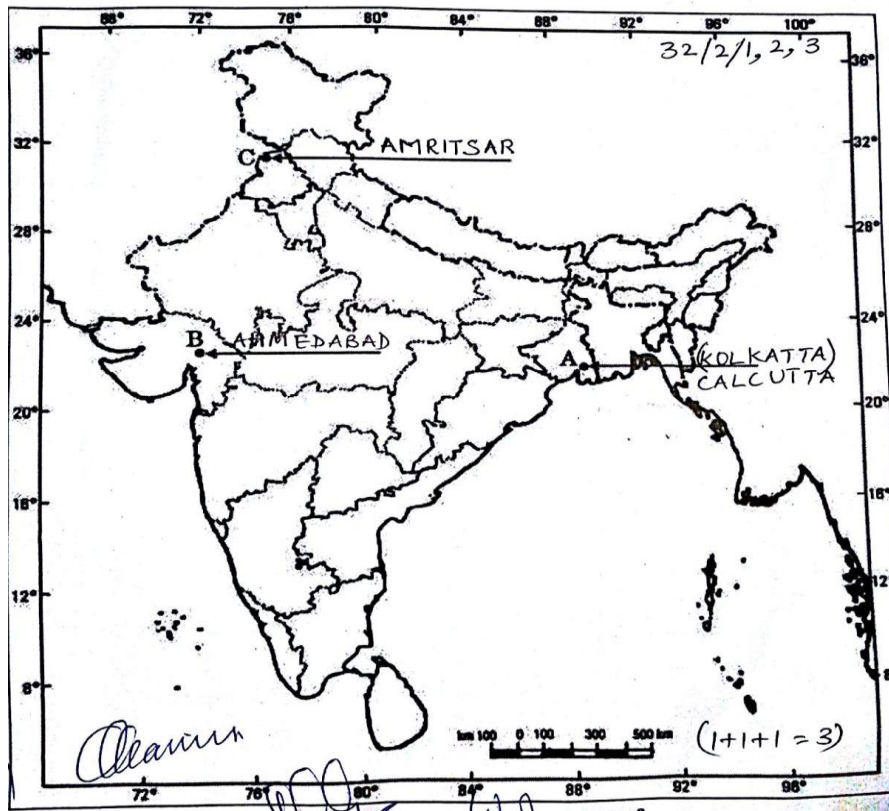
- (3) It is beneficial for perishable goods to be carried by roads in short period of time whereas non-perishable and bulky are transported by railways for a longer distances.
- (4) Road transport increases the efficiency of railways.
- (5) Road transport links the rural areas with railway stations.
- (6) The deficiency of railways is compensated by road transport.
- (7) Any other relevant point.

Any five points

Pg-82(G)

5

29



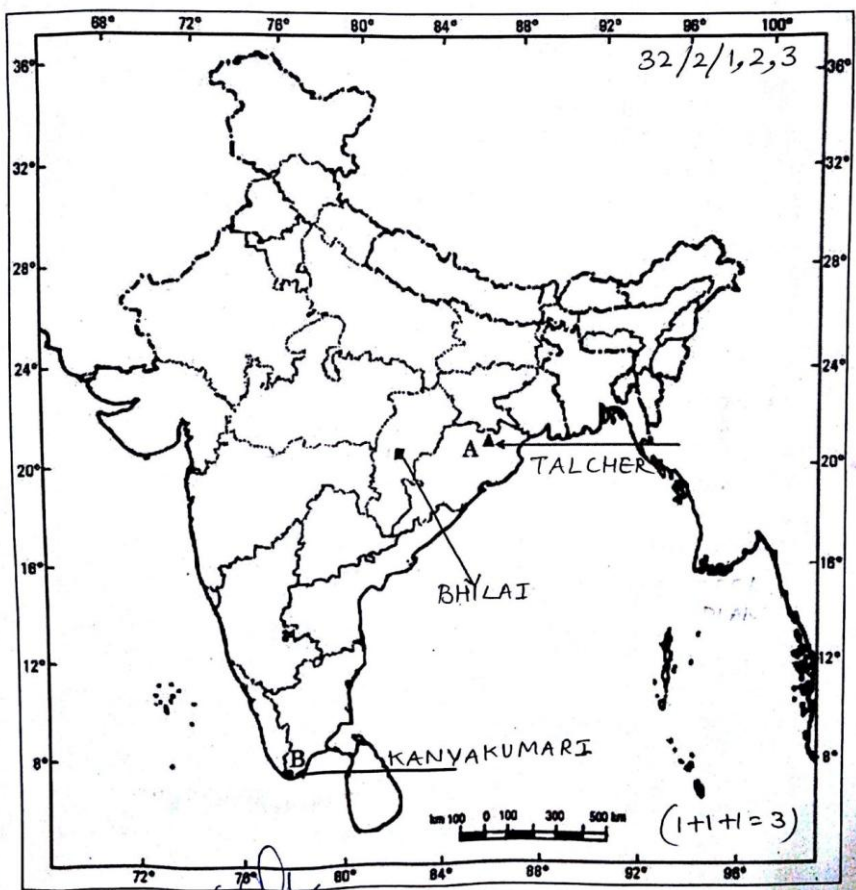
**For Visually Impaired:**

29.1 Calcutta

29.2 Ahemdabad

29.3 Amritsar

1+1+1=3



**For Visually Impaired-**

30.1 Talcher (ODISHA)

30.2 Kanyakumari

30.3 Chattisgarh

**1+1+1=3**