

CHAPTER – 7

TIME GOES ON

Page No 96:

Question 1: Think of many different things that can take different times.
Make your table as long as you can.

<i>Takes minutes</i>	<i>Takes hours</i>	<i>Takes days</i>
a bath	to stitch a shirt	to knit a sweater
to boil milk	to set curd	to weave a sari
	a school day	for a banana to become ripe

Answer:

<i>Takes minutes</i>	<i>Takes hours</i>	<i>Takes days</i>
a bath	to stitch a shirt	to knit a sweater
to boil milk	to set curd	to weave a sari
to fill a bucket of water	a school day	for a banana to become ripe
assembly in school	to clean the house	to do holiday home work

to prepare tea	Sun set and sun rise	to learn to drive car
to switch on the computer	to play	outstation trip

Disclaimer: *The answer may vary from student to student, based on his/her observation. It is highly recommended that the students prepare the answer on their own. The answer provided here is for reference only.*

Page No 97:

Question 1: Think of some other things, some faster and some slower. Make a long list.

<i>Takes months</i>
to grow wheat (from seed to big plant)
to change from summer to winter
for a baby to come out of its mother's stomach

Answer:

<i>Takes months</i>
to get promoted to next class
to prepare for exams
to grow 1 year old

Disclaimer: The answer may vary from student to student, based on his/her observation. It is highly recommended that the students prepare the answer on their own. The answer provided here is for reference only.

Page No 100:

Question 1: Birth Certificate Look at the birth certificate of Bincy.

Form Number 5
Government of Kerala
Birth Certificate

This is to certify that this information is taken from the original record of birth which is in the register for the year 2002 of Kottayam Panchayat.

Name	Bincy Thomas Jacob
Sex	Female
Date of birth:	02/05/2002 (Second May, Two Thousand Two)
Place of birth:	Kadampuzha Hospital
Name of Father:	Jacob Tharakan
Name of Mother:	Lara Thomas
Date of Registration:	02/05/2002
Registration Number	815/02

Date 05.08.2002 Signature of issuing authority

(1) 2/5/2002 shows that Bincy was born on 2 _____, in the year 2002. (2) How old will Bincy be on 2 May 2008? _____ (3) How old will she be in the year 2052? _____ (4) On what date will she be eight years old? Write in numbers. _____ (5) How many months old was Bincy on 2 August 2002? _____ (6) How many years old is Bincy now? _____ (7) After how many months of her birth was the certificate issued? (8) What is the registration number of her certificate? _____

Answer:

(1) 2/5/2002 shows that Bincy was born on 2 May, in the year 2002.

(2) Bincy was born on 2 May, 2002. From 2 May, 2002 to 1 May, 2003, her age will be 1 year From 2 May, 2003 to 1 May, 2004, her age will be 2 years Similarly, from 2 May, 2002 to 1 May, 2008, her age will 6 years (2008 – 2002) Thus, she will be 6 years old on 2 May, 2008.

(3) She was born in the year 2008. Her age in 2052 will be 44 years (2052 – 2008 = 44) So, Bincy will be 44 years old in 2052.

(4) Bincy was born on 2 May, 2002. Year in which she will be 8 years old = 2002 + 8 = 2010 So, on date 2/5/2010, she will be 8 years old.

(5) From May to June, she will be 1 month old. From June to July, she will be 2 months old. From July to August, she will b 3 months old. So, Bincy will be 3 months old in August 2002.

(6) At present, the year is 2014 and her birth year was 2002. So, her age in 2014 = 2014

-2002 = 12 years She is 12 years old in the year 2014.

(7) Bincy was born on 2 May, 2002 and the birth certificate was issued on 5 August, 2002. Now, May is the 5th month of the year and August is the 8th month of the year. So, the number of months after her birth when her certificate was issued = (8 – 5) months = 3 (8) Registration number of her certificate is $\frac{815}{02}$

Page No 101:

Question 1: Find Out When were you born? _____ Write your date of birth in numbers. _____ Do you have a birth certificate? Ask your parents and make one for yourself.

Answer:

Form Number 10
Government of Rajasthan
Birth Certificate
This is to certify that this information is taken from the original record of birth which is in the register for the year 2014 of Kotta panchayat

Name	Shikhar Pal
Sex	Male
Date of birth:	01/09/2014
Place of birth:	Jageer hospital
Name of Father:	Akshay pal
Name of Mother:	Ritu pal
Date of Registration:	10/09/2014
Registration Number	835/2014
Date	26.09.2014
Signature of issuing authority	

Disclaimer: The answer may vary from student to student. It is highly recommended that the students prepare the answer on their own. The answer provided here is for reference only.

Page No 103:

Question 1: Calendar Let us look at the calendar for the year 2006.

- How many months does a year have? _____
- List the months which have 30 days. _____

- List the months which have 31 days. _____

- How many days does the month of February have? _____
- How many days makes a week? _____

• How many weeks are there in July? _____ Is it true for all the months? _____

• In which month did you come to Class III?

• Make a circle on these dates in the calendar: 26th January 14th November 31st December. Is there something special about these dates?

Answer:

• A year has 12 months.

• Months that have 30 days are April, June, September and November

• The months that have 31 days are January, March, May, July, August, October and December.

• In a non-leap year, February has 28 days whereas in a leap year February has 29 days.

• Seven days make a week.

• There are 4 weeks in the month of July. Yes, it is true for all the months. All months have 4 weeks.

• We came to class 3 in April.

• 26th January

-Republic Day



14th November

-Children's day



31st December

-Last day of the year



- [Home](#)
- [Class 3](#)
- [Math](#)
- Chapter 7 – Time Goes On

Page No 96:

Question 1:

Think of many different things that can take different times. Make your table as long as you can.

<i>Takes minutes</i>	<i>Takes hours</i>	<i>Takes days</i>
a bath	to stitch a shirt	to knit a sweater
to boil milk	to set curd	to weave a sari

	a school day	for a banana to become ripe

Answer:

<i>Takes minutes</i>	<i>Takes hours</i>	<i>Takes days</i>	
a bath	to stitch a shirt	to knit a sweater	
to boil milk	to set curd	to weave a sari	
to fill a bucket of water	a school day	for a banana to become ripe	
assembly in school	to clean the house	to do holiday home work	
to prepare tea	Sun set and sun rise	to learn to drive car	
to switch on the computer	to play	outstation trip	

Disclaimer: The answer may vary from student to student, based on his/her observation. It is highly recommended that the students prepare the answer on their own. The answer provided here is for reference only.

Page No 97:

Question 1:

Think of some other things, some faster and some slower. Make a long list.

Takes months

to grow wheat (from seed to big plant)

to change from summer to winter

for a baby to come out of its mother's stomach

Answer:

Takes months

to get promoted to next class

to prepare for exams

to grow 1 year old

Disclaimer: The answer may vary from student to student, based on his/her observation. It is highly recommended that the students prepare the answer on their own. The answer provided here is for reference only.

Page No 100:

Question 1:

Birth Certificate Look at the birth certificate of Bincy.

Form Number 5
Government of Kerala
Birth Certificate
This is to certify that this information is taken from the original record of birth which is in the register for the year 2002 of Kollayam Panchayat.

Name	Bincy Thomas Jacob
Sex	Female
Date of birth:	02/05/2002 (Second May, Two Thousand Two)
Place of birth:	Kadampuzha Hospital
Name of Father:	Jacob Tharakan
Name of Mother:	Lara Thomas
Date of Registration:	02/05/2002
Registration Number	815/02

Date 05.08.2002 Signature of issuing authority

(1) 2/5/2002 shows that Bincy was born on 2 _____, in the year 2002. (2) How old will Bincy be on 2 May 2008? _____ (3) How old will she be in the year 2052? _____ (4) On what date will she be eight years old? Write in numbers. _____ (5) How many months old was Bincy on 2 August 2002? _____ (6) How many years old is Bincy now? _____ (7) After how many months of her birth was the certificate issued? (8) What is the registration number of her certificate? _____

Answer:

(1) 2/5/2002 shows that Bincy was born on 2 May, in the year 2002.

(2) Bincy was born on 2 May, 2002. From 2 May, 2002 to 1 May, 2003, her age will be 1 year From 2 May, 2003 to 1 May, 2004, her age will be

2 years Similarly, from 2 May, 2002 to 1 May, 2008, her age will 6 years (2008 – 2002) Thus, she will be 6 years old on 2 May, 2008.

(3) She was born in the year 2008. Her age in 2052 will be 44 years (2052 – 2008 = 44) So, Bincy will be 44 years old in 2052.

(4) Bincy was born on 2 May, 2002. Year in which she will be 8 years old = 2002 + 8 = 2010 So, on date 2/5/2010, she will be 8 years old.

(5) From May to June, she will be 1 month old. From June to July, she will be 2 months old. From July to August, she will be 3 months old. So, Bincy will be 3 months old in August 2002.

(6) At present, the year is 2014 and her birth year was 2002. So, her age in 2014 = 2014

-2002 = 12 years She is 12 years old in the year 2014.

(7) Bincy was born on 2 May, 2002 and the birth certificate was issued on 5 August, 2002. Now, May is the 5th month of the year and August is the 8th month of the year. So, the number of months after her birth when her certificate was issued = (8

-5) months = 3 (8) Registration number of her certificate is 815/02

Page No 101:

Question 1:

Find Out When were you born? _____ Write your date of birth in numbers. _____ Do you have a birth certificate? Ask your parents and make one for yourself.

Answer:

Form Number 10
 Government of Rajasthan
Birth Certificate

This is to certify that this information is taken from the original record of birth which is in the register for the year 2014 of Kotta panchayat

Name	Shikhar Pal
Sex	Male
Date of birth:	01/09/2014
Place of birth:	Jageer hospital
Name of Father:	Akshay pal
Name of Mother:	Ritu pal
Date of Registration:	10/09/2014
Registration Number	835/2014
Date	26.09.2014
	Signature of issuing authority

Disclaimer: The answer may vary from student to student. It is highly recommended that the students prepare the answer on their own. The answer provided here is for reference only.

Page No 103:

Question 1:

Calendar Let us look at the calendar for the year 2006. • How many months does a year have? _____ • List the months which have 30 days. _____ • List the months which have 31 days. _____ • How many days does the month of February have? _____ • How many days makes a week? _____ • How many weeks are there in July? _____ Is it true for all the months? _____ • In which month did you come to Class III? • Make a circle on these dates in the



-Children's day



31st December

-Last day of the year



Question 2: Fill in the blanks with the correct year: 2005 2008 2007 2004 2009 2010

1. Which year was it two years back? _____

2. In which year were you in Class II? _____

3. Which year will be the next year? _____

4. Which year will come after 3 years? _____

Answer:

1. Two years back it was 2004.

2. In 2005, we were in Class II.

3. The next year will be 2007.

4. $2006 + 3 = 2009$ After 3 years, 2009 will come.

Page No 104:

Question 1: Which Festival comes First?

Given below are some festivals we celebrate during the year. Look at the calendar (2006) to find the days on which these fall.

<i>Name of the festival</i>	<i>Date</i>	<i>Day</i>
Diwali Pongal Raksha Bandhan Gandhi Jayanti Milad-ul-Nabi Onam Guru Nanak's birthday Guru Ravidas' birthday Christmas Day Bihu	October 21 January 14 August 9 October 2 April 11 September 5 November 5 February 13 December 25 April 14	

Answer:

<i>Name of the festival</i>	<i>Date</i>	<i>Day</i>
Diwali Pongal Raksha Bandhan Gandhi Jayanti Milad-ul-Nabi Onam Guru Nanak's birthday Guru Ravidas' birthday Christmas Day Bihu	October 21 January 14 August 9 October 2 April 11 September 5 November 5 February 13 December 25 April 14	Saturday, Saturday Wednesday Monday Tuesday , Tuesday, Sunday Monday, Monday Friday

Question 2: Arrange the festivals in the order in which they come in the year.

1. _____	6. _____
2. _____	7. _____
3. _____	8. _____
4. _____	9. _____
5. _____	10. _____

Answer:

Order in which the festivals occur in the year:

1. Pongal, January 14

6. Onam, September 5

2. Guru Ravidas' birthday, February 13 7. Gandhi Jayanti, October 2

3. Milad-ul-Nabi, April 11

8. Diwali, October 21

4. Bihu, April 14

9. Guru Nanak's birthday, November 5

5. Raksha Bandhan, August 9

10. Christmas Day, December 25

Question 3: Which festival comes in the beginning of the year?

Answer:

Pongal comes in the beginning of the year.


Question 4: Which festival comes at the end of the year?

Answer:

Christmas Day comes at the end of the year.

Page No 107:

Question 1: Complete the Calendar for August 2006



Colour all the Sundays in red. On which day does this month end?
 _____ Write the number of days in this month. _____ What
 day is it on 13th August? _____ What is the date on the second
 Saturday? _____ Is the 21st a Sunday? _____ What is the day
 on the 29th? What will be the date on the same day next week? _____
 How many Thursdays are there in this month? _____

Answer:



This month ends on Thursday.

There are 31 days in the month of August.

Its a Sunday on 13th August.

On second Saturday, the date is 12/08/2006.

No, 21st is a Monday.

The day on 29th is Tuesday. Date on same day next week is 5/09/2006.

There are 5 Thursdays in this month.

Question 2: Find Out! Which months in the calendar (2006) have 5 Sundays? Is there any other day in any month which comes 5 times? Can there be 6 Sundays in a month? Why?

Answer:

In 2006, January, April, July, October and December have 5 Sundays.

All the 7 days are coming 5 times in different months in the year 2006.

No, there cannot be 6 Sundays in a month because each month has only 4 weeks in it and there will be 1 Sunday per week.

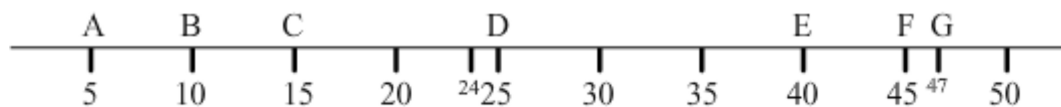
Page No 109:

Question 1: Some things that happened in her life are given below. Mark these on her time line. For example, when she was 5 years old Pedki broke her foot. A is marked at 5 on the time line.

A. Broke her foot B. Lost one goat C. Got married D. Had her fourth child
E. First saw a police station F. Learnt to read and write G. Eldest daughter got married



Answer:



Question 2: Mark on the time line when she was born.

Answer:

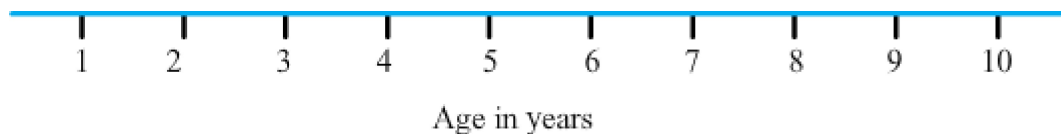


Question 3: In the blank box draw a picture of Pedki as a new born baby.

Answer:



Question 4: Make your own time line. Ask people around you and mark at least one thing that happened in each year of your life.



Answer:

Disclaimer: The answer may vary from student to student, based on his/her experience. It is highly recommended that the students prepare the answer on their own.






















Question 5: Make time lines of people you admire. These can be from among your family, friends, teachers, etc.

Answer:

***Disclaimer:** The answer may vary from student to student, based on his/her experience. It is highly recommended that the students prepare the answer on their own.*

Page No 110:

Question 1: For some pictures the time is already written and you must draw the hands on the clock. In others you have to write the time shown by the clock.

				
Kusum gets up early in the morning.		She is studying in school.		
				1 o'clock in the afternoon
She brings water from the well.		She comes back from school.		
				
She cleans her house.		She takes lunch with her brother and grandmother.		
				Five-thirty in the evening
She goes to school.		She plays with her friends.		
				9 o'clock at night
		She listens to a story from her grandmother before she sleeps.		

Answer:



Kusum gets up early
in the morning.



At six o'clock
in the morning



She brings water
from the well.



At six-thirty in
the morning



She cleans her house.



At seven thirty
in the morning



She goes to school.



At eight o'clock



She is studying in school.



At 10 o'clock
in the morning



She comes back from
school.



1 o'clock in the
afternoon



She takes lunch with her
brother and grandmother.



At 2 o'clock
in the afternoon



She plays with her friends.



Five-thirty in
the evening



She listens to a story from her
grandmother before she sleeps.










9 o'clock
at night

Page No 112:

Question 1: Now prepare a chart showing your own daily routine.

Time of the day

In words On the clock What do you do at this time

<input type="text"/>		_____
<input type="text"/>		_____
<input type="text"/>		_____
<input type="text"/>		_____
<input type="text"/>		_____
<input type="text"/>		_____
<input type="text"/>		_____

Answer:

Disclaimer: The answer may vary from student to student, based on his/her experiences. It is highly recommended that the students prepare the answer on their own.