


CHAPTER – 22

LEFT RIGHT

Page No 146:

Question 1: This is a picture with Ruchira in the centre. In this picture, draw:

- ◆ A book behind Ruchira
- ◆ A chair on Ruchira's left
- ◆ An animal on Ruchira's right
- ◆ A tree in front of Ruchira



Answer

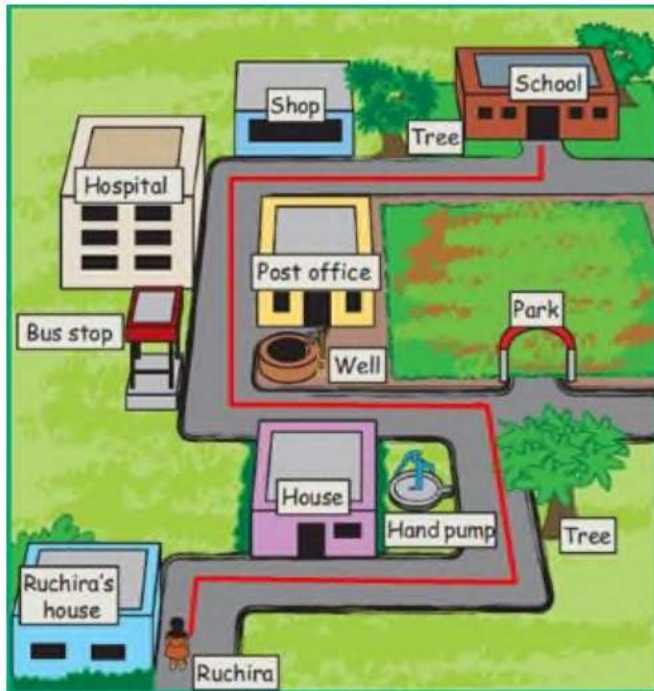


Page No 147:

Question 1: Guide Ruchira from home to school. Find the school in the picture. Also, find the way from Ruchira's home to her school. Now, with a coloured pencil, trace the way from Ruchira's home to her school.



Answer



Page No 148:

Question 1: Which places and things will Ruchira find on her way from home to school? Write their names.

_____	_____	_____	_____
_____	_____	_____	_____
_____	_____	_____	_____

Answer

Neighbour's house Hand pump Trees Park Well Bus
stop Hospital Post office Shop

Page No 148:

Question 2: Which of these places and things will she find on her right and which places on her left?

On her right

On her left

Answer

On her right

On her left

First tree

Hand pump

Park

Neighbour's house

Well

Bus stop

Post office

Hospital

Shop

Second tree

Page No 148:

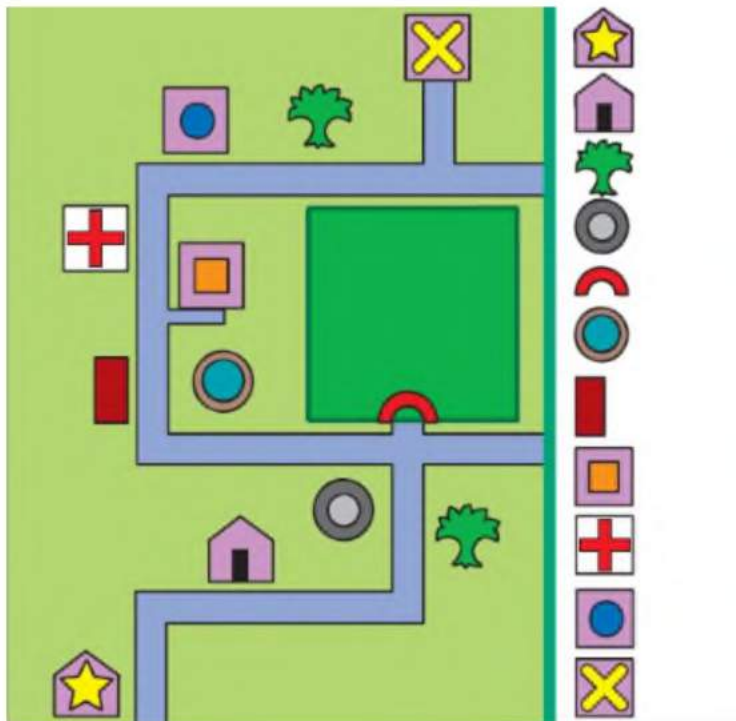
Question 3: How many times will Ruchira have to take a turn on her way from home to school?

Answer

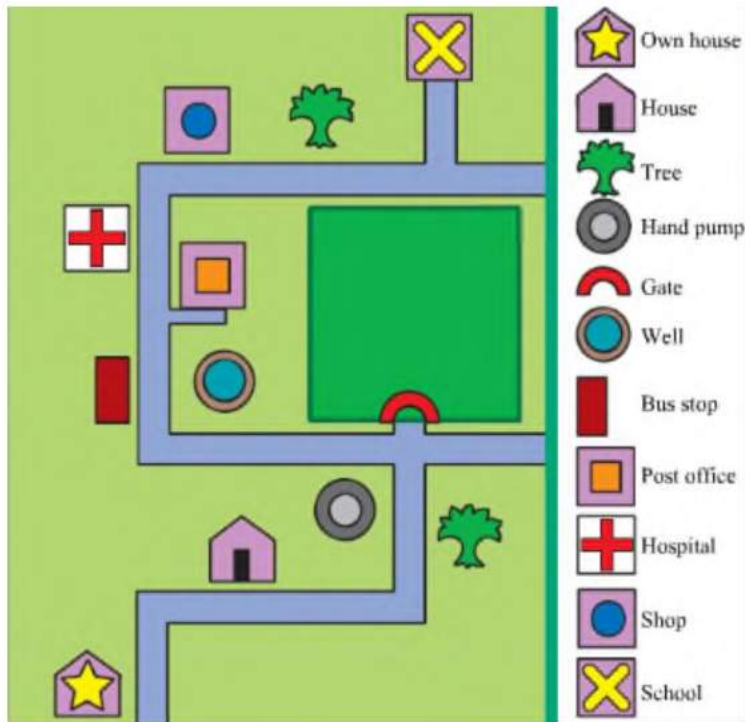
Six times

Page No 148:

Question 4: On the next page is a smaller version of the earlier picture. In this, there are symbols in place of pictures. Such a picture is called a map. Identify the symbols and write them.



Answer



Page No 149:

Question 1: Can you tell why these symbols are used?

Answer

These symbols make it easy for us to locate the destination and identify the route. Hence, these symbols are used in maps.

Page No 151:

Question 1: Which other signs can you see in your neighbourhood? Draw them and write what they indicate.

Sign

What they indicate

Answer

Disclaimer: This is a sample answer. The answer may vary from student to student, depending upon his/her observation and experience.



No parking



No smoking



U turn



No entry



Left turn



Stop

Page No 152:

Question 1: A list of symbols used in the map is given. Look carefully and write.

- ◆ How many houses are there in the map? _____
- ◆ How many shops are there in the map? _____
- ◆ How many trees are there in the map? _____
- ◆ How many pumps are there in the map? _____
- ◆ Is the school closer to the post office or to the hospital?

- ◆ What is near the bus stop? _____
- ◆ Without the list of symbols, could you have read the map?

Answer

- ◆ How many houses are there in the map? 4
- ◆ How many shops are there in the map? 1
- ◆ How many trees are there in the map? 5
- ◆ How many pumps are there in the map? 1
- ◆ Is the school closer to the post office or to the hospital? School is closer to the post office.
- ◆ What is near the bus stop? A hand pump is near the bus stop.
- ◆ Without the list of symbols, could you have read the map? We could not have read the map without the list of symbols.

Page No 153:

Question 1: Write here the symbols you have learnt in Mathematics.

Answer

***Disclaimer:** This is a sample answer. The answer may vary from student to student, depending upon his/her observation and experience.*

+

– % –

× / ≤