

CUET UG

Previous Year Paper

History 21 Aug 2022 Shift 1

9/9/22, 1:07 AM

NTA

CUET UG - 2022

(CANDIDATE RESPONSE SHEET)

Roll No

App No

Name

Paper/Subject HISTORY

Exam Date 21 Aug 2022

Exam Slot 1

Question ID:594431

Section Name:HISTORY

Question:

Which of the following was a class of people in the countryside that lived off agriculture but did not participate directly in the process of agricultural production?

- A Zamindars
- B Mandals
- C Patidar
- D Jotedars

Answer Given By Candidate:A

Question ID:594432

Section Name:HISTORY

Question:

Over 95 percent of the sale of mahals held by the Raja of Burdwan at the auction was fictitious because :

- A. The sale was done by evading the tax.
- B. The Raja was happy on this sale.
- C. The Raja's estates had been publicly sold, but he remained in control of his zamindari.
- D. Many of the purchasers turned out to be servants and agents of the Raja who had bought the lands on behalf of their master.

Choose the correct answer from the options given below :

- A A and B Only
- B B and C Only
- C C and D Only
- D A and D Only

Answer Given By Candidate:C

Question ID:594433

Section Name:HISTORY

Question:

Francis Buchanan, the British official had a visit to the hills of the Paharias in the year :

- A 1810
- B 1820
- C 1910
- D 1920

Answer Given By Candidate:Not Attempted

Question ID:594434

Section Name:HISTORY

Question:

One of the main sources of our knowledge about what the rebels wanted is :

- A The books written by the rebel leaders
- B The Azamgarh Proclamation, 25 August 1857
- C The official records of the British
- D The British newspapers

Answer Given By Candidate:C

Question ID:594435

Section Name:HISTORY

Question:

Which Governor General adopted policies aimed at "reforming" Indian society by introducing English education.

- A Lord Wellseley
- B Lord William Bentinck
- C Lord Cornwallis
- D Lord Irwin

Answer Given By Candidate:C

Question ID:594436

Section Name:HISTORY

Question:

Which of the following is not an architectural style of the British buildings in India :

- A Neo-Gothic style
- B Neo-Classical style
- C Persian style
- D Indo-Saracenic style

Answer Given By Candidate:C

Question ID:594437

Section Name:HISTORY

Question:

In the context of the Revolt of 1857 the term "revolt" refers primarily to :

- A The uprising of the civilian population (Peasants, Zamindars, Rajas, Jagirdars)
- B The uprising of the Sepoys only
- C The National Movement
- D The uprising of the tribals

Answer Given By Candidate:B

Question ID:594438

Section Name:HISTORY

Question:

The Ain-i-Akbari is made up of several books, choose the correct one :

- A Three
- B Six
- C Four
- D Five

Answer Given By Candidate:A

Question ID:594439

Section Name:HISTORY

Question:

Which party announced "Direct Action Day" in British India?

- A Indian National Congress
- B Swaraj Party
- C Muslim League

D Hindu Mahasabha

Answer Given By Candidate:C

Question ID:5944310

Section Name:HISTORY

Question:

Why did people believe in the rumours during the 1857 Revolt of? Arrange the following in sequence-

- A. In situations of uncertainty rumours spread swiftly
- B. rumours circulated only when they resonated with deeper fears and suspicion
- C. The British established laws to abolish "Sati" and permit widow remarriage
- D. The activities of Christian missionaries aggravated oppressive perceptions.

Choose the correct answer from the options given below :

A A B C D

B D C A B

C B A C D

D B C D A

Answer Given By Candidate:Not Attempted

Question ID:5944311

Section Name:HISTORY

Question:

The East India Company set up its trading activities first in :

- A Madras
- B Calcutta
- C Surat
- D Bombay

Answer Given By Candidate:C

Question ID:5944312

Section Name:HISTORY

Question:

In which year was Bombay given to the British Crown as a part of the dowry of Queen Catherine of Braganza?

- A 1659
- B 1661

C 1663

D 1665

Answer Given By Candidate: **Not Attempted**

Question ID:5944313

Section Name:HISTORY

Question:

Who was the political guru of Mahatma Gandhi?

A Bal Gandadhar Tilak

B Bipin Chandra Pal

C Lala Lajpat Rai

D Gopal Krishna Gokhale

Answer Given By Candidate: **D**

Question ID:5944314

Section Name:HISTORY

Question:

The judge who presided over the trial of Gandhiji after the Non-Cooperation Movement was

A Louis Fisher

B Lord Irwin

C C N Broomfield

D George Orwell

Answer Given By Candidate: **A**

Question ID:5944315

Section Name:HISTORY

Question:

From the jumbled events, select the correct sequencing :

A. Mahatma Gandhi attends the First Round Table Conference at London.

B. The Dandi March marks the beginning of the Civil Disobedience Movement.

C. The Quit India Movement takes place.

D. At the Lahore session of the Indian National Congress "Purna Swaraj" was accepted as the goal.

Choose the correct answer from the options given below :

- A B D A C
- B C A B D
- C A B C D
- D D B A C

Answer Given By Candidate:A

Question ID:5944316
Section Name:HISTORY
Question:
Find the wrong pair :

- A. Labour government in London : 1945
- B. Cabinet Mission : 1940
- C. Direct Action Day : 1946
- D. Partition of India : 1947
- E. Quit India Movement : 1941

Choose the correct answer from the options given below :

- A C, D Only
- B B, E Only
- C A, B, C Only
- D D, E, A Only

Answer Given By Candidate:B

Question ID:5944317
Section Name:HISTORY
Question:
Which of the following combination of statements is correct :

- A. In 1937, first time Provincial Elections held.
- B. The Muslim League failed to win a single seat in the North West Frontier Province.
- C. The Muslim League did very good in reserved constituencies.
- D. All the adult population exercised voting right in 1937.

Choose the correct answer from the options given below :

- A B and C Only
- B A and B Only
- C C and A Only
- D D and A Only

Answer Given By Candidate: **D**

Question ID:5944318

Section Name:HISTORY

Question:

Find out the arrangement of these statements in sequence :

- A. When Jotiba Phule in Maharashtra pointed to the suffering of the depressed castes, he was demanding economic and social justice.
- B. When social reformers opposed child marriage, they were pleading for social justice.
- C. The National Movement against a government that was oppressive was a struggle for democracy and justice, rights and equality.
- D. The Constituent Assembly expressed the aspirations of those who had participated in the movement for independence.

Choose the correct answer from the options given below :

- A A, B, C, D
- B B, A, C, D
- C D, B, A, C
- D C, A, B, D

Answer Given By Candidate: **Not Attempted**

Question ID:5944319

Section Name:HISTORY

Question:

The notion of minority as defined by N.G. Ranga was :

- A Minorities for Ranga were Hindus in Pakistan
- B Minorities for Ranga were the Sikhs and Muslims
- C Minorities for Ranga were the Hindus, Sikhs, Muslims and Tribals
- D Minorities for Ranga were the poor and the downtrodden

Answer Given By Candidate:C

Question ID:5944320

Section Name:HISTORY

Question:

Put the following statements in sequence :

- A. Dr. B. R. Ambedkar was appointed as the law minister with the recommendation of Gandhiji
- B. Vallabhbhai Patel worked mostly behind the scenes, drafting several reports
- C. Jawaharlal Nehru declared the "Objectives Resolution", defining ideas of the Constitution
- D. Steering constructive discussion in the Constituent Assembly was taken care of by Dr. Rajendra Prasad

Choose the correct answer from the options given below :

- A A, D, C, B
- B D, A, B, C
- C B, A, C, D
- D C, B, D, A

Answer Given By Candidate:Not Attempted

Question ID:5944321

Section Name:HISTORY

Question:

In the Vitthala temple, the principal diety was Vitthala, a form of Vishnu it was worshipped in which region?

- A Karnataka
- B Maharashtra
- C Madhya Pradesh
- D Andhra Pradesh

Answer Given By Candidate:Not Attempted

Question ID:5944322

Section Name:HISTORY

Question:
Match List - I with List - II

List - I (Terms used for Ruling Lineages)	List - II (The Ruling Lineages for which these terms were used)
A. Gajapati	I. The Rajas of Vijayanagara
B. Ashvapati	II. The Rulers of Orissa
C. Narapati	III. The Deccan Sultans

Choose the correct answer from the options given below:

- A A-II, B-III, C-I
- B A-I, B-II, C-III
- C A-III, B-II, C-I
- D A-II, B-I, C-III

Answer Given By Candidate:B

Question ID:5944323
Section Name:HISTORY

Question:
The first revenue settlement in the Bombay Deccan was made in-

- A 1850s
- B 1840s
- C 1830s
- D 1820s

Answer Given By Candidate:A

Question ID:5944324
Section Name:HISTORY

Question:

Arrange the following events in the correct order of their occurrence :

- A. Thousands killed in Amritsar on Independence Day
- B. Tension grew due to the rule of music before the mosque.
- C. Pakistan Resolution passed by Muslim League.
- D. Riots in Calcutta by people armed with rods and lathis.
- E. Meeting between Mahatma Gandhi and Abdul Gaffar Khan in NWFP

Choose the correct answer from the options given below :

- A A,B, C, D, E
- B B, E, D, A, C
- C C B A E D
- D B E C D A

Answer Given By Candidate:**B**

Question ID:5944325

Section Name:HISTORY

Question:

Which of the following is an imperial order?

- A Farman
- B Salat
- C Fatwa
- D Hukum

Answer Given By Candidate:**A**

Question ID:5944326

Section Name:HISTORY

Question:
Match List - I with List - II

List - I (Different Sufi Terms)	List - II (Their meanings)
A. Sama	I. Pilgrimage
B. Zikr	II. Hospice
C. Khanqah	III. Audition
D. Ziyarat	IV. Reciting the divine names

Choose the correct answer from the options given below:

- A A-IV, B-III, C-II, D-I
- B A-III, B-IV, C-II, D-I
- C A-I, B-II, C-III, D-IV
- D A-II, B-III, C-I, D-IV

Answer Given By Candidate:**B**

Question ID:5944327
Section Name:HISTORY

Question:
Which of the following travellers wrote about the way silver travelled across the globe to reach India?

- A Duarte Barbosa
- B Domingo Paes
- C Giovanni Careri
- D Francois Bernier

Answer Given By Candidate:**Not Attempted**

Question ID:5944328
Section Name:HISTORY

Question:
Who among the following was the author of the book "Rihla" ?

- A Peter Mundy
- B Marco Polo
- C Al Biruni
- D Ibn Battuta

Answer Given By Candidate:C

Question ID:5944329
Section Name:HISTORY
Question:
Match List - I with List - II

List - I (Foreign Travellers)	List - II (Country they came from)
A. Nicolo de Conti	I. Portugal
B. Abdur Razzaq Samarqandi	II. Russia
C. Afanasii Nikitin	III. Italy
D. Domingo Paes	IV. Iran

Choose the correct answer from the options given below:

- A A-IV, B-III, C-II, D-I
- B A-III, B-IV, C-II, D-I
- C A-III, B-II, C-IV, D-I
- D A-III, B-IV, C-I, D-II

Answer Given By Candidate:B

Question ID:5944330
Section Name:HISTORY
Question:
The "Peshkash" levied on forest people often included the supply of _____.

- A Grains
- B Elephants
- C Wood
- D Horses

Answer Given By Candidate:B

Question ID:5944331
Section Name:HISTORY
Question:
Which of the following is NOT true about Jainism?

- A The basic philosophy of Jainism was popular even before the birth of Mahavira
- B It believed that entire world is animated

- C It asserted that the cycle of birth and rebirth is shaped through Karma
- D Eight vows were taken up by the Jaina monks

Answer Given By Candidate:D

Question ID:5944332

Section Name:HISTORY

Question:

According to which text, Ashoka distributed portions of the Buddha's relics to every important town and ordered the construction of stupas over them ?

- A Vinayapita
- B Ashokavadana
- C Divyavadana
- D Sutta Pitaka

Answer Given By Candidate:Not Attempted

Question ID:5944333

Section Name:HISTORY

Question:

As the discussion between pro-Hindi and anti-Hindi members of the Constituent Assembly became acrimonious, many members appealed for a spirit of accommodation. One of such member was :

- A R V Dhulekar
- B G Durgabai
- C Shri Shankarrao Deo
- D J Nagappa

Answer Given By Candidate:Not Attempted

Question ID:5944334

Section Name:HISTORY

Question:

Who was the author of the book "The Other Side of Silence"?

- A Saadat Hasan Manto
- B Khushdeva Singh
- C Prakash Tandon
- D Urvashi Butalia

Answer Given By Candidate:B

Question ID:5944335

Section Name:HISTORY

Question:

Brahmi and Kharoshti, two scripts used in earliest inscriptions and coins, were deciphered by :

- A Alexandar Cunningham
- B R E M Wheeler
- C James Prinsep
- D John Marshall

Answer Given By Candidate:A

Question ID:5944336

Section Name:HISTORY

Question:

Match List - I with List - II

List - I	List - II
A. Silappadikaram	I. Tamil Epic
B. Prayaga Prashasti	II. Written by Harishena
C. Informs about Sanguttuvan visit to forest	III. Prayaga Prashasti
D. Praises Samudra Gupta	IV. Silappadikavam

Choose the correct answer from the options given below:

- A A-I, B-II, C-IV, D-III
- B A-I, B-II, C-III, D-IV
- C A-IV, B-III, C-II, D-I
- D A-III, B-IV, C-I, D-II

Answer Given By Candidate:C

Question ID:5944337

Section Name:HISTORY

Question:

The Lottery Committee was commissioned in the city of :

- A Madras
- B Bombay

- C Calcutta
- D Kanpur

Answer Given By Candidate:Not Attempted

Question ID:5944338
Section Name:HISTORY
Question:

Ploughing as agriculture technique was practiced in Harappan Civilization.

Which one of the following is NOT the evidence to prove the above statement?

- A Terracotta models of plough have been found at the sites of Cholistan and Banawali
- B Motifs of plough displayed on the seals have been found
- C Representation of bull on seals which might have been used for ploughing
- D Evidence of ploughed field at Kalibangan

Answer Given By Candidate:B

Question ID:5944339
Section Name:HISTORY
Question:
Match List - I with List - II

List - I	List - II
A. Haza-bird	I. Oman
B. Magan	II. Peacock
C. Dilmun	III. Harappan region
D. Meluhha	IV. Bahrain

Choose the correct answer from the options given below:

- A A-II, B-I, C-IV, D-III
- B A-I, B-II, C-III, D-IV
- C A-IV, B-III, C-II, D-I
- D A-III, B-II, C-IV, D-I

Answer Given By Candidate:A

Question ID:5944340
Section Name:HISTORY

Question:

The British authorities invited the Santhals to settle in the Rajmahal Hills. Choose the correct statements-

- A. They were the original inhabitants of the Rajmahal Hills
- B. They were eager to adopt settled agriculture
- C. They were very powerful zamindars
- D. The Santhals forced the Paharias to move deeper into the hills, as the British wanted.

Choose the correct answer from the options given below :

- A A and C Only
- B C and B Only
- C B and D Only
- D A and B Only

Answer Given By Candidate:C

Passage:

Painters too were involved in the production of Mughal manuscripts, Chronicles narrating the events of a Mughal emperor's reign contained, alongside the written text images that described an event in visual form. When scenes or themes in a book were to be given visual expression, the scribe left blank spaces on nearby pages; paintings, executed separately on nearby pages; paintings, executes separately by artists, were inserted to accompany what was described in words. These paintings were miniatures, and could therefore be passed around for viewing and mounting on the pages of manuscripts.

Paintings served not only to enhance the beauty of a book, but were believed to possess special powers of communicating ideas about the kingdom and the power of kings in ways that the written medium could not. The historian Abu'l Fazl described painting as a "magical art": in his view it had the power to make inanimate objects look as if they possessed life.

Question ID:5944341

Section Name:HISTORY

Question:

_____, executed separately by artists, were inserted to accompany the description in words-

- A Manuscripts

- B Scribes
- C Paintings
- D Writers

Answer Given By Candidate:C

Question ID:5944342

Section Name:HISTORY

Question:

Chronicles narrated the events of a Mughal Court and alongside the written text _____ described events.

- A Comments on text
- B Images
- C Critical notes
- D Calligraphy

Answer Given By Candidate:B

Question ID:5944343

Section Name:HISTORY

Question:

_____ too were involved in the production of manuscripts.

- A Painters
- B Publishers
- C Biographer
- D Chronicles

Answer Given By Candidate:A

Question ID:5944344

Section Name:HISTORY

Question:

The painter introduced a new kind of painting for mounting on the pages of manuscripts

- A Illumination with silver and gold foil
- B Elaborate illustration
- C Portrait painting
- D Miniature painting

Answer Given By Candidate: **B**

Question ID: **5944345**

Section Name: HISTORY

Question:

Painting possesses special powers of _____ ideas.

- A Developing
- B Generating
- C Communicating
- D Conceptualising

Answer Given By Candidate: **C**

Passage:

These complexities are reflected in another term used in texts to refer to social categories - *jati*. In Brahmanical theory, *jati*, like *varna*, was based on birth. However, while the number of *varnas* was fixed at four, there was no restriction on the number of *jatis*. In fact, whenever Brahmanical authorities encountered new groups- for instance, people living in forests such as the *nishadas* - or wanted to assign a name to occupational categories such as the goldsmith or *suvarnakara*, which did not easily fit into the fourfold *varna* system, they classified them into the fourfold *varna* system, they classified them as a *jati*, *Jatis* which shared a common occupation or profession were sometimes organised into shrenis or guilds.

We seldom come across documents that record the histories of these groups.

Question ID: **5944346**

Section Name: HISTORY

Question:

In Brahmanical theory Jati was based on _____ like Varna.

- A Birth
- B Patriline
- C Community
- D Social background

Answer Given By Candidate: **A**

Question ID:5944347

Section Name:HISTORY

Question:

The number of Varnas was fixed at four, for number of Jatis there was no _____.

- A Literary information
- B Restriction
- C Exact instruction in the Brahmanical text
- D Evidence

Answer Given By Candidate:**B**

Question ID:5944348

Section Name:HISTORY

Question:

Certain communities were assigned a name of occupational category such as _____.

- A Nishada
- B Shudras
- C Suvarnakara
- D Peasants

Answer Given By Candidate:**A**

Question ID:5944349

Section Name:HISTORY

Question:

Jatis which shared a common occupation or profession organised into _____

- A New Caste
- B Varnas
- C Chiefs
- D Shrenis

Answer Given By Candidate:**D**

Question ID:5944350

Section Name:HISTORY

Question:

People living in forests were named in Brahmanical texts, Ekalavya belonged to _____.

- A The hunter gatherer
- B Nishadas
- C Mlechchhas
- D Yavanas

Answer Given By Candidate:B

CUET UG - 2022
(CANDIDATE RESPONSE SHEET)

Roll No [REDACTED]
App No [REDACTED]
Name [REDACTED]
Paper/Subject ENGLISH
Exam Date 21 Aug 2022
Exam Slot 1

Passage:
Read the given passage carefully and answer questions that follow:

Self-directed learning in its broadest meaning, describes a process in which individuals take the initiative with or without the help of others, in diagnosing their learning needs, formulation of learning goals, identifying resources for learning, choosing and implementing learning strategies and evaluating learning outcomes. Thus, it is important to attain new knowledge easily and skillfully for the rest of his or her life.

What is the need for self-directed learning? One reason is that there is convincing evidence that people, who take the initiative in learning, learn more things and learn better than people waiting to be taught. The second reason is that self-directed learning is more in tune with our natural processes of psychological development; an essential aspect of maturing is developing the ability to take increasing responsibility of our own lives to become increasingly self-directed. The third reason is that many of the new developments in education put a heavy responsibility on the learners to take a good deal of initiative in their own learning. To meet the challenges in today's instructive environment, self-directed learning is most essential.

Question ID:16511
Section Name:ENGLISH
Question:
The title that best expresses the ideas of the passage is:

- A Self-Directed Learning
- B Learning a boon or bane
- C Fun-Filled Learning
- D Logical Learning

Answer Given By Candidate:A

Question ID:16512

Section Name:ENGLISH

Question:

Why is self-directed learning important?

- A To find a suitable job
- B To secure admission in a reputed institute
- C To upgrade our academic records
- D This helps us learn more, learn better and helps us keep in tune with our psychological development

Answer Given By Candidate:D

Question ID:16513

Section Name:ENGLISH

Question:

Which word describes self-directed learning?

- A Motivated learning
- B Compulsory learning
- C Forced learning
- D Hopeless learning

Answer Given By Candidate:A

Question ID:16514

Section Name:ENGLISH

Question:

The passage implies the benefits of self-directed learning except _____

- A it helps people to learn more things in a better way
- B it prepares us to keep pace with our own psychological development
- C

- it is motivating and less challenging
- D it helps us to meet the present challenges of life

Answer Given By Candidate:C

Question ID:16515
Section Name:ENGLISH
Question:

According to the author, the modern environment is _____.

- A morose
- B instructive
- C impractical
- D stereotyped

Answer Given By Candidate:B

Question ID:16516
Section Name:ENGLISH
Question:

Match List I with List II

List I	List II
A. When individuals take the initiative to learn themselves	I. It is called "Self-directed learning"
B. Self-directed learners are able to	II. identify their own learning outcomes
C. Ability to take more responsibility is	III. a sign of growing maturity
D. New development in education	IV. is putting more responsibility on the learners

Choose the correct answer from the options given below:

- A A-I, B-II, C-III, D-IV
- B A-IV, B-III, C-II, D-I
- C A-III, B-IV, C-I, D-II
- D A-II, B-III, C-IV, D-I

Answer Given By Candidate:A

Passage:

Read the given passage carefully and answer the questions that follow:

Every morning Ravi gives his brain an extra boost. We're not talking about drinking strong cups of coffee or playing one of those mind-training video games advertised all over. "I jump into my stationary bike and cycle for 45 minutes to work," says Ravi. "When I get to my desk, my brain is at peak activity for a few hours." After his mental focus comes to a halt later in the day, he starts it with another short spell of cycling to be able to run errands.

Ride, work, ride, repeat. It is a scientifically proven system that describes some unexpected benefits of cycling. In a recent study in the Journal of Clinical and Diagnostic Research, scientists found that people scored higher on tests of memory, reasoning, and planning after 30 minutes of spinning on a stationary bike than they did before they rode the bike. They also complete the tests faster after pedalling.

Exercise is like a fertilizer for your brain. All those hours spent on exercising your muscles, create rich capillary beds not only in leg and hip muscles, but also in your brain. More blood vessels in your brain and muscles mean more oxygen and nutrients to help them work. When you pedal, you also force more nerve cells to fire. The result: you double or triple the production of these cells-literally building your brain. You also release neurotransmitters (the messengers between your brain cells) so all those cells, new and old, can communicate with each other for better, faster functioning. That's a pretty profound benefit to cyclists.

The kind of growth is especially important with each passing birthday, because as we age, our brains shrink and those connections weaken. Exercise restores and protects the brain cells. Neuroscientists say, "Adults who exercise display sharper memory skills, higher concentration levels, more fluid thinking and greater problem-solving ability than those who are sedentary."

Question ID:16517

Section Name:ENGLISH

Question:

From what has been stated in the passage, it is not difficult to understand that

- A our body does not require any exercise.
- B exercise has harmful effect on our body and mind.
- C cycling leads to a sedentary and lazy life style.
- D exercise is like a fertilizer for our brain.

Answer Given By Candidate:D

Question ID:16518

Section Name:ENGLISH

Question:

How does Ravi give his brain an extra boost?

- A By drinking strong cups of coffee
- B By playing video games
- C By working on Power Yoga
- D By cycling

Answer Given By Candidate:**D**

Question ID:16519

Section Name:ENGLISH

Question:

What is the effect of exercise on the nerve cells?

- A We lose our temper.
- B Our body gets exhausted.
- C We develop arrogance and pride.
- D Creates more capillary beds in the brain that allow more oxygen in the brain.

Answer Given By Candidate:**Not Attempted**

Question ID:165110

Section Name:ENGLISH

Question:

What are neurotransmitters?

- A Messengers between the heart and brain
- B Messengers between brain cells
- C A type of artificial intelligence
- D A type of muscle in our legs

Answer Given By Candidate:**B**

Question ID:165111

Section Name:ENGLISH

Question:

From the passage, it may be concluded that as we age -

- A Our body and mind become more dynamic and vital.
- B We tend to become soulful.
- C Our brain is stressed out, vitalizing our soul.
- D Our brain naturally shrinks and connections within the brain weaken.

Answer Given By Candidate:D

Question ID:165112
Section Name:ENGLISH
Question:
Match List - I with List II

Part A	Part B
A. Ravi	I. boosts his brain every morning
B. I jump into my stationary bike	II. for 45 minutes daily
C. More blood vessels in the brain and muscle	III. lead to more oxygen in the system
D. Fluid thinking is a	IV. mark of a sharp brain

Choose the correct answer from the options given below :

- A A - IV, B - I, C - II, D - III
- B A- I, B - IV, C - III, D - II
- C A - I, B - II, C - III, D - IV
- D A -III, B - II, C - IV, D - I

Answer Given By Candidate:C

Passage:

Read the given passage carefully and answer the questions that follow:

I am a king and I think, a just king. At least that is what my people say. The wise king Vikramaditya, they call me, the good King Vikramaditya. The granaries in my kingdom are bursting with grain, we are at peace with our neighbours and the sweet rain falls when it should, cooling the earth and minds of men. Then why am I, the fortunate king of such a kingdom, slashing my way through this dark and dense forest, which sees no light, either of the sun or of the fifteenth-day moon? No wind visits here and no raindrops fall. Yet the earth beneath my feet is cold and damp. It smells of dead water, of things that rot even before they grow, it stinks of never-ending decay. The darkness is an enemy, it shows me shapes that are shadows and shadows that are trees as thick as the wall of my fort. Large, hanging rings of wet, sticky, furry leaves fall across my face.

I had been brought up to be obedient and I can be obedient when I want to, though my mother would disagree. So I stayed quiet. He began. 'I call this story, "The Princess and the Three Kings," he said.

The sun, high in the blue sky, seemed to dim, as he began to tell his story. I smelt the green of dark trees, the moist earth, a dense black night. I was in a place that I didn't know and could hardly see. And yet I wasn't afraid. I had been here before.

'Once Upon a time, there was a beautiful princess. When she grew up and it was time for her to marry, her father'

Question ID:165113

Section Name:ENGLISH

Question:

The narrator was brought up to be _____.

Fill in the blank with the correct answer from options given below:

- A obedient
- B dominating and rude
- C calm and composed
- D dashing and debonair

Answer Given By Candidate:A

Question ID:165114

Section Name:ENGLISH

Question:

"Why am I, the fortunate king of such a kingdom, slashing my way through this dark and dense forest"

The quote from the passage indicates that the narrator is :

- A Angry and revengeful
- B Waiting to replenish his granaries
- C Pensive and contemplative
- D Religious and weak

Answer Given By Candidate: **D**

Question ID:165115

Section Name:ENGLISH

Question:

From the passage, the narrator appears sensitive and a concerned ruler because -

- A He ponders over what the people say.
- B He constantly thinks about himself.
- C He has no time for his people as their ruler.
- D He appears lost in his own thoughts.

Answer Given By Candidate: **A**

Question ID:165116

Section Name:ENGLISH

Question:

The narrator of the passage thinks that he is fortunate because -

- A His granaries are full and the kingdom is at peace.
- B He is fighting a war and thinks he can win it.
- C He is going to be defeated by palace intrigues
- D His name was Vikramaditya.

Answer Given By Candidate: **A**

Question ID:165117

Section Name:ENGLISH

Question:
According to the passage, it appears that despite all oddities, the emotion/quality that the narrator does not feel is :

- A Obedience
- B Happiness
- C Fear
- D Anger

Answer Given By Candidate:C

Question ID:165118
Section Name:ENGLISH
Question:
Match List I with List II

List I	List II
A. I am a	I. just king
B. Darkness is an	II. enemy
C. No wind visits here, and no	III. raindrops fall
D. They call me	IV. the good king Vikramaditya

Choose the correct answer from the options given below:

- A A - IV, B - III, C - II, D -I
- B A - I, B - II, C - III, D - IV
- C A - IV, B - I, C - III, D- II
- D A - I, B - IV, C - II, D - III

Answer Given By Candidate:B

Question ID:165119
Section Name:ENGLISH
Question:

From the given options, select the word which will correctly and adequately replace or substitute the expression.

"Someone who is physically or psychologically dependent on the habitual intake of a drug or substance."

- A Adenoidal
- B Adamant
- C Adhere
- D Addict

Answer Given By Candidate:D

Question ID:165120

Section Name:ENGLISH

Question:

From the given options, select the word which will adequately and correctly replace the expression.

"Any group or series of eight"

- A Octroi
- B Oculist
- C Ocher
- D Octave

Answer Given By Candidate:D

Question ID:165121

Section Name:ENGLISH

Question:

From the given options, select the word which can correctly and adequately replace the expression.

"Someone who takes on the responsibility of the religious education of another - especially a child"

- A Goggles
- B Godparent
- C Gobbler
- D Gobbet

Answer Given By Candidate:Not Attempted

Question ID:165122

Section Name:ENGLISH

Question:

From the given options, select the word which can correctly and adequately replace the expression.

"Related to marriage or to the relationship between husband and wife"

- A Conjugal
- B Confluence
- C Conceit

D Concern

Answer Given By Candidate:A

Question ID:165123

Section Name:ENGLISH

Question:

From the options given below, choose the word which is **opposite** in meaning to: 'conspicuous'

A oblivious

B obscure

C blatant

D definite

Answer Given By Candidate:Not Attempted

Question ID:165124

Section Name:ENGLISH

Question:

From the given options, select the word which is **opposite** in meaning to: 'accumulate'

A accelerate

B android

C ambiguous

D dwindle

Answer Given By Candidate:D

Question ID:165125

Section Name:ENGLISH

Question:

Match **Word** in List - I with its **Antonym** in List - II

List I (Word)	List II (Antonym)
A. adamant	I. quiet
B. acrimonious	II. ferocious
C. capable	III. flexible
D. docile	IV. incompetent

Choose the correct answer from the options given below:

A A - I, B- II, C- III, D - IV

- B A - III, B - IV, C - I, D - II
- C A - III, B - I, C - IV, D - II
- D A - I, B - III, C - IV, D - II

Answer Given By Candidate:C

Question ID:165126

Section Name:ENGLISH

Question:

From the given options, select the word which is **opposite** in meaning to the underlined word in the following sentence.

The new cutlery is displayed at a very prominent position on the table.

- A adjacent
- B critical
- C ordinary
- D invited

Answer Given By Candidate:C

Question ID:165127

Section Name:ENGLISH

Question:

Choose the correctly spelt word from the given options:

- A Greatful
- B Gratful
- C Greaetful
- D Grateful

Answer Given By Candidate:D

Question ID:165128

Section Name:ENGLISH

Question:

Choose the correctly spelt word from the given options:

- A Pronounciation
- B Pronunciation
- C Pronciation
- D Prononsation

Answer Given By Candidate:B

Question ID:165129

Section Name:ENGLISH

Question:

Choose the correctly spelt word from the given options:

- A Millennium
- B Millenium
- C Milennium
- D Milenium

Answer Given By Candidate:Not Attempted

Question ID:165130

Section Name:ENGLISH

Question:

Choose the correctly spelt word from the given options:

- A Thermometer
- B Tharmometer
- C Thermameter
- D Tharmameter

Answer Given By Candidate:A

Question ID:165131

Section Name:ENGLISH

Question:

Match Word in List- I with its Synonym in List II:

List I (Word)	List II (Synonym)
A. Gorgeous	I. Brave
B. Startle	II. Gigantic
C. Enormous	III. Splendid
D. Courageous	IV. Surprise

Choose the correct answer from the options given below:

- A A - I, B - II, C - III, D - IV
- B A - III, B - IV, C - II, D - I
- C A - IV, B - III, C - II, D - I
- D A - I, B - III, C - IV, D - II

Answer Given By Candidate:C

Question ID:165132

Section Name:ENGLISH

Question:

Choose the word from the given options that is **closest** in meaning to the given underlined word:

Profuse

- A Rampant
- B Impish
- C Sparse
- D Shady

Answer Given By Candidate:Not Attempted

Question ID:165133

Section Name:ENGLISH

Question:

Select the correct word from the given options which carries a **similar** meaning to the underlined word :

Architecture

- A Modernization
- B Sombre
- C Construction
- D Melancholy

Answer Given By Candidate:C

Question ID:165134

Section Name:ENGLISH

Question:

From the given options, select the word which is **closest** in meaning to the underlined word:

Syllabus

- A Curriculum
- B Management
- C Faculty
- D

Evaluation

Answer Given By Candidate:A

Question ID:165135

Section Name:ENGLISH

Question:

From the options given below, select the best explanation of the expression:

"In the long run"

- A Unannounced
- B Ruthless
- C Ultimately
- D Disregard

Answer Given By Candidate:C

Question ID:165136

Section Name:ENGLISH

Question:

From the options given below, select the one which best explains the expression:

"By fits and starts"

- A Irregular
- B Primitive
- C Autonomous
- D Harmonious

Answer Given By Candidate:Not Attempted

Question ID:165137

Section Name:ENGLISH

Question:

From the options given below, choose the correct explanation of the expression:

"Beaming with"

- A Switching on the electric bulbs
- B Being very happy and cheerful
- C Being very boastful
- D Turning out with a polished and shiny face.

Answer Given By Candidate:**Not Attempted**

Question ID:165138

Section Name:ENGLISH

Question:

From the options given below, select the correct meaning and explanation of the expression:

"At face value"

- A What one appears to be
- B The value of ornaments worn on the face
- C The additional value of the gems worn on the face
- D The value of one's smile.

Answer Given By Candidate:**A**

Question ID:165139

Section Name:ENGLISH

Question:

Rearrange the given jumbled group of words to make a meaningful sentence:

- A. enables a student to learn
- B. the method suggested in the lecture
- C. for a longer period of time
- D. more quickly and to remember

Choose the correct answer from the options given below:

- A C, B, A, D
- B B, C, D, A
- C B, A, D, C
- D D, C, A, B

Answer Given By Candidate:**C**

Question ID:165140

Section Name:ENGLISH

Question:

Rearrange the given jumbled group of words to make a meaningful sentence:

- A. he has advanced
- B. have not changed my opinion
- C. discovered and the new arguments
- D. the new facts he has

Choose the correct answer from the options given below:

- A A, B, C, D
- B D, C, A, B
- C D, C, B, A
- D A, D, C, B

Answer Given By Candidate:**B**

Question ID:165141

Section Name:ENGLISH

Question:

Rearrange the given jumbled group of words to make a meaningful sentence:

- A. the development of cinema
- B. significant phenomena
- C. of our time has been
- D. one of the most

Choose the correct answer from the options given below:

- A B, C, D, A
- B C, B, D, A
- C A, C, B, D
- D D, B, C, A

Answer Given By Candidate:**D**

Question ID:165142

Section Name:ENGLISH

Question:

Rearrange the given jumbled group of words to make a meaningful sentence

- A. he admired the speed
- B. the method adopted by him
- C. the work and appreciated
- D. with which he completed

Choose the correct answer from the options given below:

- A B, D, A, C
- B A, C, D, B
- C A, D, C, B
- D A, B, C, D

Answer Given By Candidate:C

Question ID:165143

Section Name:ENGLISH

Question:

From the given options, select the pair that carries the same relation as -

Notable: Trivial

- A Miniature: Microscopic
- B Deception: Honesty
- C Irksome: Tedious
- D Violent: Aggressive

Answer Given By Candidate:Not Attempted

Question ID:165144

Section Name:ENGLISH

Question:

From the given options, select the pair that carries the same relation as -

Cautious: Casual

- A Liberal: Kind
- B Dusky: Dismal
- C Identical: Distinct

D Beginner: Debutant

Answer Given By Candidate: **Not Attempted**

Question ID: **165145**

Section Name: ENGLISH

Question:

From the given options, select the pair that carries the same relation as -

Disgrace: Disrepute

A Indicative: Imperative

B Impudent: Impertinent

C Important: Insignificant

D Incessant: Infrequent

Answer Given By Candidate: **Not Attempted**

Question ID: **165146**

Section Name: ENGLISH

Question:

From the given options, select the pair that carries the same relation as -

Zeal: Zest

A Healthful : Harmful

B Deny : Refuse

C Reserve: Release

D Awkward: Admirable

Answer Given By Candidate: **B**

Question ID: **165147**

Section Name: ENGLISH

Question:

From the given options, select the **figure of speech** used in the expression:

"O Death in life"

A Simile

B Oxymoron

C Personification

D Alliteration

Answer Given By Candidate:C

Question ID:165148

Section Name:ENGLISH

Question:

From the given options, select the **figure of speech** used in the expression:

"The male elephant was the hero."

- A Simile
- B Metaphor
- C Personification
- D Oxymoron

Answer Given By Candidate:C

Question ID:165149

Section Name:ENGLISH

Question:

From the given options, select the **figure of speech** (poetic device) used in the expression:

"Her face ashened like that of a corpse"

- A Simile
- B Oxymoron
- C Personification
- D Alliteration

Answer Given By Candidate:A

Question ID:165150

Section Name:ENGLISH

Question:

From the given options, select the **figure of speech** (poetic device) used in the expression:

"All three stood still to smile silently".

- A Metaphor
- B Simile
- C Alliteration
- D Personification

Answer Given By Candidate:C

CUET UG - 2022
(CANDIDATE RESPONSE SHEET)
Roll No
App No
Name
Paper/Subject GENERAL TEST
Exam Date 21 Aug 2022
Exam Slot 1

Question ID:652281
Section Name:GENERAL TEST
Question:
Which state is commonly known as the “Spice Garden of India”?
A Sikkim
B Tripura
C Kerala
D Goa

Answer Given By Candidate:Not Attempted

Question ID:652282
Section Name:GENERAL TEST
Question:
The Atal Innovation Mission (AIM) of NITI Aayog has launched a Digi-book named.
A Science and Technology
B Innovations for You
C Innovations in Health Care
D Innovations in Education

Answer Given By Candidate:A

Question ID:652283
Section Name:GENERAL TEST
Question:
According to FICCI, India’s GDP is expected to grow at _____ in 2021-22:
A 8.5%
B 9.1%

C 7.9%

D 9.6%

Answer Given By Candidate:B

Question ID:652284

Section Name:GENERAL TEST

Question:

Arrange the following days in the order of the date of their observance in India?

- A. National Sports Day
- B. Children's Day
- C. National Education Day
- D. National Voter's Day
- E. International Yoga Day

Choose the correct answer from the options given below:

- A A, C, E, B, D
- B C, E, B, D, A
- C D, E, A, C, B
- D B, D, E, C, A

Answer Given By Candidate:C

Question ID:652285

Section Name:GENERAL TEST

Question:

Arrange the following Noble prize winner Indians in the Chronological order of the year of getting Noble:

- A. CV Raman
- B. Kailash Satyarthi
- C. Rabindranath Tagor
- D. Amartya Sen
- E. Har Govind Khorana

Choose the correct answer from the options given below:

- A A, C, E, B, D
- B D, A, B, C, E
- C E, D, A, B, C
- D C, A, E, D, B

Answer Given By Candidate:D

Question ID:652286**Section Name:**GENERAL TEST**Question:**

At high altitudes, more time is required to cook a food because the boiling point of water is:

- A Less than 100°C
- B More than 100°C
- C Less than 98°F
- D More than 200°C

Answer Given By Candidate: **Not Attempted**

Question ID:652287**Section Name:**GENERAL TEST**Question:**

_____ play important role in hypersensitivity?

- A Basophils
- B Eosinophils
- C Neutrophils
- D Monocytes

Answer Given By Candidate: **Not Attempted**

Question ID:652288**Section Name:**GENERAL TEST**Question:**

Which one of the following is the largest island in the world?

- A Sumatra
- B Maldives
- C Madagascar
- D Greenland

Answer Given By Candidate: **D**

Question ID:652289**Section Name:**GENERAL TEST

Question:

Which among the following countries have Euro as their currency?

- A. Belgium
- B. Chile
- C. Ireland
- D. Italy
- E. UK

Choose the correct answer from the options given below:

- A A ,C and D only
- B B , C and E only
- C A ,B and D only
- D C , D and E only

Answer Given By Candidate:C

Question ID:6522810

Section Name:GENERAL TEST

Question:

Who was the first Indian to get Bharat Ratna?

- A Dr. Rajendra Prasad
- B Maharshi Karve
- C Dr. S. Radhakrishnan
- D Jawaharlal Nehru

Answer Given By Candidate:C

Question ID:6522811

Section Name:GENERAL TEST

Question:

Who among the following was appointed as the first Chief of the Defence staff of India?

- A General KM Kariappa
- B General SHFJ Manekshaw
- C General V P Malik
- D General Bipin Rawat

Answer Given By Candidate:D

Question ID:6522812

Section Name:GENERAL TEST

Question:
Match the List I with List II

List I	List II
A. Karnam Malleshwari	I. Wrestling
B. Sakshi Malik	II. Weight lifting
C. Leander Paes	III. Shooting
D. Rajyawardhan Singh Rathor	IV. Tennis

Choose the correct answer from the options given below:

- A A-II , B-I , C-IV , D-III
- B A-III , B-IV , C-I , D-II
- C A-IV , B-II , C-III , D-I
- D A-I , B-III , C-II , D-IV

Answer Given By Candidate:**Not Attempted**

Question ID:6522813
Section Name:GENERAL TEST

Question:
Which among the following nations is not among the five permanent members of the UN Security council?

- A France
- B Russia
- C Germany
- D United Kingdom

Answer Given By Candidate:**C**

Question ID:6522814
Section Name:GENERAL TEST

Question:
Which among the following is not an operating system?

- A MS Office
- B Window
- C Linux
- D Android

Answer Given By Candidate:**C**

Question ID:**6522815**
Section Name:GENERAL TEST
Question:
Match the List I with List II

List I	List II
A. Jai Shankar Prasad	I. Untouchable
B. Khushwant Singh	II. Ajatshatru
C. Mulk Raj Anand	III. Train to Pakistan
D. Mark Tully	IV. The Heart of India

Choose the correct answer from the options given below:

- A A-IV , B-III , C-II , D-I
B A-III , B-IV , C-I , D-II
C A-II , B-III , C-I , D-IV
D A-I , B-II , C-IV , D-III

Answer Given By Candidate:C

Question ID:**6522816**
Section Name:GENERAL TEST
Question:

A and B can together complete a piece of work in 6 days. If A alone can complete the same work in 12 days, in how many days can B alone complete that work?

- A 10 days
B 12 days
C 6 days
D 18 days

Answer Given By Candidate:B

Question ID:**6522817**
Section Name:GENERAL TEST
Question:

Find the ratio of swimming speed of Vikash in still water to speed of river, if ratio of time taken to go 5 km upstream to time taken to go 5km downstream is 10:5?

- A 5:10
B 5:1
C 3:1

D 4:1

Answer Given By Candidate: **Not Attempted**

Question ID: **6522818**

Section Name: GENERAL TEST

Question:

What is the value of 1800km/hr in m/sec?

A 600

B 500

C 400

D 300

Answer Given By Candidate: **B**

Question ID: **6522819**

Section Name: GENERAL TEST

Question:

A gold bracelet is sold for ₹16500 at a loss of 25%. What is the price cost of it?

A ₹21000

B ₹22000

C ₹23000

D ₹20000

Answer Given By Candidate: **Not Attempted**

Question ID: **6522820**

Section Name: GENERAL TEST

Question:

If 25% of an electricity bill is deducted, then ₹ 375 is still to be paid. How much was the original bill?

A ₹400

B ₹500

C ₹600

D ₹700

Answer Given By Candidate: **B**

Question ID: **6522821**

Section Name: GENERAL TEST

Question:

Radha and Mohan's average age is 75 years. The average age of Radha, Mohan and Jay is 55 years. What is the age of Jay?

- A 14 years
- B 15 years
- C 16 years
- D 18 years

Answer Given By Candidate:B

Question ID:6522822
Section Name:GENERAL TEST
Question:

If $X : Y = 7 : 3$ then the value of $\frac{X^2 + Y^2}{X^2 - Y^2}$

- A 1140
- B 1930
- C 3940
- D 2920

Answer Given By Candidate:Not Attempted

Question ID:6522823
Section Name:GENERAL TEST
Question:

If x, y, z are three sums of money such that y is the simple interest on x , z the simple interest on y for the same time and at the same rate of interest, then which of the following holds true?

- A $y^2 = zx$
- B $z^2 = xy$
- C $x^2 = zy$
- D $x = yz$

Answer Given By Candidate:Not Attempted

Question ID:6522824
Section Name:GENERAL TEST
Question:

If the sum of two numbers is 60 and the HCF and LCM of these numbers are 6 and 150, then the sum of their reciprocals is-

- A 1/15
- B 1/12
- C 1/18

D 1/16

Answer Given By Candidate:Not Attempted

Question ID:6522825

Section Name:GENERAL TEST

Question:

A cube whose edge is 10 cm long, has circles on each of its faces painted red. What is the total area of the unpainted surface of the cube if the circles are of the largest possible areas? (Take $\pi=3.14$)

- A 109 cm²
- B 119 cm²
- C 129 cm²
- D 99 cm²

Answer Given By Candidate:Not Attempted

Question ID:6522826

Section Name:GENERAL TEST

Question:

Present ages of Sam and Amar are the ratio of 5:4 respectively. Three years later, the ratio of their ages will become 8:7 respectively. What is Amar's present age in years?

- A 5 years
- B 4 years
- C 6 years
- D 7 years

Answer Given By Candidate:Not Attempted

Question ID:6522827

Section Name:GENERAL TEST

Question:
Match List with List II

List I	List II
A. $\frac{1}{20}$	I. 2%
B. $\frac{1}{15}$	II. 10%
C. $\frac{1}{10}$	III. 5%
D. $\frac{1}{50}$	IV. 20%

Choose the correct answer from the options given below:

- A A-I, B-II, C-III, D-IV
- B A-III, B-IV, C-II, D-I
- C A-II, B-III, C-IV, D-I
- D A-IV, B-I, C-II, D-III

Answer Given By Candidate:Not Attempted

Question ID:6522828
Section Name:GENERAL TEST
Question:

A man buys an article for ₹25.50 and sells it for ₹28.60. Find his gain in percent.

- A 12.15%
- B 15.15%
- C 12.65%
- D 15.65%

Answer Given By Candidate:Not Attempted

Question ID:6522829
Section Name:GENERAL TEST
Question:

Ramesh covers one-fourth of the total distance at 30 km/hr, one-fourth at 20 km/hr and rest of his journey at 60 km/hr. Find Ramesh's average speed for the whole distance?

- A 37.84 km/hr

- B 45.84 km/hr
- C 34.28 km/hr
- D 67.28 km/hr

Answer Given By Candidate:Not Attempted

Question ID:6522830
Section Name:GENERAL TEST

Question:
A boat can go 360 m still water in 2 min. if the speed of the stream is 2 m/sec. How much time it shall take to cover the same distance in downstream?

- A 60 sec
- B 48 sec
- C 56 sec
- D 72 sec

Answer Given By Candidate:Not Attempted

Question ID:6522831
Section Name:GENERAL TEST

Question:
What will come in the place of question mark?

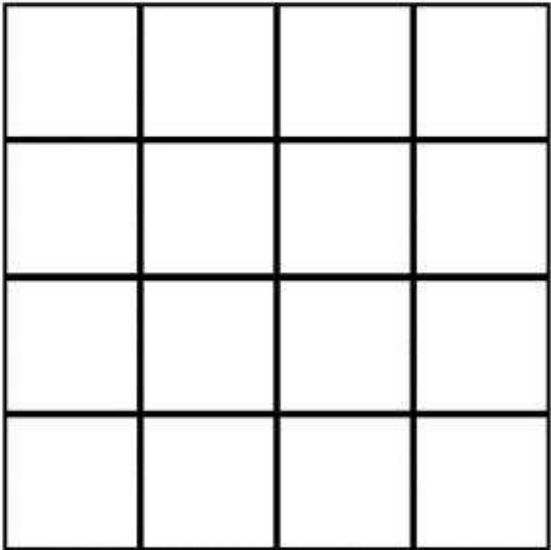
DE: 10 :: HI :?

- A 18
- B 30
- C 36
- D 72

Answer Given By Candidate:A

Question ID:6522832
Section Name:GENERAL TEST

Question:
How many rectangle are there in the figure?



- A 16
- B 30
- C 72
- D 100

Answer Given By Candidate:**B**

Question ID:6522833
Section Name:GENERAL TEST

Question:
If reflected time in a mirror is 3:43, then the real time of clock is?

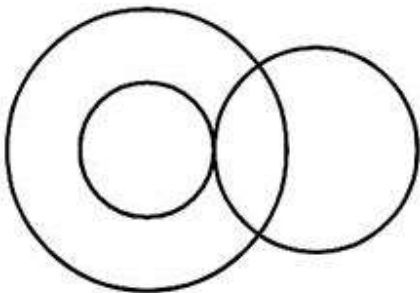
- A 3:17
- B 7:17
- C 8:17
- D 8:43

Answer Given By Candidate:**C**


Question ID:6522834
Section Name:GENERAL TEST

Question:
Which figure represents Cell, Tissues and Organs?

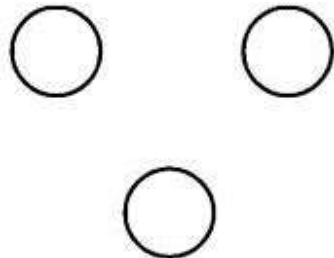
- A



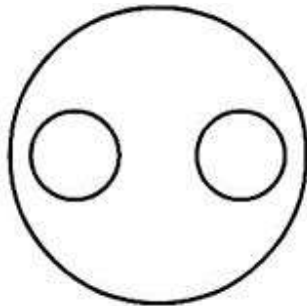
B



C



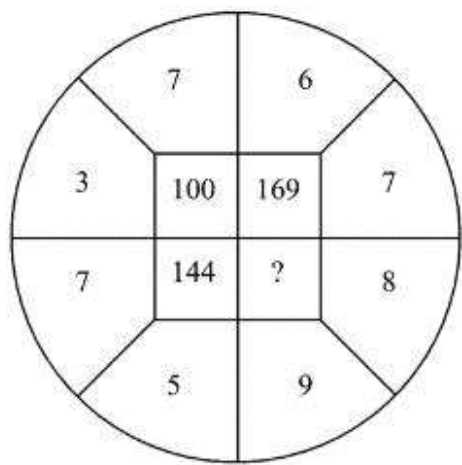
D



Answer Given By Candidate: **Not Attempted**

Question ID: **6522835**
Section Name: GENERAL TEST

Question:
Find out missing number from the following question.



- A 72
- B 289
- C 81
- D 34

Answer Given By Candidate:**B**

Question ID:6522836
Section Name:GENERAL TEST
Question:
In BODMAS law, the sequence is

- A. Brackets, Orders
- B. Addition
- C. Multiplication
- D. Divide
- E. Subtraction

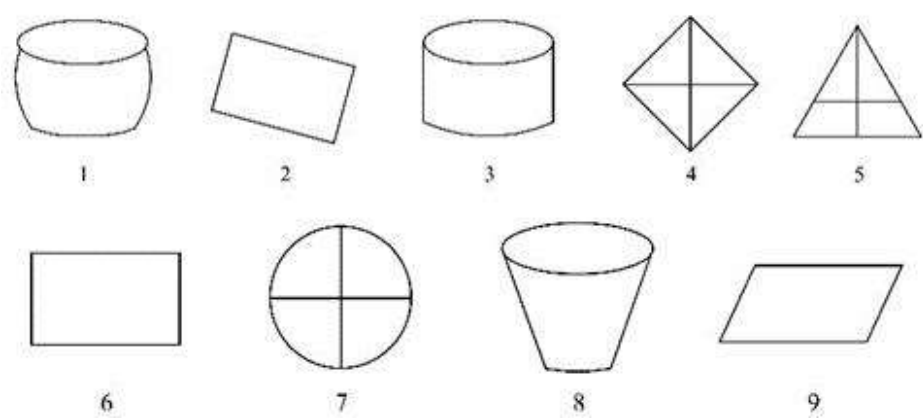
Choose the correct answer from the options given below:

- A A , D , C , B , E
- B A , B , C , D , E
- C B , D , A , E , C
- D B , A , C , E , D

Answer Given By Candidate:**A**

Question ID:6522837
Section Name:GENERAL TEST

Question:
Group the following figures into three classes on the basis of identical properties.

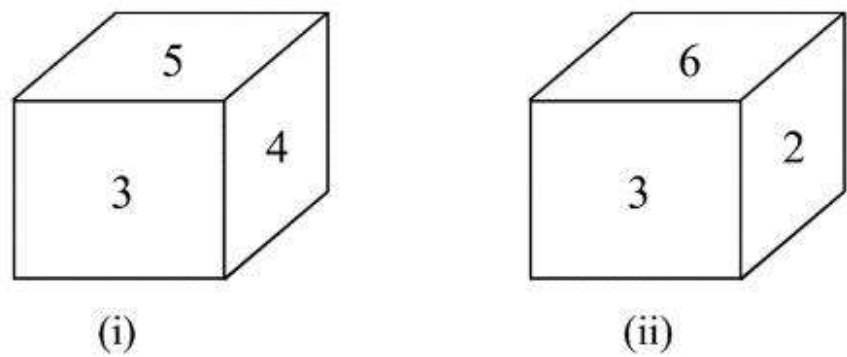


- A 1, 3, 8; 2, 6, 9; 4, 5, 7
- B 2, 3, 4; 1, 5, 6; 7, 8, 9
- C 1, 4, 8; 2, 6, 7; 3, 5, 9
- D 1, 3, 9; 2, 4, 5; 6, 7, 8

Answer Given By Candidate:A

Question ID:6522838
Section Name:GENERAL TEST

Question:
Two positions of a dice are shown below. If the face with 1 at the bottom, then which number is on the top?



- A 2
- B 3
- C 4
- D 5

Answer Given By Candidate:B

Question ID:6522839

Section Name:GENERAL TEST

Question:

What is the mirror-image of the term TRAIN6871?

- A TЯAИ68ГI
- B TЯAИ᠐8ГI
- C TЯAИ᠐8ГI
- D TRAIN᠐8ГI

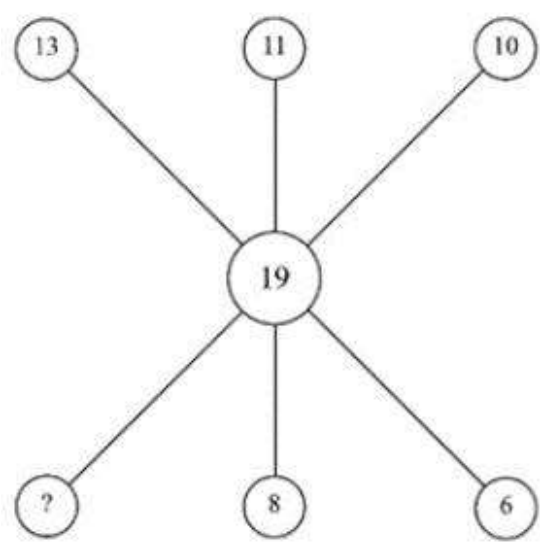
Answer Given By Candidate:Not Attempted

Question ID:6522840

Section Name:GENERAL TEST

Question:

Find the missing number.



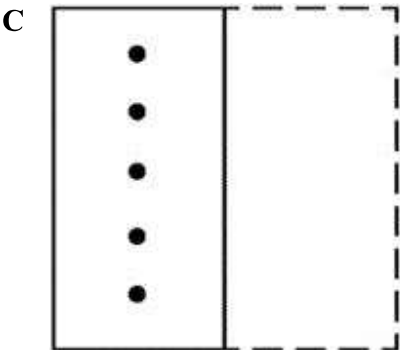
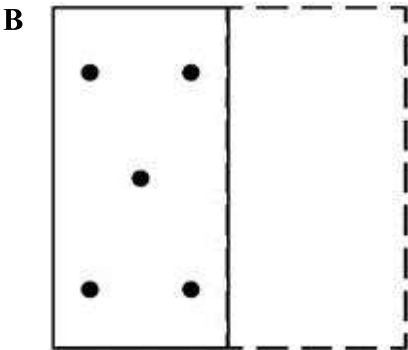
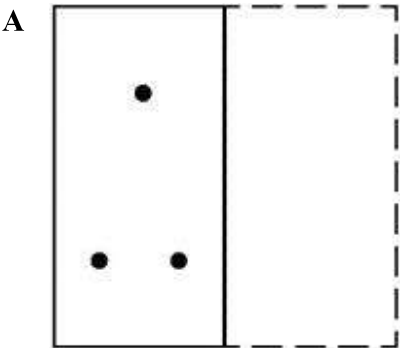
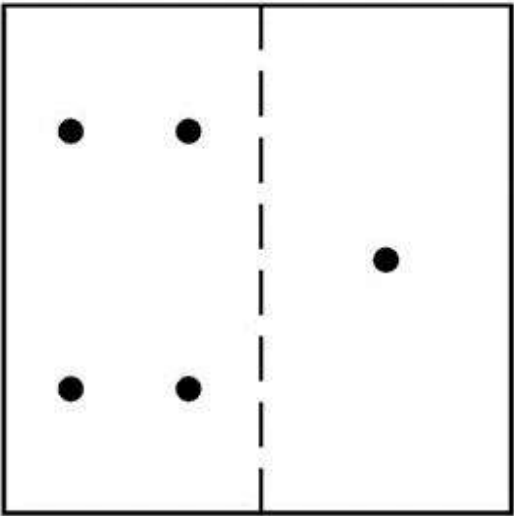
- A 10
- B 11
- C 9
- D 8

Answer Given By Candidate:C

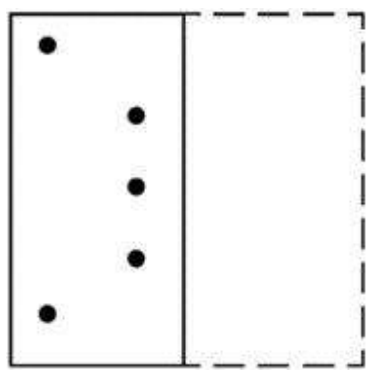
Question ID:6522841

Section Name:GENERAL TEST

Question:
Choose the correct image after the folding of transparent sheet.



D



Answer Given By Candidate:**B**

Passage:
Read the following information carefully and answer the questions that follows:-

- 1. A, B , C, D, E and F are six students procuring their Master’s degree in six different subjects- Economics, Accountancy, Philosophy, Psychology, Zoology and Botany.
- 2. Two of them stay in hostels, two stay as paying guest (PG) and the remaining two stay at their home.
- 3. C does not stay as PG and studies Philosophy.
- 4. The students studying Zoology and Botany, do not stay in PG.
- 5. E studies Botany and D studies, Psychology. F and D stay in Hostel. E stays in PG and B stays at home.

Question ID:6522842
Section Name:GENERAL TEST
Question:
Who studies Economics?

- A C
- B D
- C E
- D A

Answer Given By Candidate:**D**

Question ID:6522843
Section Name:GENERAL TEST
Question:
Which of the following combination of subjects and place of study is not correct?

- A Economics-Hostel
- B Botany-PG

C Philosophy-Home

D Psychology-Hostel

Answer Given By Candidate:Not Attempted

Question ID:6522844

Section Name:GENERAL TEST

Question:

Which of the following pairs of students have accommodation at hostel and another one at home?

A BC

B DC

C FD

D AE

Answer Given By Candidate:Not Attempted

Question ID:6522845

Section Name:GENERAL TEST

Question:

Which subject does B Study?

A Accountancy

B Zoology

C Accountancy and Zoology

D Botany

Answer Given By Candidate:Not Attempted

Question ID:6522846

Section Name:GENERAL TEST

Question:

4 : 256 :: 9 : ?

A 729

B 6561

C 1296

D 2916

Answer Given By Candidate:Not Attempted

Question ID:6522847

Section Name:GENERAL TEST

Question:

UY:PT::KO:?

- A PN
- B CD
- C FJ
- D LK

Answer Given By Candidate:C

Question ID:6522848

Section Name:GENERAL TEST

Question:

Destitute : Poor :: ? : Excitable

- A Gigantic
- B Devoted
- C Lively
- D Credible

Answer Given By Candidate:D

Question ID:6522849

Section Name:GENERAL TEST

Question:

Physician : Stethoscope :: Radiologist :?

- A Surgical Gloves
- B X-ray
- C Spatula
- D Scissor

Answer Given By Candidate:Not Attempted

Question ID:6522850

Section Name:GENERAL TEST

Question:

Arrange the following words in the sequence they will appear in a dictionary:

- A. Understood
- B. Understanding
- C. Undertrial
- D. Undisputed
- E. Unpleasant

Choose the correct answer from the options given below:

- A B, A, C, D, E
- B B, A, D, E, C
- C A, C, D, E, B
- D A, D, C, E, B

Answer Given By Candidate:A

Question ID:6522851

Section Name:GENERAL TEST

Question:

If in a certain language, G is coded as 4, M is coded as 5, S is coded as 2, D is coded as 3, A is coded as 8, C is coded as 9 and R is coded as 0, how is MADAGASCAR coded in that language?

- A 5838482980
- B 5838824980
- C 5883849280
- D 5892488380

Answer Given By Candidate:A

Question ID:6522852

Section Name:GENERAL TEST

Question:

A dog is facing north. Dog turns 90° in the clockwise direction and then turns 60° in anti-clockwise direction. Which direction, the dog is facing now?

- A South-east
- B South-west
- C North-east
- D North-west

Answer Given By Candidate:A

Question ID:6522853

Section Name:GENERAL TEST

Question:

Complete the series: 69, 73, 75, 81, 85

- A 87
- B 89
- C 91
- D 93

Answer Given By Candidate:A

Question ID:6522854

Section Name:GENERAL TEST

Question:

If 31st day of a month is Friday, what was the day on 3rd day of that month?

- A Thursday
- B Friday
- C Saturday
- D Sunday

Answer Given By Candidate:Not Attempted

Question ID:6522855

Section Name:GENERAL TEST

Question:

Complete the series: 12, 20, 30, 42, 56

- A 72
- B 70
- C 80
- D 96

Answer Given By Candidate:A

Question ID:6522856

Section Name:GENERAL TEST

Question:

Complete the series: 59049, 6561, ..?.., 81, 9, 1

- A 729
- B 324
- C 243
- D 162

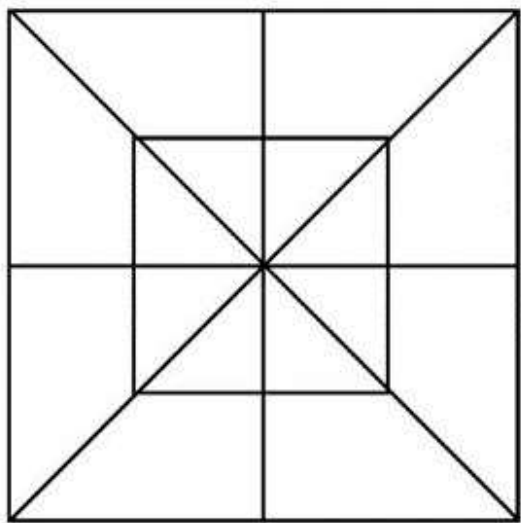
Answer Given By Candidate:A

Question ID:6522857

Section Name:GENERAL TEST

Question:

How many squares are there in the given shape?



- A 08
- B 10
- C 12
- D 16

Answer Given By Candidate:B

Question ID:6522858

Section Name:GENERAL TEST

Question:

In this question, four words have been given of which three are alike in some way and one is different. Find the odd one out.

- A Brahmaputra
- B Kaveri
- C Narmada
- D Ganga

Answer Given By Candidate:Not Attempted

Question ID:6522859

Section Name:GENERAL TEST

Question:

A man introduces a women as the daughter of the brother of his mother. How is the woman, related to the man?

- A Sister
- B Mother
- C Grandmother
- D Sister-in-law

Answer Given By Candidate:A

Question ID:6522860
Section Name:GENERAL TEST
Question:
Interesting : Repulsive :: Intricate :

- A Proud
- B Brave
- C Humble
- D Unrefined

Answer Given By Candidate:Not Attempted

Question ID:6522861
Section Name:GENERAL TEST
Question:
Match the List I with List II

List I	List II
A. $5x+2=0$	I. $5/4$
B. $-2x+\frac{5}{2}=0$	II. $1/4$
C. $x+7=6$	III. $-2/5$
D. $-2x+\frac{3}{2}=1$	IV. -1

Choose the correct answer from the options given below:

- A A-III , B-I , C-IV , D-II
- B A-III , B-IV , C-II , D-I
- C A-II , B-III , C-I , D-IV
- D A-II , B-IV , C-III , D-I

Answer Given By Candidate:Not Attempted

Question ID:6522862

Section Name:GENERAL TEST

Question:

Find the median of 18, 3 , 13 , 8 , 9 , 11 , 14 and 9.

- A 8.5
- B 10
- C 12.5
- D 13

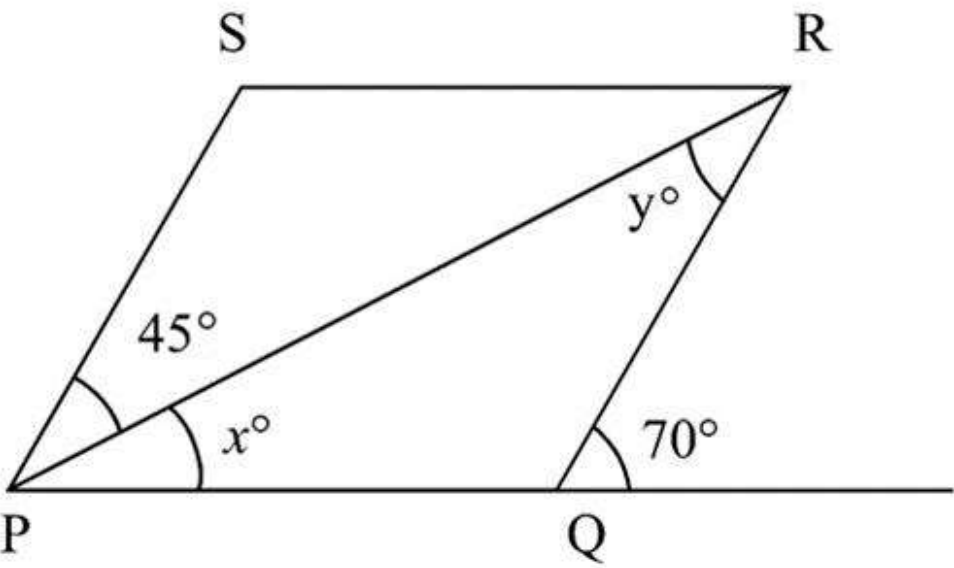
Answer Given By Candidate:C

Question ID:6522863

Section Name:GENERAL TEST

Question:

If PQRS is a parallelogram, the value of 'x' is



- A 70
- B 35
- C 55
- D 25

Answer Given By Candidate:D

Question ID:6522864

Section Name:GENERAL TEST

Question:

The value of 'x' in $8x + \frac{5}{7} = 12x - \frac{3}{5}$

- A $-\frac{23}{70}$
- B

$\frac{23}{35}$

C $-\frac{23}{35}$

D $\frac{23}{70}$

Answer Given By Candidate: **Not Attempted**

Question ID:6522865
Section Name:GENERAL TEST
Question:

Factorised form of $2x^2 + 3x + 1$ is.

- A $(2x-1)(x-1)$
- B $(x+1)(2x+1)$
- C $(x+1)(2x-1)$
- D $(2x+1)(x-1)$

Answer Given By Candidate: **Not Attempted**

Question ID:6522866
Section Name:GENERAL TEST
Question:

Area of rectangle whose sides are $(2x-7)$ and $(2x+7)$ is.

- A $2x^2-49$ square unit
- B $2x^2-7$ square unit
- C $4x^2+49$ square unit
- D $4x^2-49$ square unit

Answer Given By Candidate: **Not Attempted**

Question ID:6522867
Section Name:GENERAL TEST
Question:

150 m long train crossed a person standing on platform in 9 seconds. The speed of train in km/hr is.

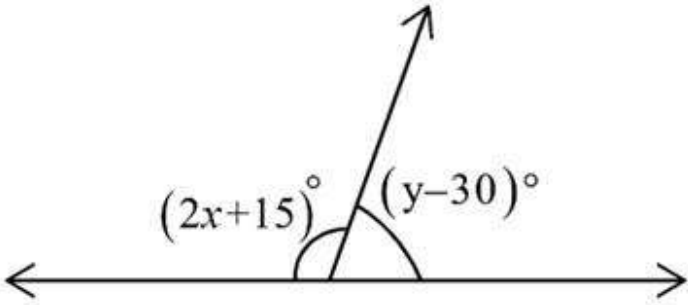
- A $\frac{50}{3}$
- B 60
- C

$\frac{50}{9}$

D $\frac{250}{54}$

Answer Given By Candidate:D

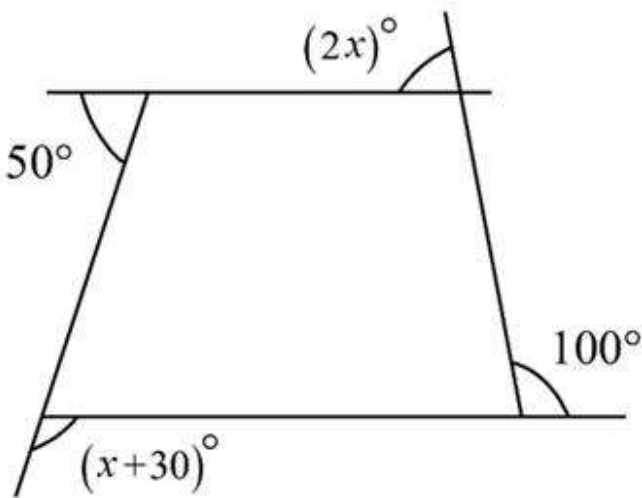
Question ID:6522868
Section Name:GENERAL TEST
Question:
The value of $(2x+y)$ is



- A 180
- B 165
- C 210
- D 195

Answer Given By Candidate:D

Question ID:6522869
Section Name:GENERAL TEST
Question:
The value of ' x ' is.

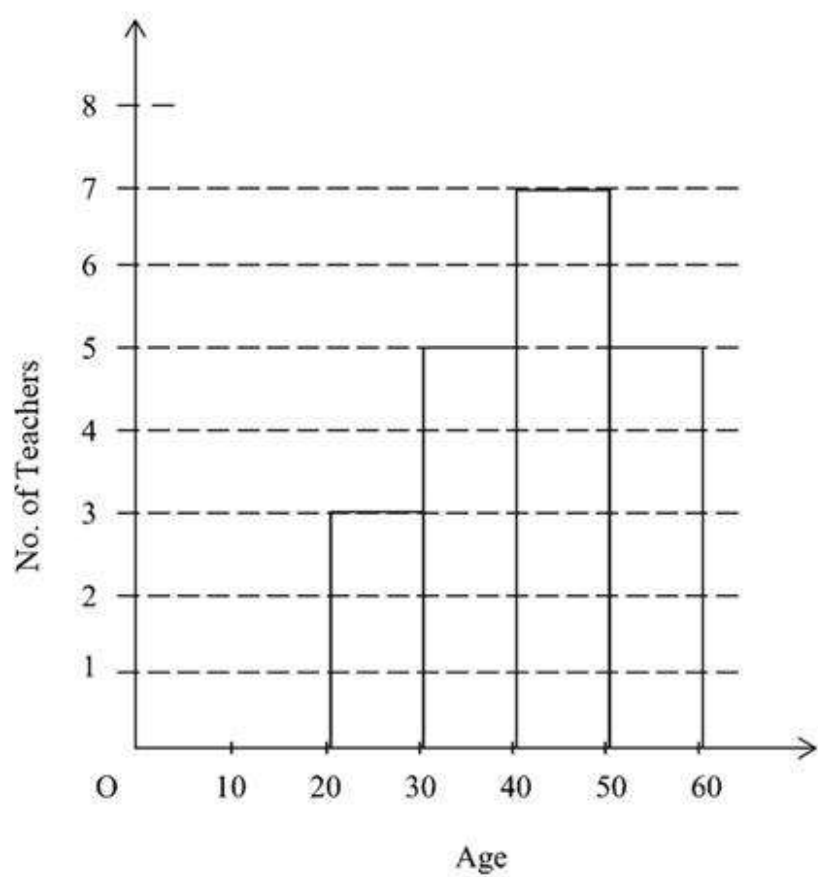


- A 50

- B 60
- C 30
- D 40

Answer Given By Candidate:Not Attempted

Passage:
The adjoining Histogram shows frequency distribution of ages of 20 teachers in a school. Based on Histogram choose correct option for question no 70-72.



Question ID:6522870
Section Name:GENERAL TEST
Question:
No. of teachers in age group 20 to 40 is:

- A 20
- B 5
- C 8
- D 15

Answer Given By Candidate:D

Question ID:6522871
Section Name:GENERAL TEST
Question:
The size of class is.

- A 10-20
- B 10
- C 7
- D 20-60

Answer Given By Candidate:B

Question ID:6522872
Section Name:GENERAL TEST
Question:
How many the numbers of teachers of age group 40-50 is more than the number of teachers of age group '20-30' is:

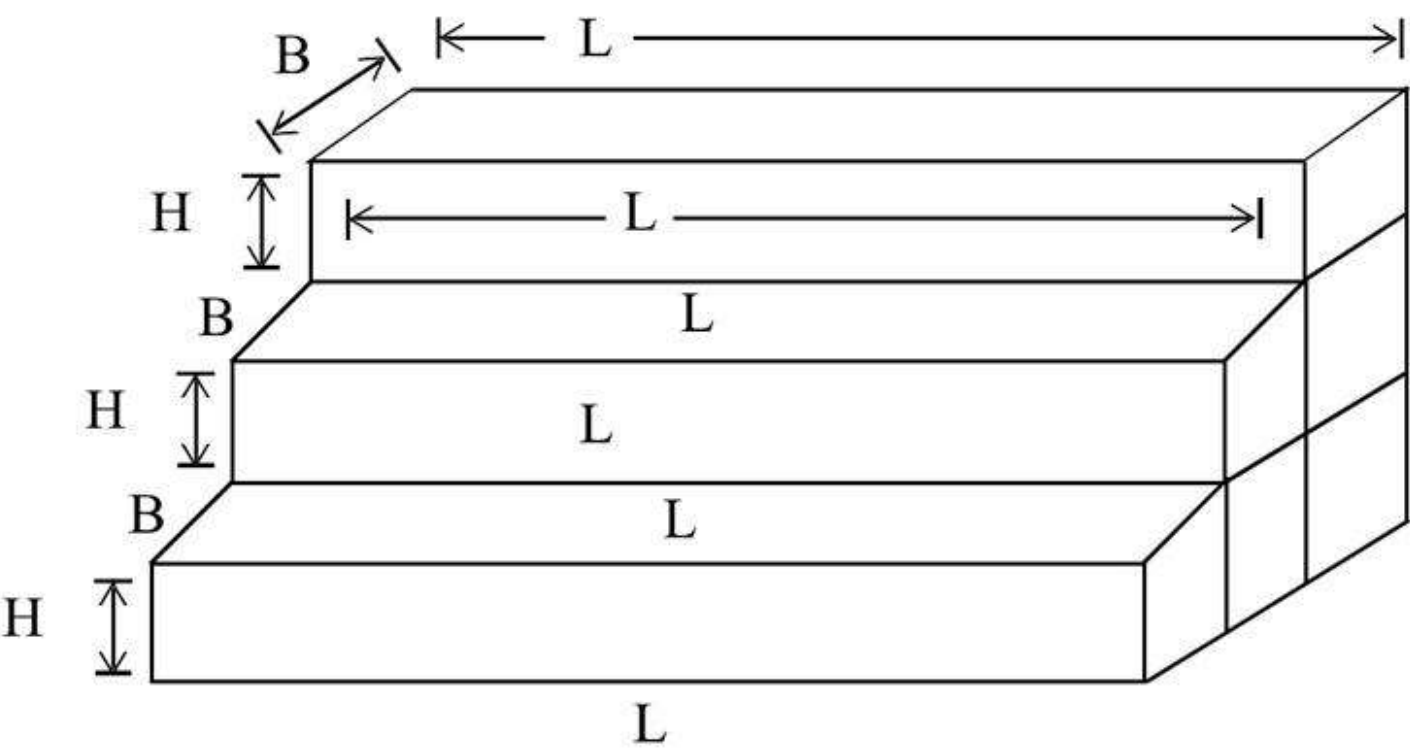
- A 10
- B 3
- C 4
- D 7

Answer Given By Candidate:C

Passage:

The adjoining figure is showing '3' stairs if $L=85\text{cm}$, $B=45\text{ cm}$ and $H=30\text{ cm}$.

Based on this information choose correct option for question 73 to 75.



Question ID:6522873
Section Name:GENERAL TEST
Question:
Perimeter of side view is

- A 450 cm
- B 750 cm
- C 675 cm
- D 300 cm

Answer Given By Candidate:Not Attempted

Question ID:6522874
Section Name:GENERAL TEST
Question:
Which of the following shows the area of side view.

- A 15450 cm^2
- B 4050 cm^2
- C 8100 cm^2

D 8500 cm²

Answer Given By Candidate: **Not Attempted**

Question ID: **6522875**

Section Name: GENERAL TEST

Question:

The perimeter of bottom is.

A 340 cm

B 330 cm

C 320 cm

D 440 cm

Answer Given By Candidate: **Not Attempted**