

MAP WORK

Identification only : Major Soil Types

1. Identify Major Soil Types :

(a) Forest and Mountainous Soil

[Board Term-I, 2016 (OEQL2HT, 6HTQGTF, NLTM8TU)

2014 (X30T4XE), (WQ7FXWC)] [DDE-2015, Set-M]

[Board Term-I, 2016 (CB4QHT1), 2013, (3K)]

[Board Term-I, 2015, Set-C5]WEVD][Board Term-I, KVS-2014]

(b) Alluvial

(c) Red and Yellow

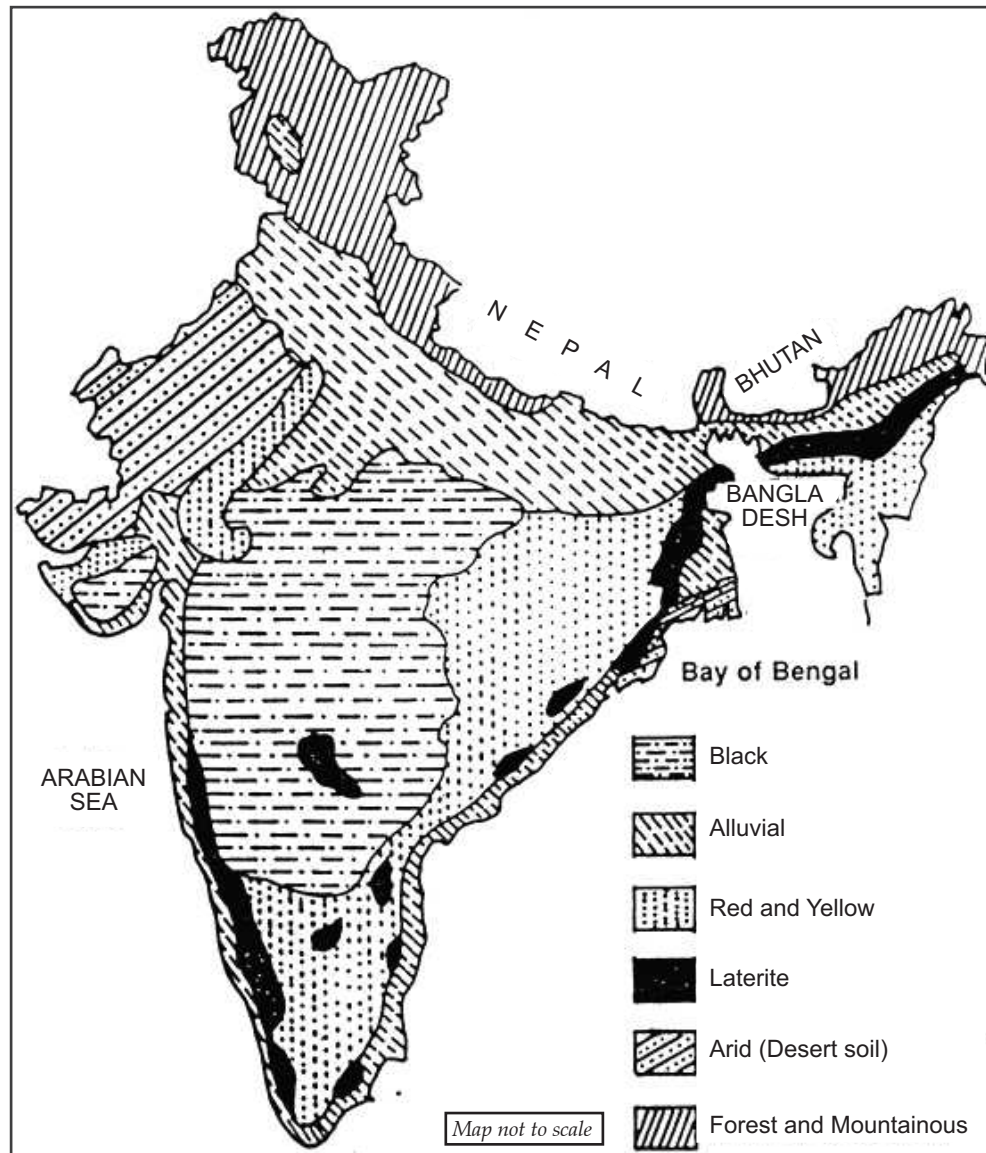
(d) Black

(e) Laterite

(f) Arid

[Board Term-I, DDE-2014]

[Board Term-I, NCT-2014, 2013 (H3)]



A 2. Locate and Label : Dams

(a) Salal Project

[Board Term-I, DDE-2014, (X30T4XE)]

(b) Bhakra Nangal Project

[Board Term-I, 2013 (H3)]

(c) Tehri

(d) Rana Pratap Sagar

[DDE-2015, Set-M], [Board Term-I, 2014 (WQ7FXWC)]

(e) Gandhi Sagar

(f) Sardar Sarovar Dam

[Board Term-I, (6HTQ4TF)]

[Board Term-I, 2014 (R9UJGYG)]

(g) Hirakud

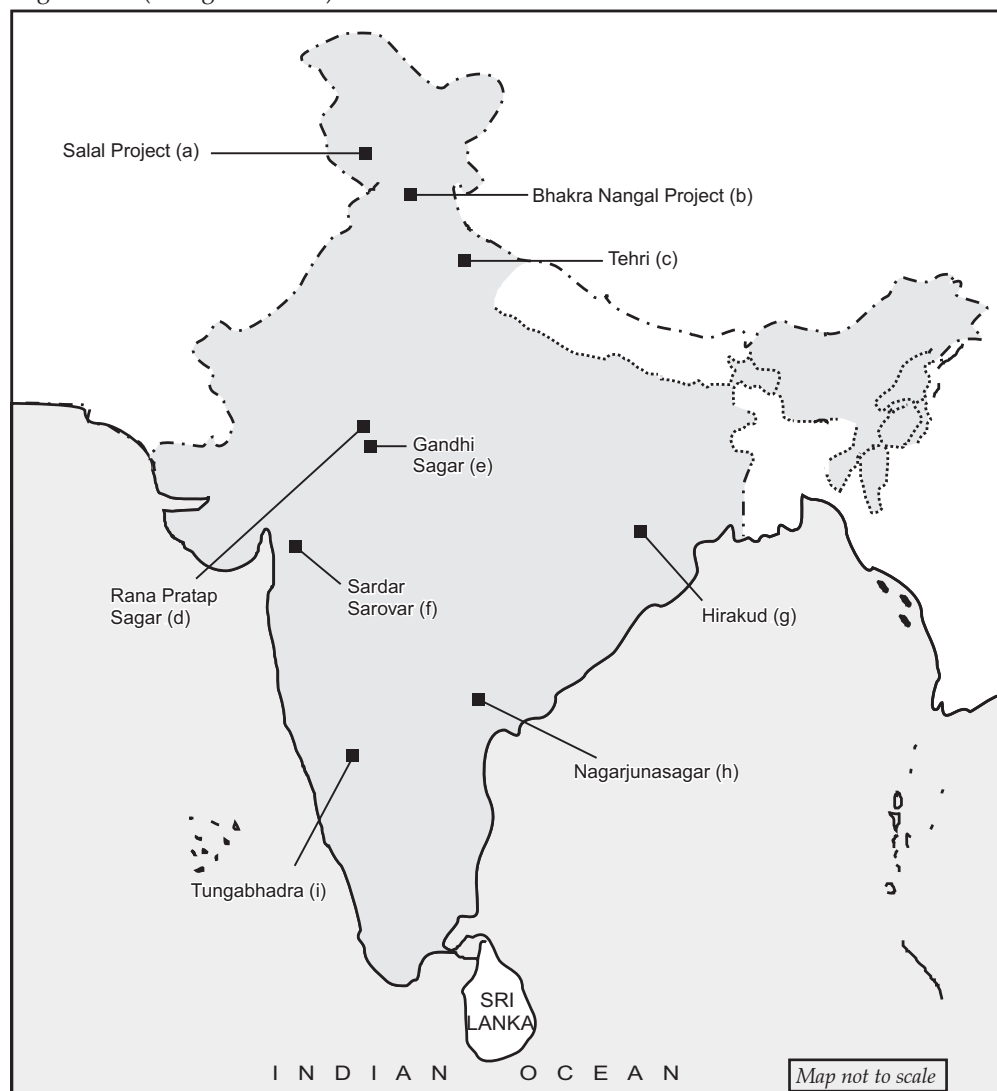
[Board Term-I, 2016 (CB4QHT1 & NLTM874), KVS-2014, 2013 (3K)]

[Board Term-I, 2015, 6AP67LB, C5JWEVD, DDE-2015, Set-M]

(h) Nagarjunasagar

[Board Term-I, 2016 (OEQL2HT)]

(i) Tungabhadra (Alongwith livers)

**U+A 3. Identification only****Major producer states of :**

(i) Jute

[Board Term-I, NCT-2014]

(ii) Cotton

(iii) Rubber

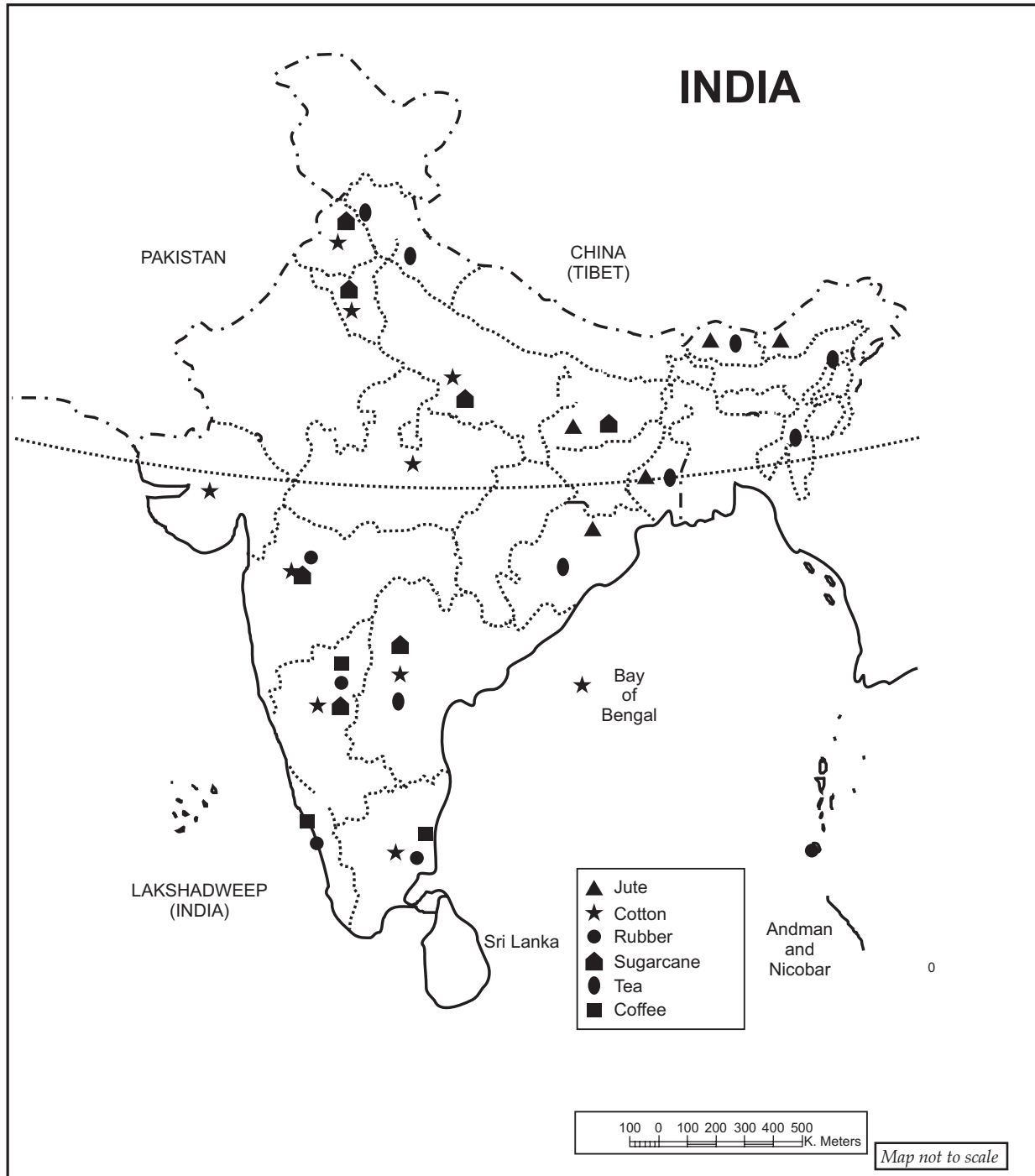
[Board Term-I, 2016 (CB4QHT1, 6HT8GTF)]

(iv) Sugarcane

(v) Tea

(vi) Coffee

[Board Term-I, 2016 (NLTm8TU)]

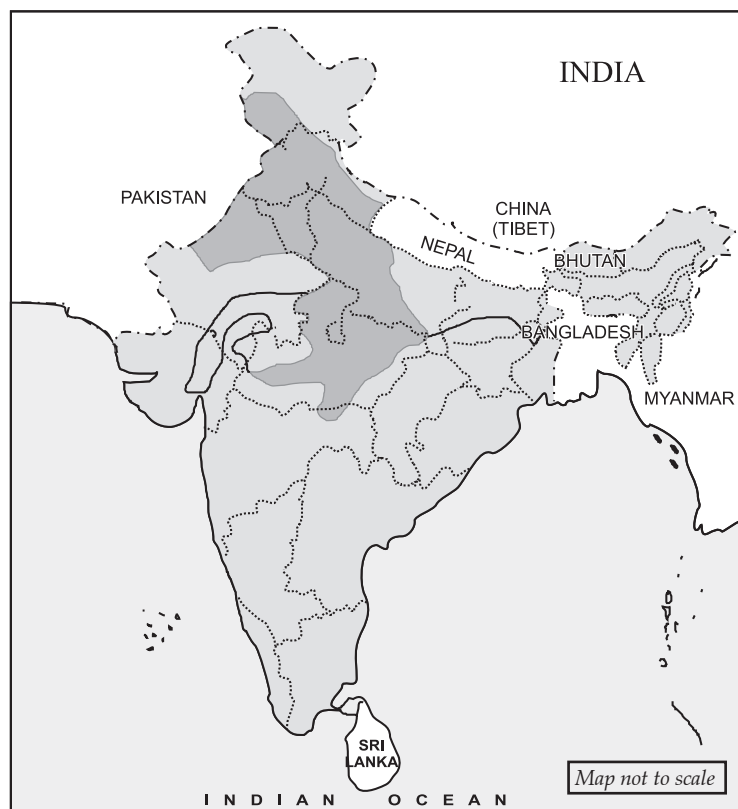


U+A 4. Identification only

(i) Major rice growing areas :



(ii) Major wheat growing areas :



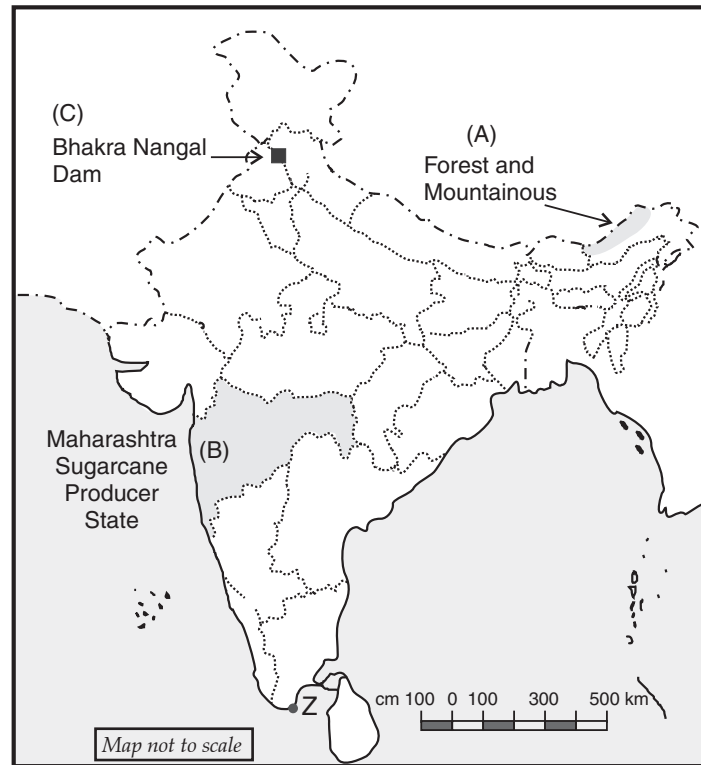
U+A 5. (a) One feature A is shown in the given political outline map of India. Identify this feature with the help of following information and write its correct name on the line marked on the map :

(A) A soil type

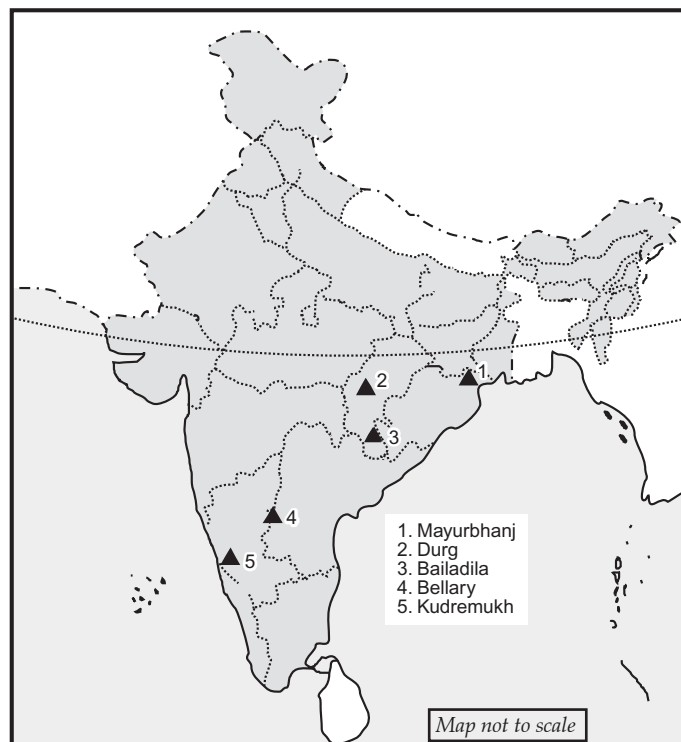
(b) On the same political outline map of India, locate and label the following features with appropriate symbols :

(B) A State which is the major producer of sugarcane

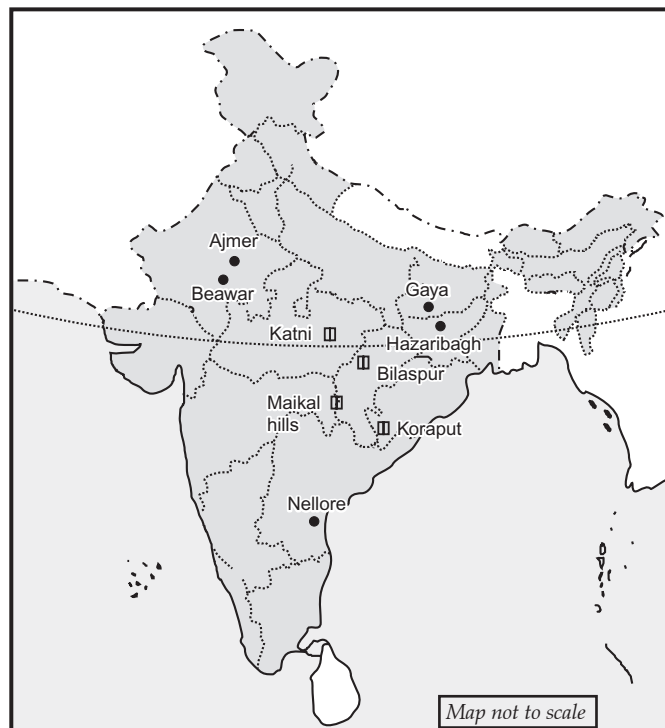
(C) Bhakra Nangal Dam



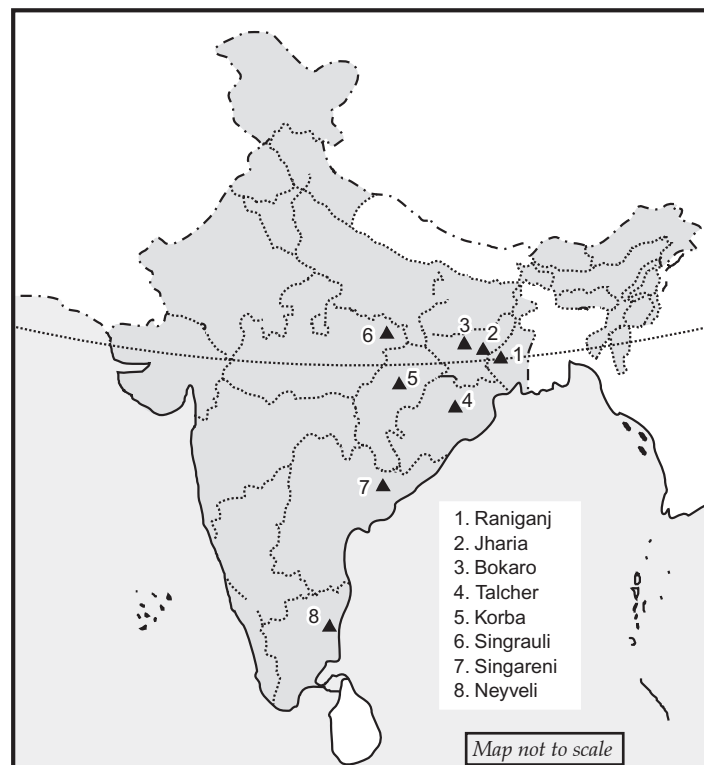
Q. 6. Identify major iron ore mines.



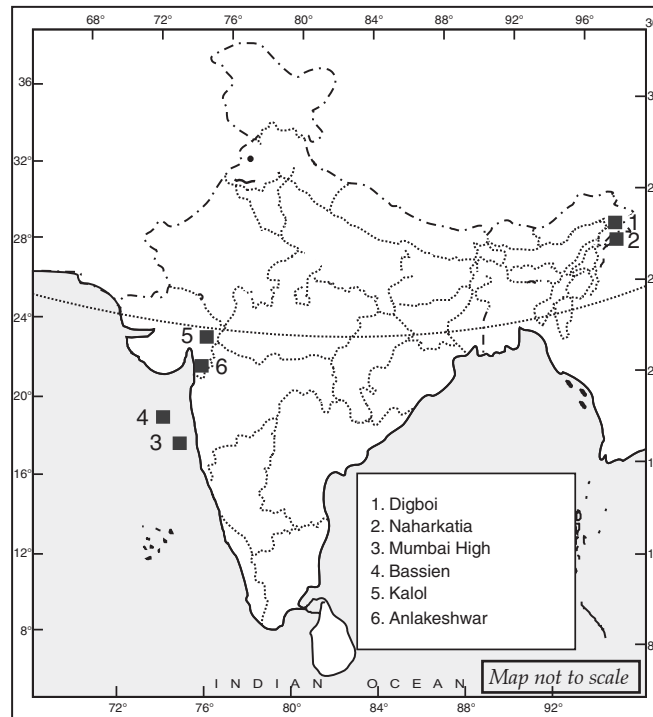
Q. 7. Identify major mica mines and bauxite deposits.



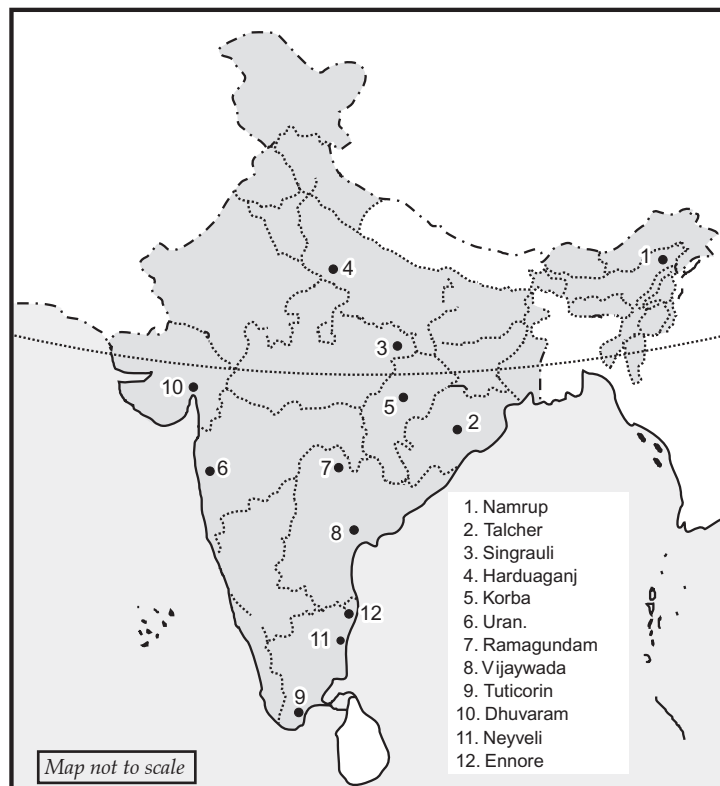
Q. 8. Identify major Coalfields or mines.



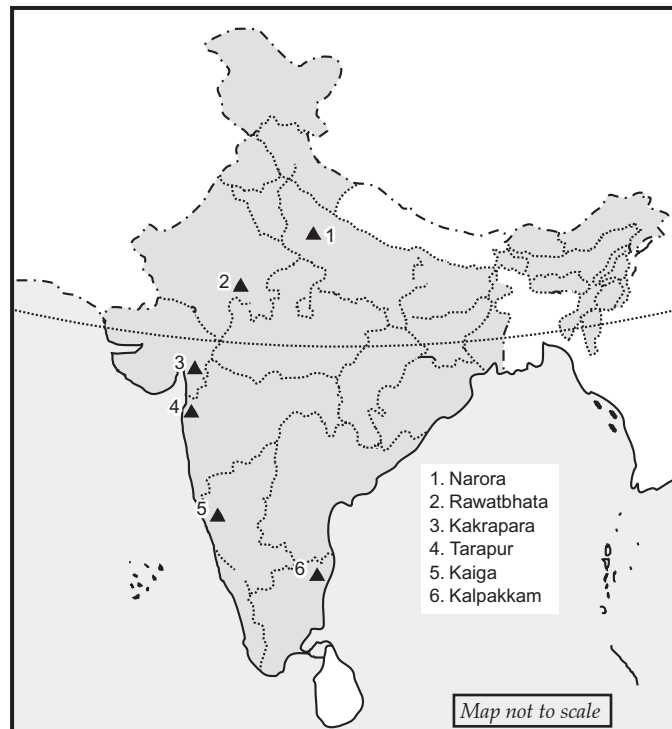
Q. 9. Identify major oil fields.



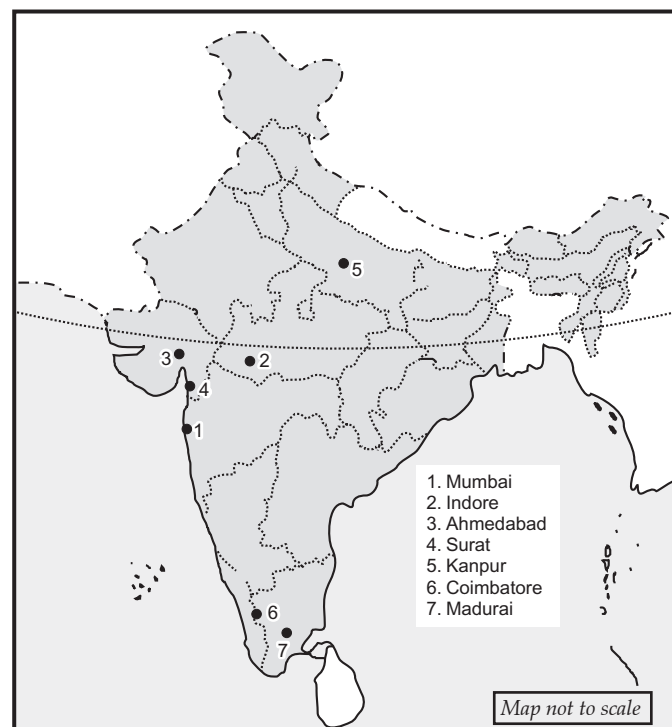
Q. 10. Identify thermal power stations.



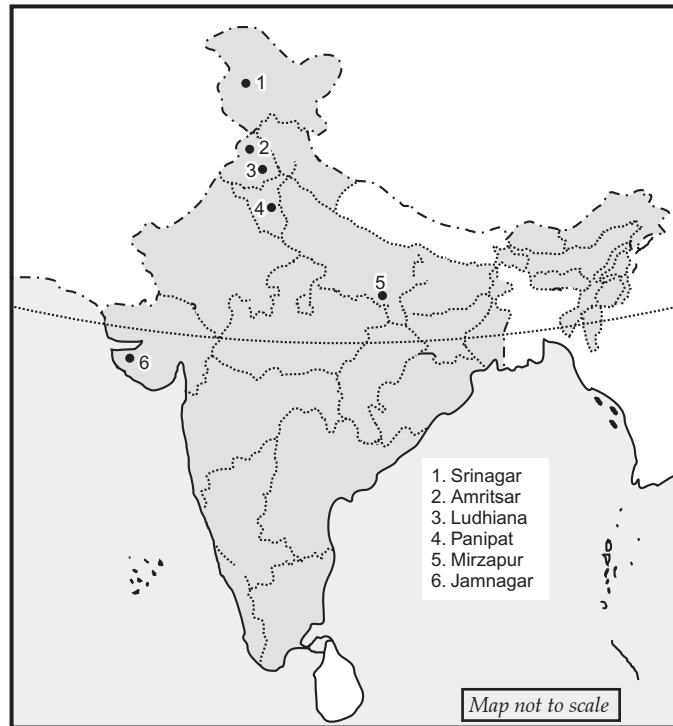
Q. 11. Identify main nuclear power stations.



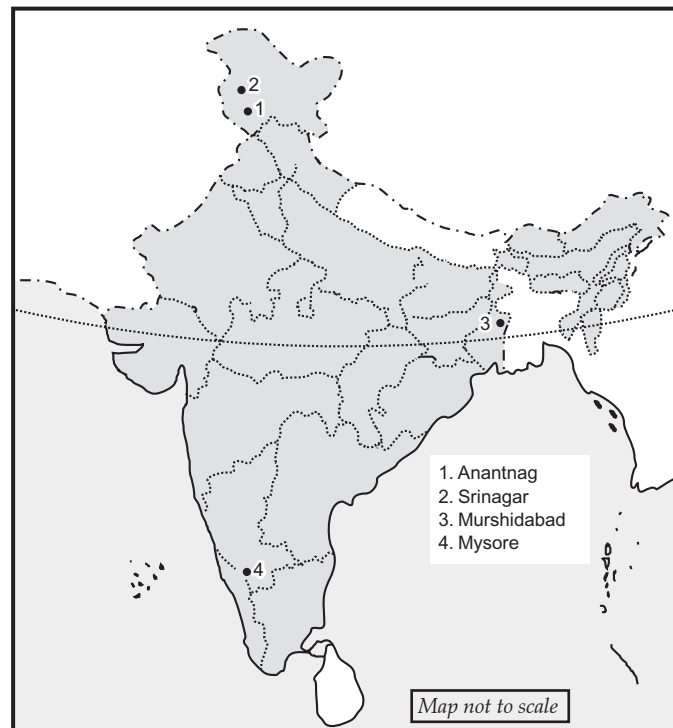
Q. 12. Locate and label major cotton textile industries.



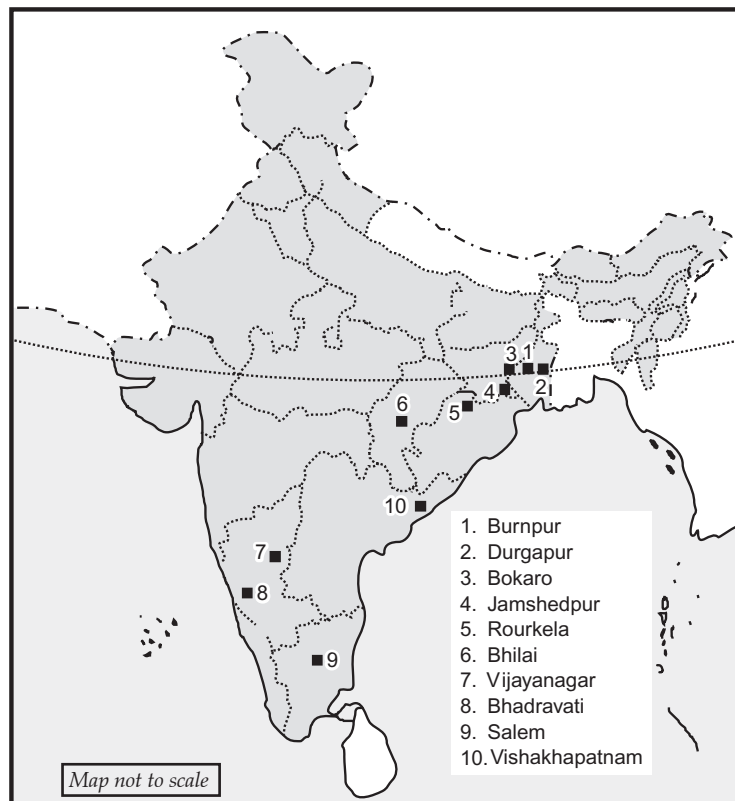
Q. 13. Locate and label woollen industries.



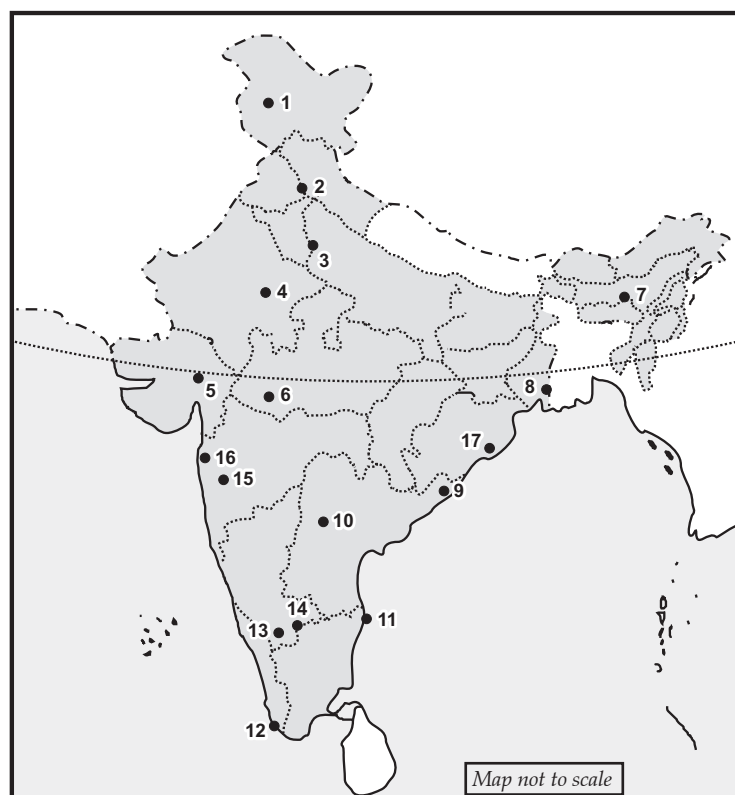
Q. 14. Locate and label major silk industries.



Q. 15. Locate and label iron and steel industries.

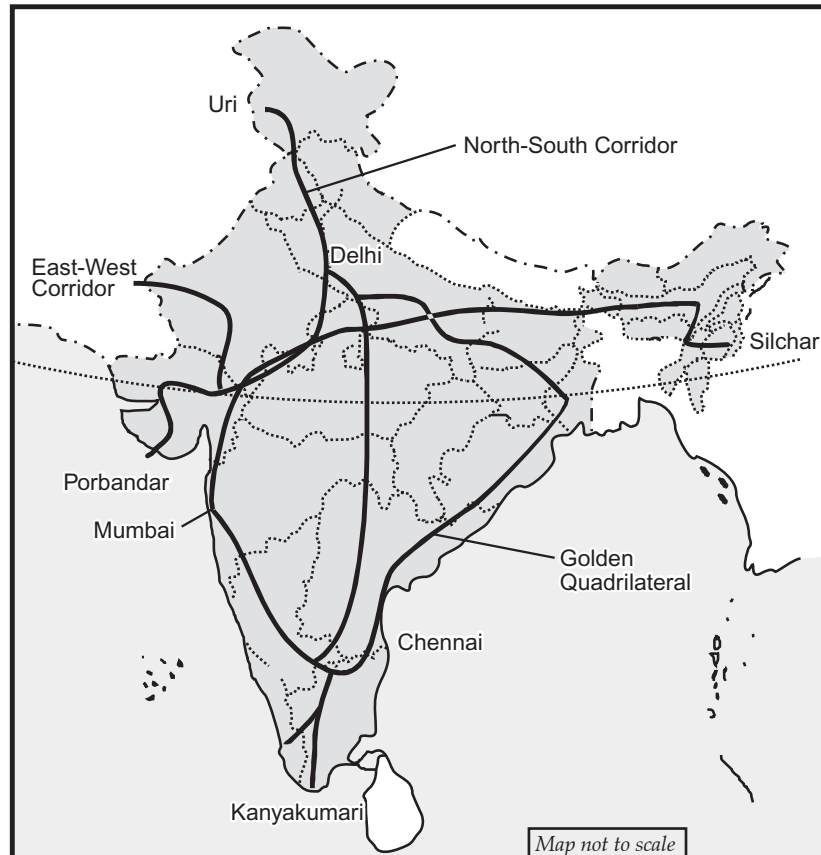


Q. 16. Locate and label software technology parks.

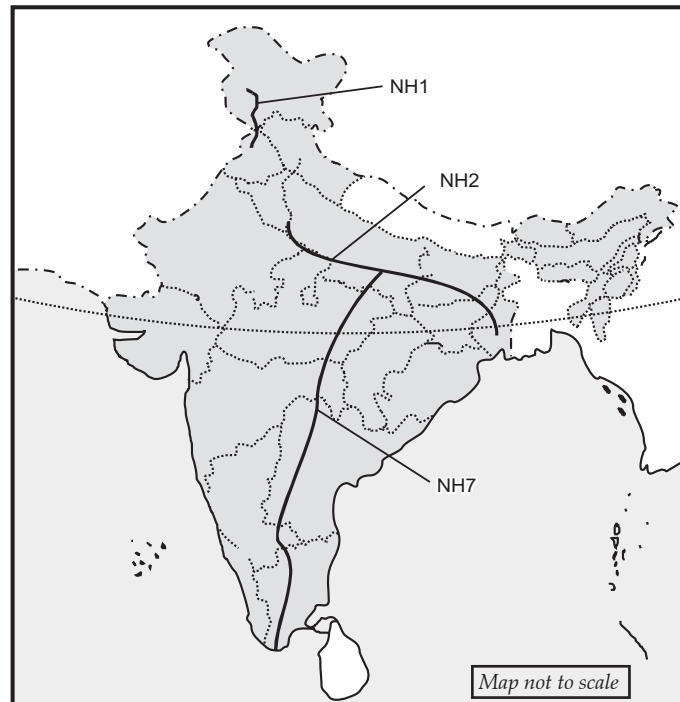


- | | | |
|---------------|-----------------|------------------------|
| 1. Srinagar | 2. Mohali | 3. Noida |
| 4. Jaipur | 5. Gandhinagar | 6. Indore |
| 7. Guwahati | 8. Kolkata | 9. Vishakhapatnam |
| 10. Hyderabad | 11. Chennai | 12. Thiruvananthapuram |
| 13. Mysore | 14. Bangalore | 15. Pune |
| 16. Mumbai | 17. Bhubaneswar | |

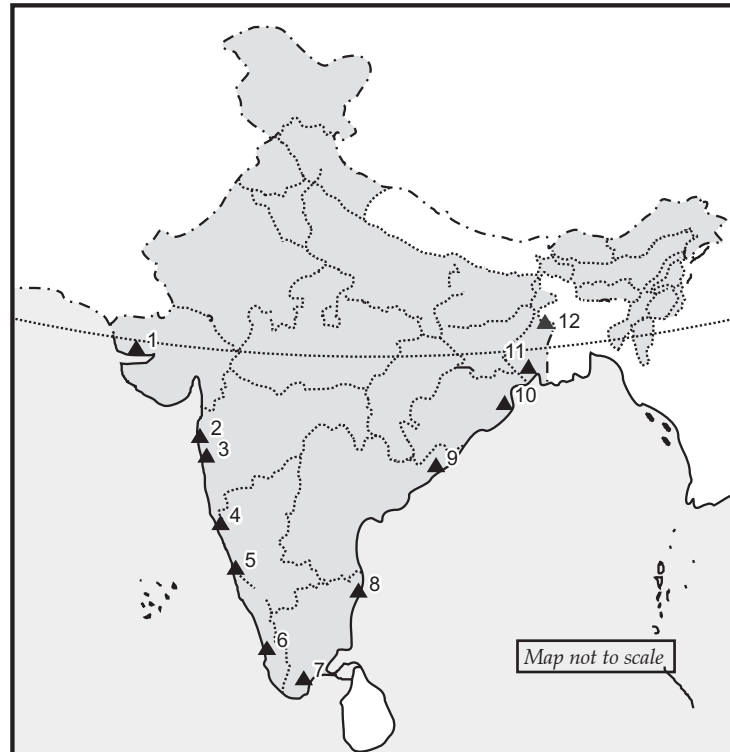
Q. 17. Locate and label national highways development projects.



Q. 18. Locate and label national highways.



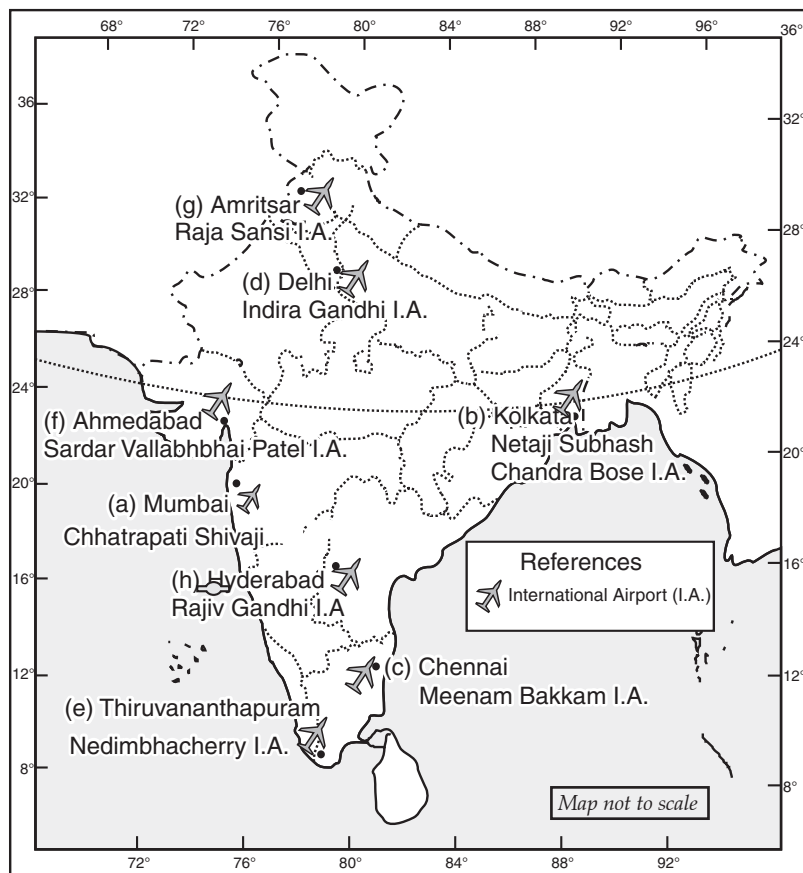
Q. 19. Locate and label major sea ports.



- | | | |
|--------------|------------------|---------------------|
| 1. Kandla | 2. Mumbai | 3. Jawaharlal Nehru |
| 4. Marmagao | 5. New Mangalore | 6. Kochi |
| 7. Tuticorin | 8. Chennai | 9. Vishakhapatnam |
| 10. Paradip | 11. Haldia | 12. Kolkata |

Q. 20. Locate and label international airports.

- (a) Chhatrapati Shivaji International Airport
- (b) Netaji Subhash Chandra Bose International Airport
- (c) Meenam Bakkam International Airport
- (d) Indira Gandhi International Airport
- (e) Nedimbacherry International Airport
- (f) Sardar Vallabhbhai Patel International Airport
- (g) Raja Sansi International Airport
- (h) Hyderabad International Airport / Rajiv Gandhi International Airport.



Previous Year Questions

3 marks each

Q. 1. Two features A and B are shown in the given political outline map of India. Identify these features with the help of following information and write their correct names on the lines marked on the map :

[Board Term-II, 2016, KCG3409]

(a) A cotton textile centre

(b) Nuclear power plant.

On the same political outline map of India, locate and label the following feature with appropriate symbol :

(c) New Mangalore seaport.

Ans. As per the information provided, the features have been Labelled in the map.

(a) A cotton textile centre—Surat

(b) Nuclear power plant—Naraura

(c) New Mangalore seaport.



Q. 2. On the given political outline map of India, two features A and B are marked. Identify these features with the help of the following information :

[Board Term-II, 2015, Delhi Set-I, II, III]

(i) Iron-ore Mine.

(ii) Terminal station of North-South Corridor

On the same map, locate and label the following :

(i) Gandhinagar Software Technology Park

Ans. As per the information provided, the features have been labelled in the map.

- A. Iron-ore mine-Mayurbhanj.**
- B. Terminal station of North-South Corridor- Lucknow**
- (i) Gandhinagar Software Technology Park**

