

Chapter – 7

Information Processing

Ex 7.1



(i) How many paths are there to reach temple from bus stop?

Answer:

1

(ii) Which is the longest path and shortest path?

Answer:

longest path Bus stand to Bank, shortest path Bus stand to temple

(iii) Specify the two places on the route from market to school?

Answer:

Mosque. Bank

(iv) _____ is the places found between temple and mosque

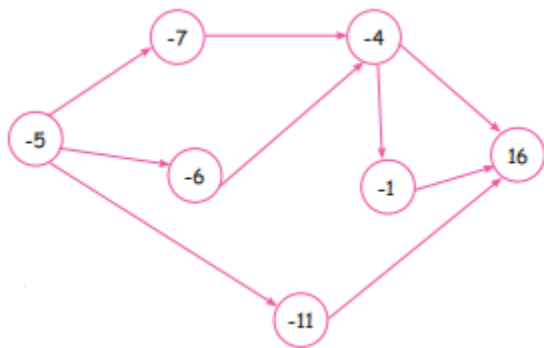
- (a) Bank
- (b) textile
- (c) Library

Answer:
(b) textile

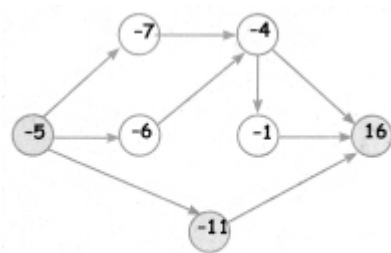
InText Questions

Activity (Text Book Page No. 52)

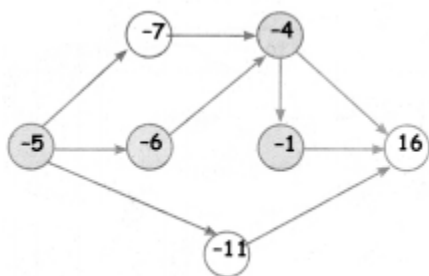
Write the shortest and longest path of addition of 16



Answer:



Shortest path



Longest path