

Joint Bar Graph

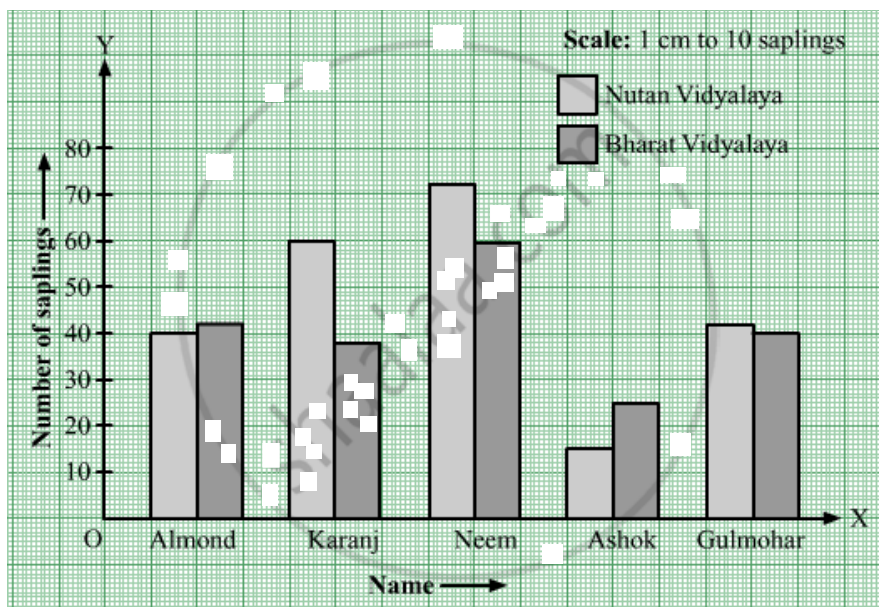
[PAGES 53 - 54]

Q 1 | Page 53

The number of saplings planted by schools on World Tree Day is given in the table below. Draw a joint bar graph to show these figures.

School Name	Name of sapling	Almond	Karanj	Neem	Ashok	Gulmohar
Nutan Vidyalaya		40	60	72	15	42
Bharat Vidyalaya		42	38	60	25	40

Solution: The required joint bar graph is shown below.



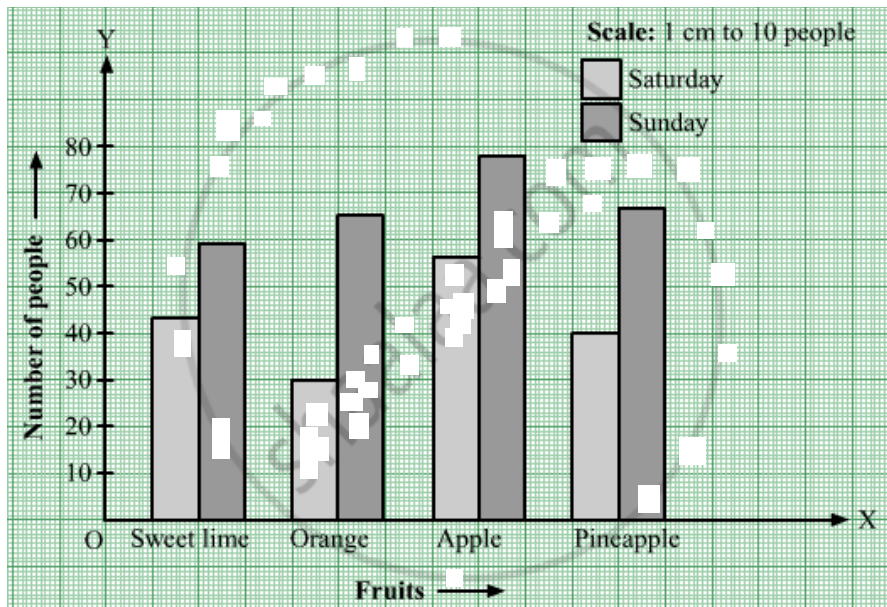
Q 2 | Page 53

The table below shows the number of people who had different juices at a juice bar on a Saturday and a Sunday. Draw a joint bar graph for this data.

Days	Fruits	Sweet Lim	Orange	Apple	Pineapple
Saturday		43	30	56	40
Sunday		59	65	78	67

Solution:

The required joint bar graph is shown below.

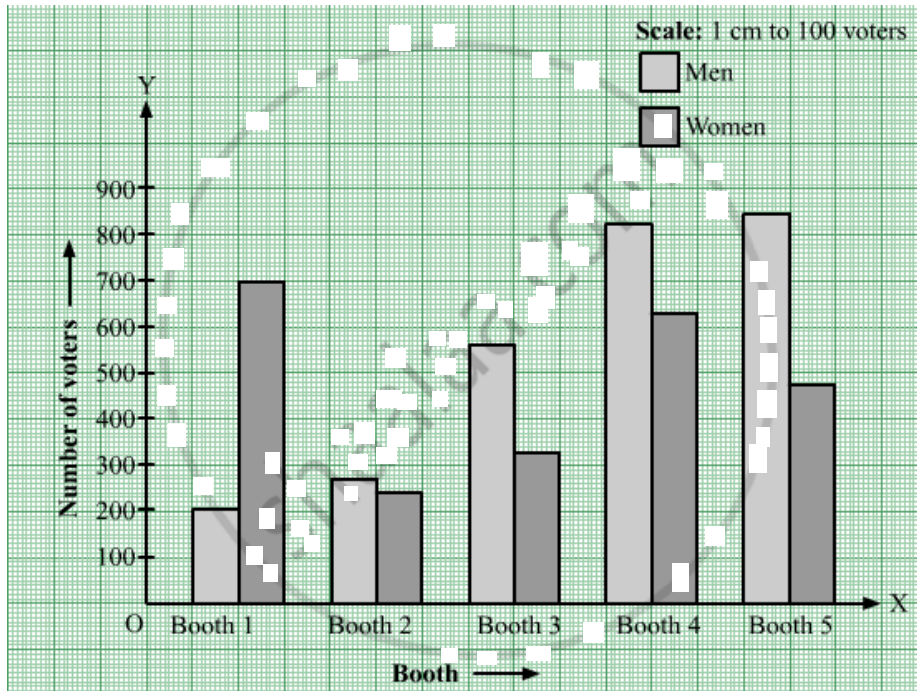


Q 3 | Page 54

The following numbers of votes were cast at 5 polling booths during the Gram Panchayat elections. Draw a joint bar graph for this data.

Persons	Booth No.	1	2	3	4	5
Men		200	270	560	820	850
Women		700	240	340	640	470

Solution: The required joint bar graph is shown below.

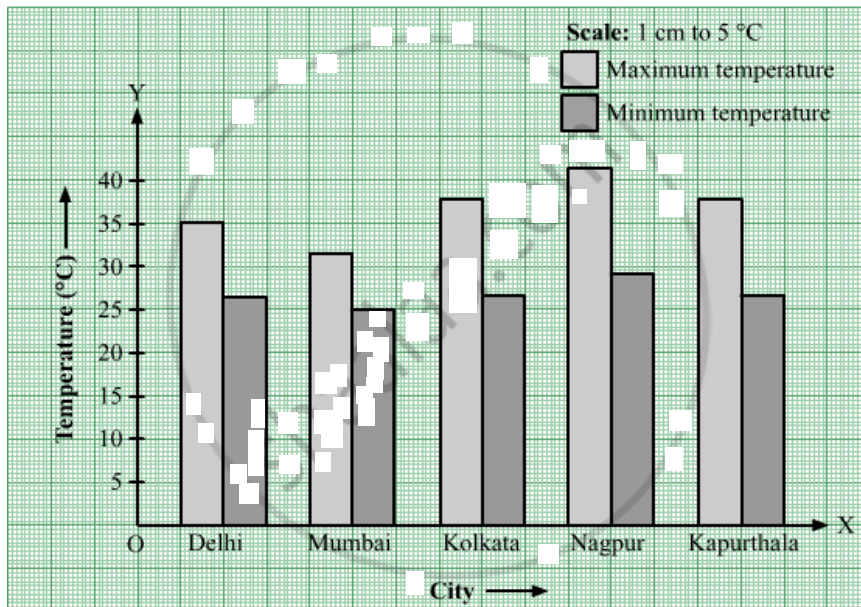


Q 4 | Page 54

The maximum and minimum temperatures of five Indian cities are given in °C. Draw a joint bar graph for this data.

Temperature	City	Delhi	Mumbai	Kolkata	Nagpur	Kapurthala
Maximum temperature		35	32	37	41	37
Minimum temperature		26	25	26	29	26

Solution: The required joint bar graph is shown below.



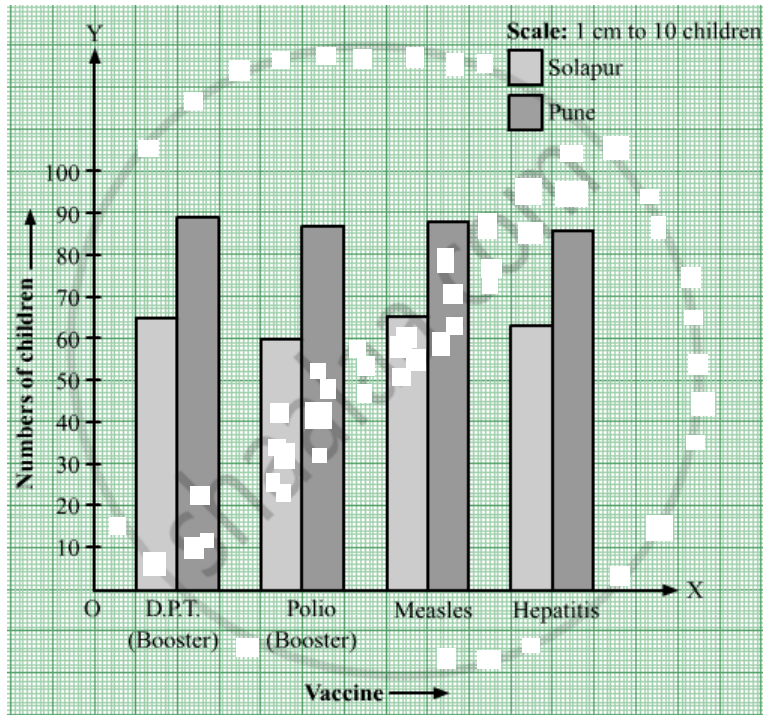
Q 5 | Page 54

The numbers of children vaccinated in one day at the government hospitals in Solapur and Pune are given in the table. Draw a joint bar graph for this data.

City	Vaccine	D.P.T. (Booster)	Polio (Booster)	Measles	Hepatitis
Solapur		65	60	65	63
Pune		89	87	88	86

Solution:

The required joint bar graph is shown below.



Q 6 | Page 54

The percentage of literate people in the states of Maharashtra and Gujarat are given below. Draw a joint bar graph for this data.

State	Year	1971	1981	1991	2001	2011
Maharashtra		46	57	65	77	83
Gujarat		40	45	61	69	79

Solution: The required joint bar graph is shown below.

