

**Class: XII**  
**SESSION : 2022-2023**  
**SUBJECT: Chemistry**  
**SAMPLE QUESTION PAPER - 17**  
**with SOLUTION**

**MM: 70**

**Time: 3 hours**

**General Instructions:**

**Read the following instructions carefully.**

- a) There are **35** questions in this question paper with internal choice.
- b) SECTION A consists of 18 multiple-choice questions carrying 1 mark each.
- c) SECTION B consists of 7 very short answer questions carrying 2 marks each.
- d) SECTION C consists of 5 short answer questions carrying 3 marks each.
- e) SECTION D consists of 2 case- based questions carrying 4 marks each.
- f) SECTION E consists of 3 long answer questions carrying 5 marks each.
- g) **All questions are compulsory.**
- h) **Use of log tables and calculators is not allowed**

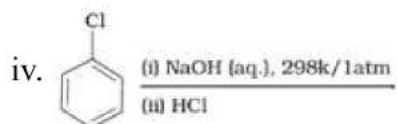
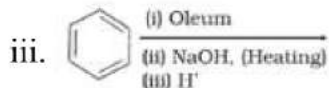
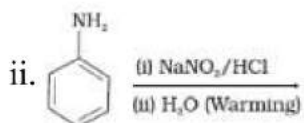
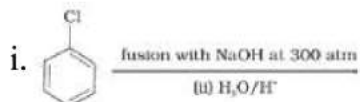
**Section A**

1. Reaction of glucose with acetic anhydride indicates the presence of: [1]
- a) — CHO group
  - b) — CH<sub>2</sub> — group
  - c) five — OH groups
  - d) all of these

2. Which of the following is not considered a transition metal? [1]

- a) Zn                                  b) Ac  
c) Y                                      d) La

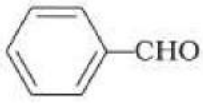
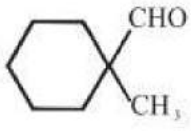
3. Which of the following reactions will yield phenol? [1]



- a) i, iii, iv                                  b) ii, iii, iv  
c) i, ii, iii                                  d) i, ii, iv

4. The rate of reaction between two reactants A and B decreases by a factor 4 if the concentration of reactant B is doubled. The order of this reaction with respect to B is: [1]

- a) 1    b) -1  
c) 2    d) -2

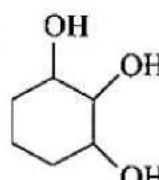
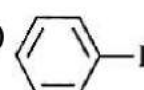
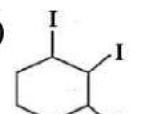
5. What compound is produced when cyclohexene is treated with concentrated  $\text{KMnO}_4$ ? [1]
- a) Succinic acid  
b) Adipic acid  
c) Hexanoic acid  
d) Cyclohexanecarboxylic acid
6. In electrolysis of  $\text{NaCl}$  when Pt electrode is taken then  $\text{H}_2$  is liberated at cathode while with Hg cathode it gives sodium amalgam. [1]
- a) Conc. of  $\text{H}^+$  ions is larger when Pt electrode is taken  
b) Hg is more inert than Pt  
c) More voltage is required to reduce  $\text{H}^+$  at Hg than the Pt  
d) Na is dissolved in Hg while it does not dissolve in Pt
7.  $\text{KMnO}_4 + \text{HCl} \rightarrow \text{H}_2\text{O} + \text{X(g)}$ , [1]  
(Acidified)  
X is a:
- a) violet gas  
b) yellow-brown gas  
c) greenish-yellow gas  
d) red liquid
8. If the starting amide has got four carbon atoms and the amine that is formed has got only 3 carbon atoms, then the reaction is called \_\_\_\_\_. [1]
- a) Gabriel synthesis  
b) Carbylamines reaction  
c) Hoffmann bromamide reaction  
d) Clemmensen reduction
9. Cannizaro's reaction is not given by \_\_\_\_\_. [1]
- a)  $\text{CH}_3\text{CHO}$   
b)   $\text{C}_6\text{H}_5\text{CHO}$   
c)   $\text{C}_6\text{H}_{11}\text{CHO}$   
d)  $\text{HCHO}$
10. The rate constant (K) for the reaction  $2\text{A} + \text{B} \rightarrow \text{Product}$  was found to be  $2.5 \times 10^{-5} \text{ litre mol}^{-1} \text{ sec}^{-1}$  after 15 sec,  $2.60 \times 10^{-5} \text{ litre mol}^{-1} \text{ sec}^{-1}$  after 50 sec. The order of reaction is: [1]
- a) 2  
b) zero  
c) 1  
d) 3

11. During electrolysis of  $H_2O$ , the molar ratio of  $H_2$  and  $O_2$  formed is: [1]

- a) 2 : 1    b) 1 : 2  
 c) 1 : 1    d) 1 : 3

12.  [1]

Which of the following is a major product?

- a)     b)   
 c) None of these    d) 



13. Proteins are found to have two different types of secondary structures viz.  $\alpha$ -helix [1] and  $\beta$ -pleated sheet structure.  $\alpha$ -Helix structure of protein is established by:

- a) van der Waals forces    b) dipole-dipole interactions  
 c) hydrogen bonds    d) peptide bonds

14. What compound is produced when  $(CH_3)_2CHCH_2Br$  is subjected to the [1]  
 following sequence of steps:

1. Mg,  $Et_2O$ ,  
 2.  $CO_2$ ,  
 3.  $H_3O^+$ ?

- a) 3 – methylbutanoic acid    b) 2 – methylpropanoic acid  
 c) 2 – methylhexanoic acid    d) 3 – methylpropanoic acid

15. **Assertion (A):**  is more acidic than . [1]

**Reason (R):** Electron donating groups (EDG) increase acidity while electron-withdrawing groups (EWG) decrease acidity.

- a) Both A and R are true and R is the correct explanation of A.    b) Both A and R are true but R is not the correct explanation of A.

- c) A is true but R is false.                      d) A is false but R is true.
16. **Assertion (A):** Only a small amount of HCl is required in the reduction of nitro compounds with iron scrap and HCl in the presence of steam. [1]  
**Reason (R):** FeCl<sub>2</sub> formed gets hydrolyzed to release HCl during the reaction.
- a) Both A and R are true and R is the correct explanation of A.                      b) Both A and R are true but R is not the correct explanation of A.  
c) A is true but R is false.                      d) A is false but R is true.
17. **Assertion (A):** The complex ion trans-[Co(en)<sub>2</sub>Cl<sub>2</sub>]<sup>+</sup> is optically active. [1]  
**Reason (R):** It is an octahedral complex.
- a) Both A and R are true and R is the correct explanation of A.                      b) Both A and R are true but R is not the correct explanation of A.  
c) A is true but R is false.                      d) A is false but R is true.
18. **Assertion (A):** Transition metals are good catalysts. [1]  
**Reason (R):** V<sub>2</sub>O<sub>5</sub> or Pt is used in the preparation of H<sub>2</sub>SO<sub>4</sub> by contact process.
- a) Both A and R are true and R is the correct explanation of A.                      b) Both A and R are true but R is not the correct explanation of A.  
c) A is true but R is false.                      d) A is false but R is true.

### Section B

1. For the reaction [2]  
 $Cl_2(g) + 2NO(g) \rightarrow 2NOCl(g)$   
The rate law is expressed as: rate = k [Cl<sub>2</sub>] [NO]<sup>2</sup>  
What is the overall order of this reaction?
20. How is Limiting molar conductivity related to [2]  
1. Degree of dissociation  
2. Dissociation constant
- OR
- How is standard electrode potential of a cell related to:-  
i. Equilibrium constant?  
ii. Gibbs free energy change.
21. Resistance of a conductivity cell filled with 0.1 mol L<sup>-1</sup> KCl solution is 100 Ω. If [2]  
the resistance of the same cell when filled with 0.02 mol L<sup>-1</sup> KCl solution is 520

$\Omega$ , calculate the conductivity and molar conductivity of  $0.02 \text{ mol L}^{-1}$  KCl solution. The conductivity of  $0.1 \text{ mol L}^{-1}$  KCl solution is  $1.29 \text{ S/m}$ .

22. Amongst the following compounds, identify which are insoluble, partially soluble and highly soluble in water? [2]
- Phenol
  - Toluene
  - Formic acid
  - ethylene glycol
  - chloroform
  - pentanol

23. Using the valence bond approach, deduce the shape and magnetic behaviour of  $[\text{Cr}(\text{NH}_3)_6]^{3+}$  ion. [Atomic number of Cr = 24] [2]

OR

Using IUPAC norms write the formulae for the following :

- Hexaamminecobalt (III) sulphate
  - Potassium trioxalatochromate (III)
24. How would you obtain [2]
- picric acid from phenol?
  - 2-methyl propanol from 2-methyl propene?
25. Draw the major monohalo product of the following reaction: [2]
- $$\text{CH}_3\text{CH}_2\text{Br} + \text{NaI} \rightarrow$$

### Section C

26. Arrange the following in increasing order of their basic strength in aqueous solution: [3]
- $\text{C}_2\text{H}_5\text{NH}_2, \text{C}_6\text{H}_5\text{NH}_2, \text{NH}_3, \text{C}_6\text{H}_5\text{CH}_2\text{NH}_2$  and  $(\text{C}_2\text{H}_5)_2\text{NH}$
  - $\text{C}_2\text{H}_5\text{NH}_2, (\text{C}_2\text{H}_5)_2\text{NH}, (\text{C}_2\text{H}_5)_3\text{N}, \text{C}_6\text{H}_5\text{NH}_2$
  - $\text{CH}_3\text{NH}_2, (\text{CH}_3)_2\text{NH}, (\text{CH}_3)_3\text{N}, \text{C}_6\text{H}_5\text{NH}_2, \text{C}_6\text{H}_5\text{CH}_2\text{NH}_2$
27. Formulate the galvanic cell in which the following reaction takes place. [3]
- $$\text{Zn(s)} + 2\text{Ag}^+(\text{aq}) \rightarrow \text{Zn}^{2+}(\text{aq}) + 2\text{Ag(s)}; E^\circ(\text{Zn}^{2+}|\text{Zn}) = -0.76\text{V} \text{ and } E^\circ(\text{Ag}^+|\text{Ag}) = 0.80\text{V}$$
- Which one of its electrodes is negatively charged?
  - The reaction taking place at each of its electrode.
  - The carriers of current within this cell.
28. Show that in case of first order reaction, the time required for 99.9% of the reaction to complete its 10 times that required for half of the reaction to take [3]

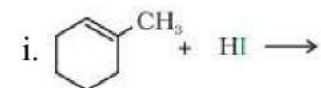
place.

(Given:  $\log 2 = 0.3010$ )

29. A hydrocarbon  $C_5H_{10}$  does not react with chlorine in dark but gives a single monochloro compound  $C_5H_9Cl$  in bright sunlight. Identify the hydrocarbon. [3]

OR

Draw the structures of major monohalo products in each of the following reactions:

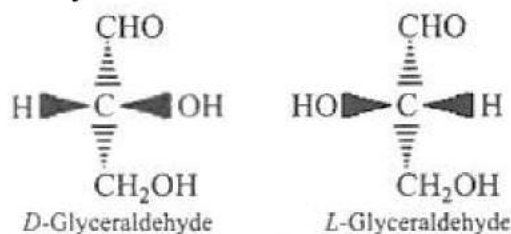


30. Complete and balance the given reaction [3]  
 $Cr_2O_7^{2-} + 14H^+ + 6Fe^{2+} \rightarrow$

#### Section D

31. Read the text carefully and answer the questions: [4]

Carbohydrates can exist in either of two conformations, as determined by the orientation of the hydroxyl group about the asymmetric carbon farthest from the carbonyl.



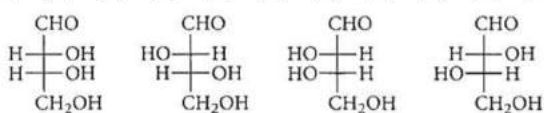
(Structures of glyceraldehyde enantiomers)

By convention, a monosaccharide is said to have D-configuration if the hydroxyl group attached to the asymmetric carbon atom adjacent to the  $-CH_2OH$  group is on the right-hand side irrespective of the positions of the other hydroxyl groups. On the other hand, the molecule is assigned L-configuration if the  $-OH$  group attached to the carbon adjacent to the  $-CH_2OH$  group is on the left-hand side.

- D-Glyceraldehyde and L-Glyceraldehyde are
- The two functional groups present in a typical carbohydrate are
- Which of the monosaccharides, is the majority found in the human body?

OR

The correct corresponding order of names of four aldoses with configuration given below



respectively, is

32. **Read the text carefully and answer the questions:** [4]

To explain bonding in coordination compounds various theories were proposed. One of the important theories was valence bond theory. According to that, the central metal ion in the complex makes available a number of empty orbitals for the formation of coordination bonds with suitable ligands. The appropriate atomic orbitals of the metal hybridise to give a set of equivalent orbitals of definite geometry. The d - orbitals involved in the hybridisation may be either inner d-orbitals i.e., (n - 1) d or outer d - orbitals i.e. nd. For example,  $\text{Co}^{3+}$  forms both inner orbital and outer orbital complexes, with ammonia it forms  $[\text{Co}(\text{NH}_3)_6]^{3+}$  and with fluorine it forms  $[\text{CoF}_6]^{3-}$  complex ion.

- (i) Which of the following is not true for  $[\text{CoF}_6]^{3-}$ ?
- It is paramagnetic.
  - It has coordination number of 6.
  - It is outer orbital complex.
  - It involves  $d^2sp^3$  hybridisation.
- (ii) Write the structure and magnetic character of  $[\text{Co}(\text{NH}_3)_6]^{3+}$ ?
- (iii) Why  $[\text{CoF}_6]^{3-}$  is paramagnetic?

**OR**

Give one example for inner orbital or low spin complex?

### Section E

33. How will you convert ethanal into the following compounds? [5]

- Butane-1, 3-diol
- But-2-enal
- But-2-enoic acid

OR

Write the IUPAC names of the following ketones and aldehydes. Wherever possible, give also common names.

- $\text{CH}_3\text{CO}(\text{CH}_2)_4\text{CH}_3$
- $\text{CH}_3\text{CH}_2\text{CHBrCH}_2(\text{CH}_3)\text{CHO}$
- $\text{CH}_3(\text{CH}_2)_5\text{CHO}$
- Ph - CH = CH - CHO





34. Answer the following questions: [5]
- Out of  $\text{Cu}_2\text{Cl}_2$  and  $\text{CuCl}_2$ , which is more stable and why?
  - Predict the order of reactivity of four isomeric bromobutanes in  $\text{S}_{\text{N}}1$  reaction.
  - Give chemical tests to distinguish between the following pair of compound Phenol and benzoic acid.
  - Define ambident nucleophile with an example.
  - Name the base that is found in nucleotide of RNA only.
35. An aqueous solution of 2% non-volatile solute exerts a pressure of 1.004 bar at the normal boiling point of the solvent. What is the molar mass of the solute? [5]

OR

Heptane and octane form an ideal solution. At 373 K, the vapour pressures of the two liquid components are 105.2 kPa and 46.8 kPa respectively. What will be the vapour pressure of a mixture of 26.0 g of heptane and 35 g of octane?

# SOLUTION

## Section A

1. (c) five — OH groups

**Explanation:** five — OH groups

2. (a) Zn

**Explanation:** Zinc, cadmium, and mercury of group 12 have full  $d^{10}$  configuration in their ground state as well as in their common oxidation states and hence, are not regarded as transition metals. However, being the end members of the three transition series, their chemistry is studied along with the chemistry of the transition metals.

3. (c) i, ii, iii

**Explanation:**

- **Preparation of phenols from haloarenes:** Chlorobenzene is an example of haloarenes which is formed by monosubstitution of the benzene ring. When chlorobenzene is fused with sodium hydroxide at 623K and 320 atm sodium phenoxide is produced. Finally, sodium phenoxide on acidification gives phenols.
- **Preparation of phenols from diazonium salts:** When an aromatic primary amine is treated with nitrous ( $\text{NaNO}_2 + \text{HCl}$ ) acid at 273 - 278 K, diazonium salts are obtained. These diazonium salts are highly reactive in nature. Upon warming with water, these diazonium salts finally hydrolyse to phenols. Phenols can also be obtained from diazonium salts by treating it with dilute acids.
- **Preparation of phenols from benzene sulphonic acid:** Benzenesulphonic acid can be obtained from benzene by reacting it with oleum. Benzenesulphonic acid thus formed is treated with molten sodium hydroxide at high temperature which leads to the formation of sodium phenoxide. Finally, sodium phenoxide on acidification gives phenols.

4. (d)  $-\frac{2}{n}$

**Explanation:**  $r = K[A]^m[B]^n$ ;

Also,  $\frac{r}{4} = K[A]^m [2B]^n$

$$4 = \left(\frac{1}{2}\right)^n \text{ or } 2^2 = 2^{-n}$$

5. (b) Adipic acid

**Explanation:** Conc.  $\text{KMnO}_4$  will cause oxidative ozonolysis and ring-opening forming adipic acid.



6. (c) More voltage is required to reduce  $\text{H}^+$  at Hg than the Pt

**Explanation:** More voltage is required to reduce  $\text{H}^+$  at Hg than the Pt

7. (c) greenish-yellow gas

**Explanation:** greenish-yellow gas

8. (c) Hoffmann bromamide reaction

**Explanation:** In Hoffmann bromamide degradation reaction, the amine formed has one carbon less than the amide.



9. (a)  $\text{CH}_3\text{CHO}$

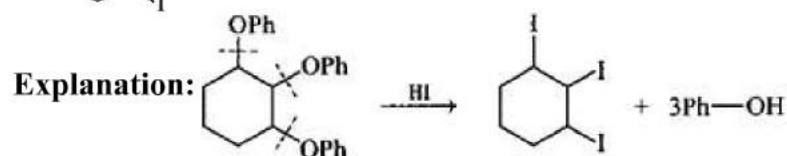
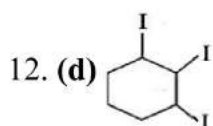
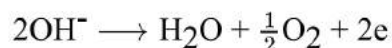
**Explanation:** Acetaldehyde ( $\text{CH}_3\text{CHO}$ ) have alpha hydrogen hence will undergo aldol

reaction in presence of base rather than cannizaro reaction. Cannizaro reaction is given when there is no alpha hydrogen present on carbonyl group.

10. (a) 2

**Explanation:** K does not change with time; also unit of K suggest it to be II order.

11. (a) 2 : 1



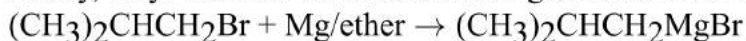
13. (c) hydrogen bonds

**Explanation:** hydrogen bonds

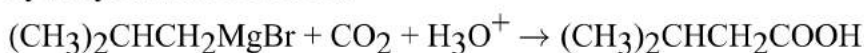
14. (a) 3 – methylbutanoic acid

**Explanation:**

Firstly, alkyl bromide will react with Mg/ether to form Grignard reagent

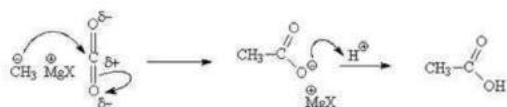


Now Grignard reagent forms will act as a nucleophile and attack  $\text{O}=\text{C}=\text{O}$ , followed by hydrolysis will form acid.

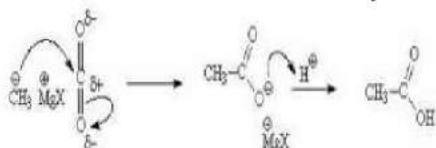


The general reaction of grignard ( $\text{CH}_3\text{MgX}$ ) with  $\text{CO}_2$  is as shown:

Carbon dioxide  $\longrightarrow$  Carboxylic acids



Carbon dioxide  $\longrightarrow$  Carboxylic acids



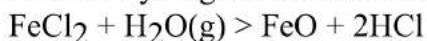
15. (c) A is true but R is false.

**Explanation:** A is true but R is false.

16. (a) Both A and R are true and R is the correct explanation of A.

**Explanation:**  $\text{Fe} + 2\text{HCl} > \text{FeCl}_2 + 3[\text{H}]$

Nascent hydrogen reduces nitro compounds



17. (b) Both A and R are true but R is not the correct explanation of A.

**Explanation:** Both A and R are true but R is not the correct explanation of A.

18. (a) Both A and R are true and R is the correct explanation of A.

**Explanation:** Both A and R are true and R is the correct explanation of A.

## Section B

1. Overall order of this reaction.

$$= 1 + 2 = 3$$

20. 1. **Degree of dissociation:-** At any concentration  $c$ , if  $\alpha$  is the degree of dissociation then it can be approximated to the ratio of molar conductivity  $\Lambda_m$  at the concentration  $c$  to limiting molar conductivity,  $\Lambda_m^0$ . Thus,

$$\alpha = \frac{\Lambda_m}{\Lambda_m^0}$$

2. **Dissociation Constant:-** For weak electrolyte like acetic acid, dissociation constant at concentration  $c$  is given by

$$K_a = \frac{c\Lambda_m^2}{\Lambda_m^0(\Lambda_m^0 - \Lambda_m)}$$

OR

i. Standard electrode potential and equilibrium constant

$$E^0_{cell} = \frac{2.303RT}{nF} \log k_c$$

Where  $E^0_{cell}$  = standard electrode potential of cell

R = Gas constant

T = temperature in Kelvin

n = no. of electrons.

F = Faraday's constant and

$K_c$  = Equilibrium constant

ii. Standard electrode potential and Gibbs free energy change-

$$\Delta G^0 = -nFE^0_{cell}$$

Where  $\Delta G^0$  = Change in Gibbs' free energy

n = No. of electrons

F = Faraday's Constant

$E^0_{cell}$  = Standard electrode Potential of cell.

21. The cell constant is given by the equation:

Cell constant =  $G^*$  = conductivity  $\times$  resistance

$$= 1.29 \text{ S/m} \times 100 \text{ } \Omega = 129 \text{ m}^{-1} = 1.29 \text{ cm}^{-1}$$

Conductivity of 0.02 mol L<sup>-1</sup> KCl solution = cell constant / resistance

$$= \frac{G^*}{R} = \frac{129 \text{ m}^{-1}}{520 \Omega} = 0.248 \text{ S m}^{-1}$$

$$\text{Concentration} = 0.02 \text{ mol L}^{-1} = 1000 \times 0.02 \text{ mol m}^{-3} = 20 \text{ mol m}^{-3}$$

$$\text{Molar conductivity} = \Lambda_m = \frac{K}{c} = \frac{248 \times 10^{-3} \text{ Sm}^{-1}}{20 \text{ mol m}^{-3}} = 124 \times 10^{-4} \text{ S m}^2 \text{ mol}^{-1}$$

$$\text{Alternatively, conductivity of solution } K = \frac{1.29 \text{ cm}^{-1}}{520 \Omega} = 0.248 \times 10^{-2} \text{ S cm}^{-1}$$

and molar conductivity of solution  $\Lambda_m = K \times 1000 \text{ cm}^3 \text{ L}^{-1} \text{ molarity}^{-1}$

$$= \frac{0.248 \times 10^{-2} \text{ S cm}^{-1} \times 1000 \text{ cm}^3 \text{ L}^{-1}}{0.02 \text{ mol L}^{-1}}$$

$$= 124 \text{ S cm}^2 \text{ mol}^{-1}$$

22. i. Phenol - Partially soluble in water

ii. Toluene - Insoluble in water

iii. Formic acid - Soluble in water

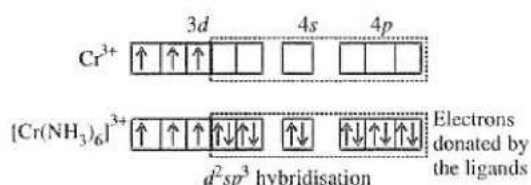
iv. Ethylene glycol - Soluble in water

v. CHCl<sub>3</sub> - Insoluble in water

vi. Pentanol - Partially soluble in water

23. Cr has electronic configuration [Ar]4s<sup>1</sup>3d<sup>5</sup>

Cr<sup>3+</sup> has electronic configuration [Ar]4s<sup>0</sup>3d<sup>5</sup>



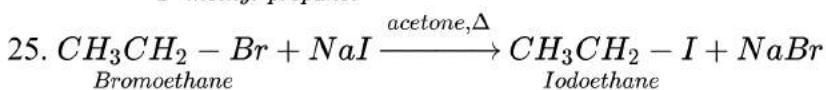
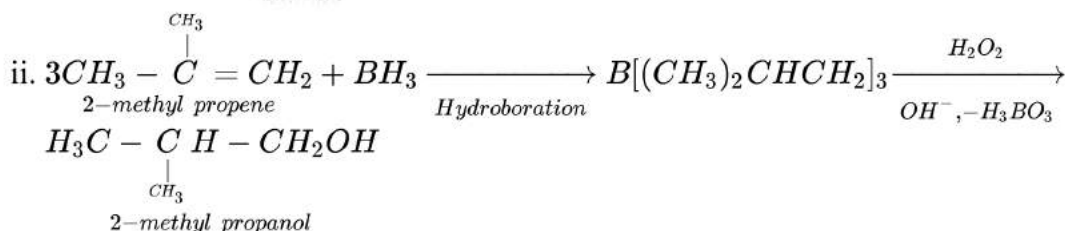
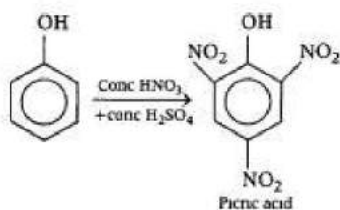
$d^5 sp^3$ , hybridisation gives octahedral shape. The complex is paramagnetic due to the presence of unpaired electrons.

OR

i. Formula of Hexaamminecobalt (III) sulphate is  $[\text{Co}(\text{NH}_3)_6]_2(\text{SO}_4)_3$ .

ii. Formula of Potassium trioxalatochromate (III) is  $\text{K}_3[\text{Cr}(\text{C}_2\text{O}_4)_3]$ .

24. i.



### Section C

26. i.  $\text{C}_6\text{H}_5\text{NH}_2 < \text{NH}_3 < \text{C}_6\text{H}_5\text{CH}_2\text{NH}_2 < \text{C}_2\text{H}_5\text{NH}_2 < (\text{C}_2\text{H}_5)_2\text{NH}$

ii.  $\text{C}_6\text{H}_5\text{NH}_2 < \text{C}_2\text{H}_5\text{NH}_2 < (\text{C}_2\text{H}_5)_3\text{N} < (\text{C}_2\text{H}_5)_2\text{NH}$

iii.  $\text{C}_6\text{H}_5\text{NH}_2 < \text{C}_6\text{H}_5\text{CH}_2\text{NH}_2 < (\text{CH}_3)_3\text{N} < \text{CH}_3\text{NH}_2 < (\text{CH}_3)_2\text{NH}$

27. The cell reaction is  $\text{Zn}(\text{s}) + 2\text{Ag}^+(\text{aq}) \rightleftharpoons \text{Zn}^{2+}(\text{aq}) + 2\text{Ag}(\text{s})$ .

The cell is represented as  $\text{Zn}(\text{s}) | \text{Zn}^{2+}(\text{aq}) || \text{Ag}^+(\text{aq}) | \text{Ag}(\text{s})$ ;  $E^\circ(\text{Zn}^{2+}|\text{Zn}) = -0.76\text{V}$  and  $E^\circ(\text{Ag}^+|\text{Ag}) = 0.80\text{V}$ .

i. Since zinc (Zn) is more reactive than silver (Ag). So, Zn electrode is negatively charged.

ii. At anode : Oxidation will take place;  $\text{Zn}(\text{s}) \rightarrow \text{Zn}^{2+}(\text{aq}) + 2\text{e}^-$  (oxidation)

At cathode: Reduction will take place;  $\text{Ag}^+(\text{aq}) + \text{e}^- \rightarrow \text{Ag}(\text{s})$  (reduction)

iii. Ions are the carriers of current within the cell.

28. For a first order reaction

$$k = \frac{2.303}{t} \log \frac{[R]_0}{[R]}$$

For 99.9% completion of reaction

$$[R]_0 = 100\text{M}, [R] = 100 - 99.9 = 0.1\text{M}$$

$$\therefore t_{99.9\%} = \frac{2.303}{k} \log \left[ \frac{100}{0.1} \right] \dots \text{(i)}$$

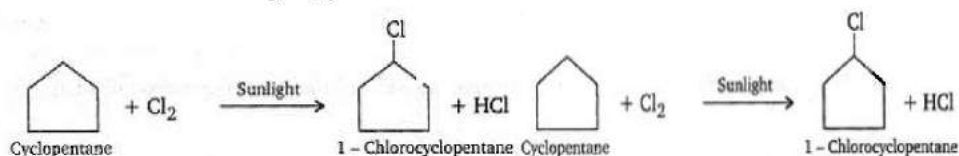
$$\text{Similarly, } t_{1/2} = \frac{2.303}{k} \log \left[ \frac{100}{50} \right] \dots \text{(ii)}$$

Divide equation (i) by equation (ii)

$$\frac{t_{99.9}}{t_{1/2}} = \frac{\log[1000]}{\log[2]} = \frac{3.0}{0.3010} \approx 10$$

$$\text{Hence } t_{99.9\%} = 10t_{1/2}$$

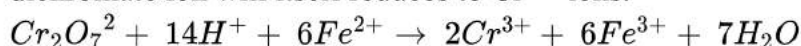
29. Since the hydrocarbon gives only one monochloro compound, it indicates that all hydrogen atoms in the hydrocarbon are equivalent. Thus, the compound is cyclopentane with the molecular formula  $C_5H_{10}$ .



Major monohalo product formed are;

- i.
- ii.  $CH_3CH_2I + NaBr$
- iii. + HBr

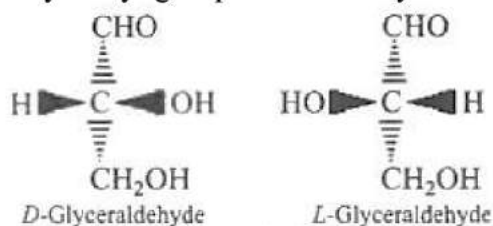
30. Acidified potassium dichromate act as a strong oxidising agents. It can oxidise iodides to iodine, sulphides to sulphur, tin(II) to tin(IV) and iron(II) salts to iron(III). In acidic medium dichromate ion will itself reduces to  $Cr^{3+}$  ions.



#### Section D

31. **Read the text carefully and answer the questions:**

Carbohydrates can exist in either of two conformations, as determined by the orientation of the hydroxyl group about the asymmetric carbon farthest from the carbonyl.



By convention, a monosaccharide is said to have D-configuration if the hydroxyl group attached to the asymmetric carbon atom adjacent to the  $-CH_2OH$  group is on the right-hand side irrespective of the positions of the other hydroxyl groups. On the other hand, the molecule is assigned L-configuration if the  $-OH$  group attached to the carbon adjacent to the  $-CH_2OH$  group is on the left-hand side.

(i) enantiomer

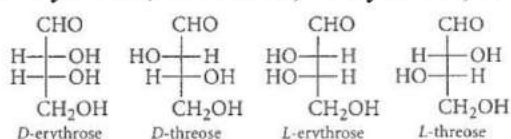
(ii)  $>C=O$  and  $-OH$

Carbohydrates are essentially polyhydroxy aldehydes and polyhydroxy ketones. Thus, the two functional groups present are  $>C=O$  (aldehyde or ketone) and  $-OH$ .

(iii) D-type is mainly found in human body.

OR

D-erythrose, D-threose, L-erythrose, L-threose



32. **Read the text carefully and answer the questions:**

To explain bonding in coordination compounds various theories were proposed. One of the important theories was valence bond theory. According to that, the central metal ion in the complex makes available a number of empty orbitals for the formation of coordination bonds with suitable ligands. The appropriate atomic orbitals of the metal hybridise to give a set of equivalent orbitals of definite geometry. The d - orbitals involved in the hybridisation may be either inner d-orbitals i.e., (n - 1) d or outer d - orbitals i.e. nd. For example,  $\text{Co}^{3+}$  forms both inner orbital and outer orbital complexes, with ammonia it forms  $[\text{Co}(\text{NH}_3)_6]^{3+}$  and with fluorine it forms  $[\text{CoF}_6]^{3-}$  complex ion.

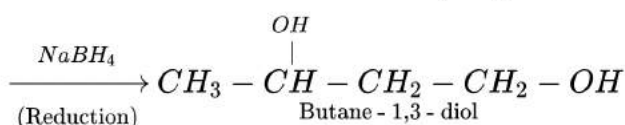
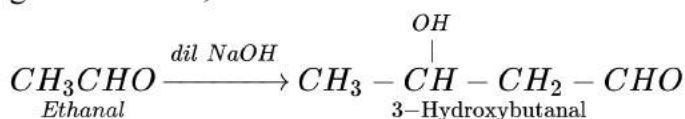
- (i) It involves  $d^2sp^3$  hybridization.
- (ii) It is an octahedral, diamagnetic, and inner orbital complex.
- (iii) Due to presence of 4 unpaired electrons.

OR

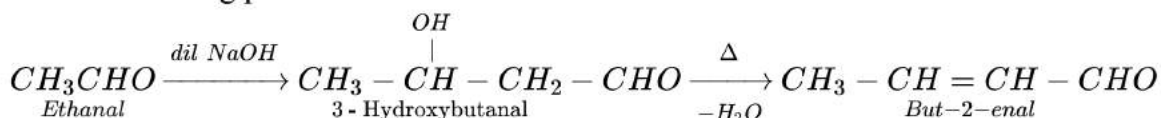


### Section E

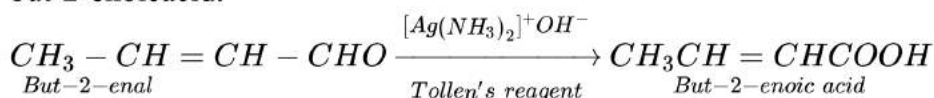
33. i. On treatment with dilute alkali, ethanal produces 3-hydroxybutanal (Aldol Condensation) gives butane-1, 3-diol on reduction.



- ii. On treatment with dilute alkali, ethanal gives 3-hydroxybutanal (Aldol Condensation) which on heating produces but-2-enal.



- iii. When treated with Tollen's reagent, But-2-enal produced in the above reaction produces but-2-enoic acid.

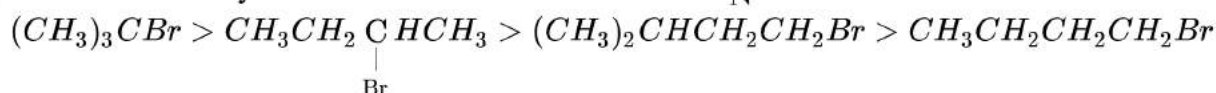


OR

- i. IUPAC name: Heptan-2-one Common name: Methyl n-propyl ketone
  - ii. IUPAC name: 4-Bromo-2-methylhexanal Common name:  $\gamma$  - Bromo -  $\alpha$  - methylcaproaldehyde
  - iii. IUPAC name: Heptanal Common name: heptanaldehyde
  - iv. IUPAC name: 3-phenylprop-2-enal Common name:  $\beta$ -Phenylacrolein
  - v. IUPAC name: Cyclopentanecarbaldehyde Common name: Cyclopentanealdehyde
34. Answer the following questions:

- (i)  $\text{CuCl}_2$  is more stable than  $\text{Cu}_2\text{Cl}_2$ . The stability of compound  $\text{CuCl}_2$  is because of high enthalpy of hydration of  $\text{Cu}^{2+}(\text{aq})$  than that of  $\text{Cu}^+(\text{aq})$ .

- (ii) Order of reactivity of four isomeric bromobutanes in  $\text{S}_{\text{N}}1$  reaction is:





(iii) Add neutral  $\text{FeCl}_3$  solution, phenol gives violet colour whereas benzoic acid does not.

(iv) **Ambident nucleophile:** Nucleophiles having two nucleophilic centres are called ambident nucleophiles.

Examples:  $\text{CN}^-$ ,  $\text{SCN}^-$ ,  $\text{NO}_2^-$ .

(v) Uracil.

35. Vapour pressure of the solution at normal boiling point ( $p_1$ ) = 1.004 bar  
Vapour pressure of pure water at normal boiling point ( $p_1^0$ ) = 1.013 bar

Mass of solute, ( $w_2$ ) = 2 g

Mass of solvent (water), ( $w_1$ ) = 98 g

Molar mass of solvent (water), ( $M_1$ ) =  $18 \text{ g mol}^{-1}$

According to Raoult's law,

$$\frac{p_1^0 - p_1}{p_1^0} = \frac{w_2 \times M_1}{M_2 \times w_1}$$

$$\frac{1.013 - 1.004}{1.013} = \frac{2 \times 18}{M_2 \times 98}$$

$$\frac{0.009}{1.013} = \frac{2 \times 18}{M_2 \times 98}$$

$$M_2 = \frac{1.013 \times 2 \times 18}{0.009 \times 98}$$

$$= 41.346 \text{ g mol}^{-1}$$

Hence, the molar mass of the solute is  $41.346 \text{ g mol}^{-1}$

OR

Vapour pressure of heptanes ( $p_1^0$ ) = 105.2 kPa

Vapour pressure of octane ( $p_2^0$ ) = 46.8 kPa

We know that,

Molar mass of heptane ( $\text{C}_7\text{H}_{16}$ ) =  $(7 \times 12) + (16 \times 1)$   
 $= 100 \text{ g mol}^{-1}$

Therefore, Number of moles of heptane =  $\frac{26}{100} \text{ mol}$   
 $= 0.26 \text{ mol}$

Molar mass of octane ( $\text{C}_8\text{H}_{18}$ ) =  $(8 \times 12) + (18 \times 1)$   
 $= 114 \text{ g mol}^{-1}$

Therefore, Number of moles of octane =  $\frac{35}{114} \text{ mol}$   
 $= 0.31 \text{ mol}$

Mole fraction of heptane,  $x_1 = \frac{0.26}{0.26 + 0.31}$   
 $= 0.456$

And, mole fraction of octane,  $x_2 = 1 - 0.456$   
 $= 0.544$

Now, partial pressure of heptane,  $p_1 = x_1 p_1^0$   
 $= 0.456 \times 105.2$   
 $= 47.97 \text{ kPa}$

Partial pressure of octane,  $p_2 = x_2 p_2^0$   
 $= 0.544 \times 46.8$   
 $= 25.46 \text{ kPa}$

Hence, vapour pressure of solution,  $p_{total} = p_1 + p_2$   
 $= 47.97 + 25.46$   
 $= 73.43 \text{ kPa}$