

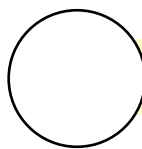
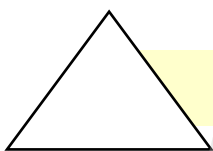




Data Handling



Count the shapes in the above picture.



Name the shapes

that occurs the most

that occurs the least






These children are friends.
Count the number of letters in each name-word.


Names						Number of letters
S	A	L	M	A		
J	O	S	E	P	H	
A	R	U	N			
C	H	I	N	T	U	
G	E	E	T	A		
A	S	H	A			
S	U	B	B	U		
A	H	M	A	D		
R	A	V	I			

How many names have four letters

How many names have five letters

How many names have six letters

How many times  comes in all the names taken together

How many times  comes in all the names taken together