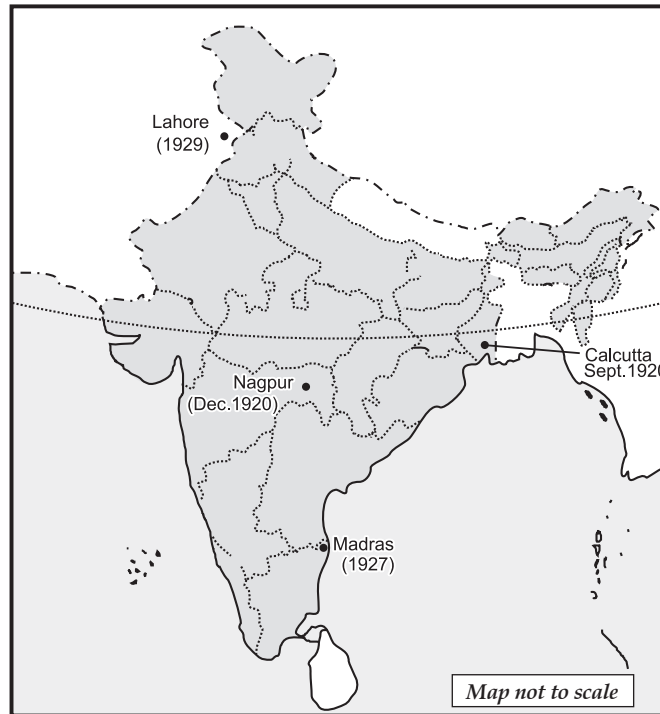


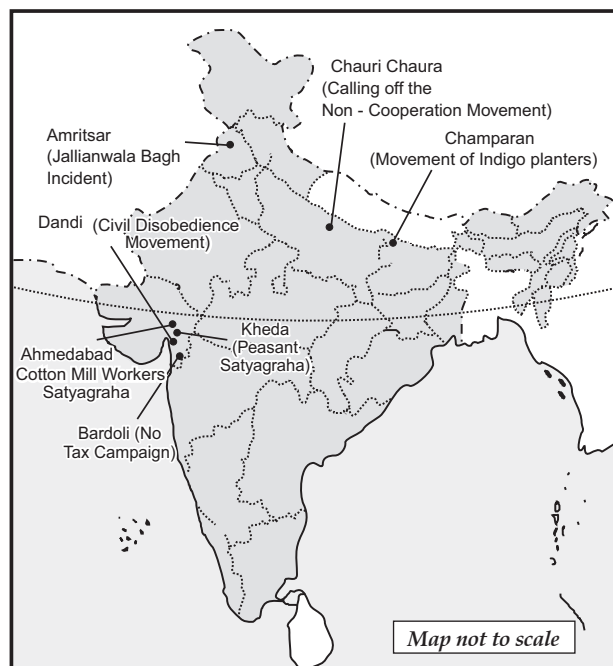
MAP WORK

HISTORY—Outline Political Map of India (For locating and labelling/Identification)

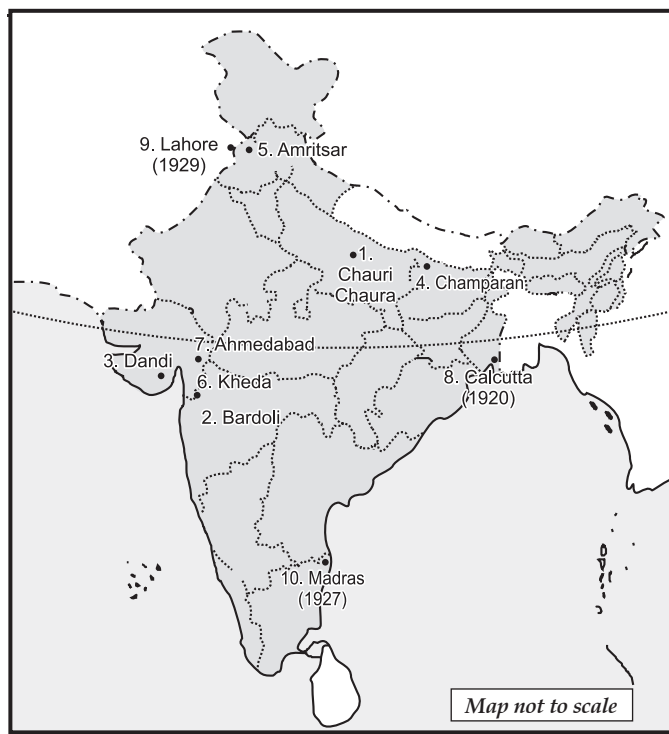
1. Indian National Congress Session



2. Important Centres of Indian National Movement



3. Indian History and National Movement



1. Chauri Chaura—Calling off the Non-Cooperation Movement

[Board Term-II, (Set-TCJQ6VD) 2016 Outside Delhi Set-I, II, III; 2015, Outside Delhi Set-I, II, III]

2. Bardoli—No Tax Campaign

[Board Term-II, 2016, Foreign Set-I, II, III; 2015, Outside Delhi Set-I, II, III]

3. Dandi—Civil Disobedience Movement

[Board SQP-2016] [Board Term-II, Delhi Set-I, II, III, 2016]

4. Champaran—Movement of Indigo Planters

5. Amritsar—Jallianwala Bagh Incident.

[Board Term-II, Delhi (Set-I, II, III), 2016, Outside Delhi (Set-I, II, III), 2015, Foreign Set-I, II, III]

6. Kheda—Peasant Satyagraha

7. Ahmedabad—Cotton Mill Workers Satyagraha

[Board SQP-2016, Board Term-II, 2015, Foreign Set-I, II, III]

8. Session of Indian National Congress (1920)—Calcutta

[Board Term-II, Outside Delhi (Set-I, II, III), 2016, 15, Foreign Set-I, II, III]

9. Session of Indian National Congress (1929)—Lahore

[Board Term-II, 2016, Set-TCJQ6VD]

10. Session of Indian National Congress (1927)—Madras

[Board Term-II, Delhi Set-I, II, III; 2016, 15, Outside Delhi, Set-I, II, III]

Examination Questions

(3 marks each)

Q. 1. Two items A and B are shown in the given political outline map of India. Identify these items with the help of following information and write their correct names on the lines marked on the map.

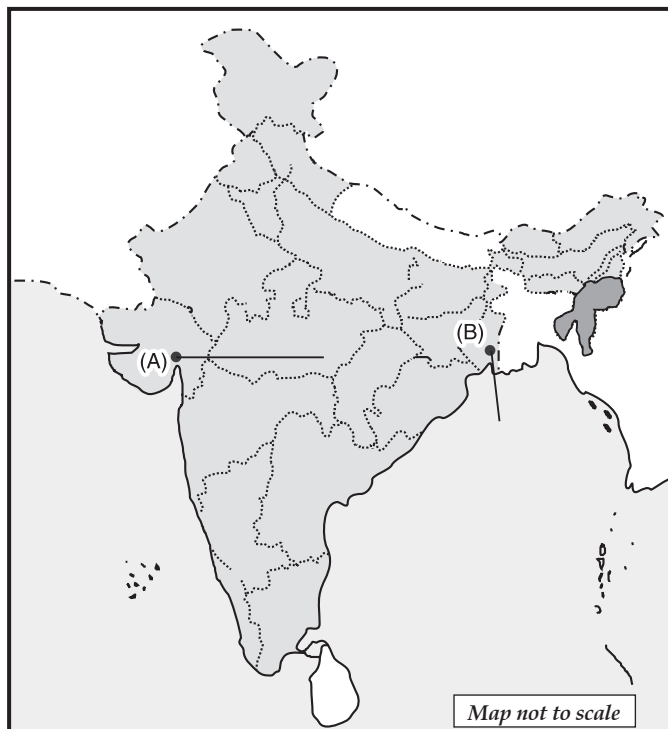
(i) The place which is known for Cotton Mill Workers Satyagraha.

(ii) The place where Congress Session was held in September 1920.

On the same political outline map of India, locate and label the following items with appropriate symbols :

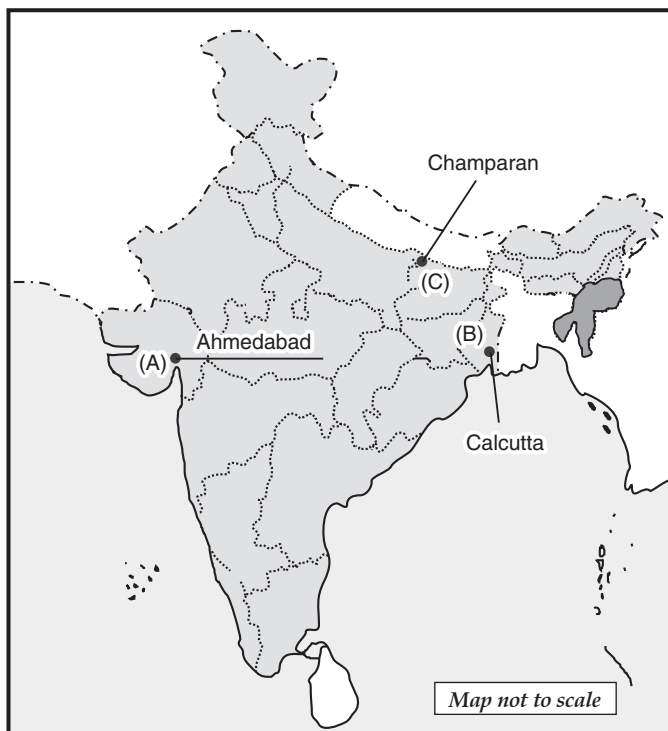
(iii) Champaran : The place known for Indigo Planters Movement.

[Board Term-II, (Set-KCG34U9) 2016]



Ans. The correct information has been provided and the locations have also been marked on the map.

- (i) **Ahmedabad** : The place which is known for Cotton Mill Workers Satyagraha.
- (ii) **Calcutta** : The place where Congress Session was held in September 1920.
- (iii) **Champaran** : The place known for Indigo Planters Movement.



Q. 2. Three features A, B and C are marked in the political outline map of India. Identify these features with the help of the following information and write their correct names on the lines marked on the map :

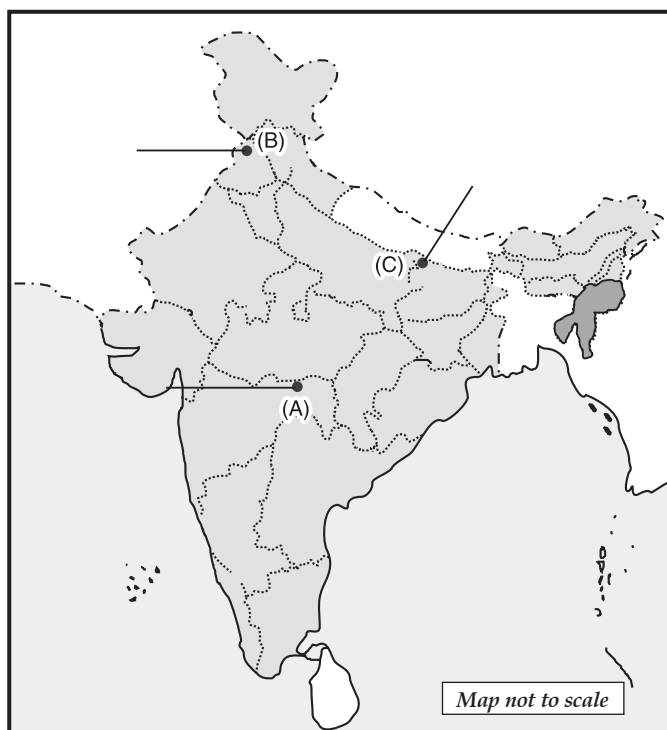
- (i) The place where the Indian National Congress Session was held in 1920.

(ii) The city where the Jallianwala Bagh incident occurred.

[Board Term-II, Delhi Set-I, II, III, 2015]

(iii) The place where the peasants struggled against the Indigo Plantation System.

[Board Term-II, (Set-TCJQ6VD) 2016, Foreign Set-I, II, III,; Board Term-II, Delhi Set- I, II, III, 2015]



Ans. The correct information has been provided and the locations have also been marked on the map.

(i) **Nagpur** : The place where the Indian National Congress Session was held in 1920.

(ii) **Amritsar** : The city where the Jallianwala Bagh incident occurred.

(iii) **Champaran** : The place where the peasants struggled against the Indigo Plantation System.

