
CBSE Sample Paper-05 (Unsolved)
SUMMATIVE ASSESSMENT –II
Class – IX Social Science

Time allowed: 3 hours

Maximum Marks: 90

General Instructions:

- a) The question paper has 30 questions. All Questions are compulsory.
 - b) Question numbers 1-8 are Multiple Choice Questions. Each question carries one each.
 - c) Question numbers 9-20 are three marks questions. Answers of these questions should not exceed 80 words.
 - d) Question numbers 21-26 are five marks questions. Answers of these questions should not exceed 100 words.
 - e) Question number 27 and 28 are based on OPEN TEXT ASSESSMENT BASED.
 - f) Question numbers 29-30 are map questions of three marks each.
-

1. Who was Huitotos?

OR

How much area of land was covered to create Serengeti National Park?

OR

When the Battle of Plassey was took place?

- 2. Name the animal that lives in the swampy and marshy lands of Assam and West Bengal?
- 3. What do you understand by party ticket?
- 4. Who are called permanent executives?
- 5. Name two ethnic groups live in Kosovo region of Yugoslavia.
- 6. What is TDPS?
- 7. Name any two leading food grain procuring states of India.
- 8. What is MSP?
- 9. Hunting became a big sport game during colonial rule". Justify the answer with suitable arguments.

OR

How the rich pastoralists of cope up with the forest policies?

OR

Explain any three problems faced by British in continuing the trade with China.

- 10. Write down any three innovations introduced by Kerry Packer that made cricket more attractive for the spectators.

OR

How would you explain the relationship between Khadi and National Movement of India?

- 11. How did the balance of power in cricket shift to the South Asian countries?

OR

Why did Dr B. R. Ambedkar and Dalits in the favor of wearing western style cloths?

-
12. "Pressure and wind conditions over India are unique". Write any three examples to support this statement.
 13. Which are the most widespread forests of India? Mention any two characteristics of these forests.
 14. Why is the rate of population growth in India declining since 1981? Give any three reasons.
 15. "EVMs make the counting process of votes fast". How would you explain the voting process through EVMs?
 16. Can you write a brief outline for the reasons of widespread protests against O.M. No. 36012/31/90?
 17. How does a person exercise his right to freedom of religion?
 18. Yellow Card proves very helpful for the survival of Ahmed". Elaborate the statement with suitable arguments.
 19. What type of help is required to the victims of natural calamity at the relief camps?
 20. What is a famine? Can you write in your words the condition of people during a famine?
 21. "While some lost out in many ways after the forest department took control of the forests, some people benefitted from the new opportunities that had opened up in trade". Who were the people those who benefitted from the new opportunities and How they benefitted.

OR

Can you write any five reasons to explain why the cattle stock of the Massaies decreased under colonial rule?

OR

Mention the problems created in England by the tea trade with China. How were these problems solved?

22. How far it is correct to say that the history Gymkhana cricket led to first class cricket being organized on communal and racial lines?

OR

"Any civilized nation is against the kind of clothing in use in the present time among women of our country". Explain the statement and write the views of Maharani of Travancore regarding dress reform.

23. How do the westerly Jet Streams help in bringing the westerly disturbances to the Indian sub-continent during winter?
 24. List any five factors responsible for a great variety of flora and fauna in India?
 25. One final test of the free and fairness of election lies in the outcomes itself". Justify the statement with the help of the outcomes of India's elections.
 26. Right to Equality is a cluster of deferent freedoms'. Explain.
-

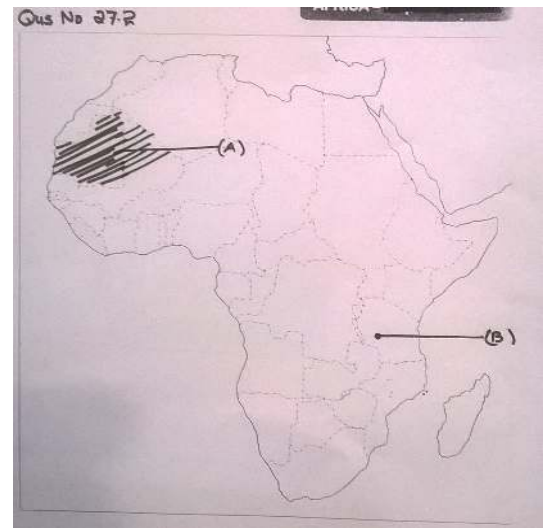
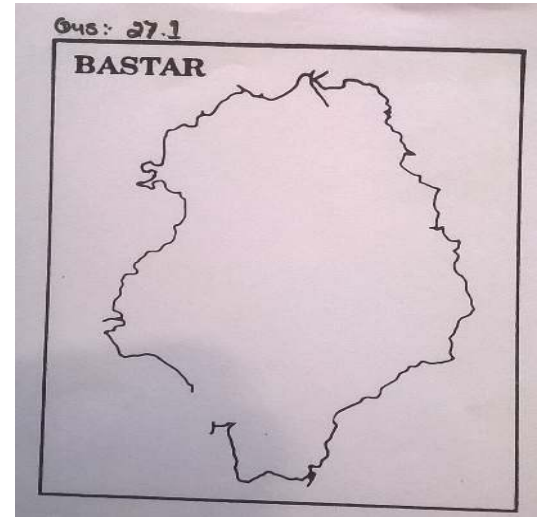
27.1 on the given political map locate and label the following with appropriate symbol.

- A. Jagdalpur
- B. Konta
- C. Bailadiala Hills

OR

27.2 (a) Two features A and B are marked in the given political map of India. Identify these features with the help of the following information and write their correct names on the lines marked on the map

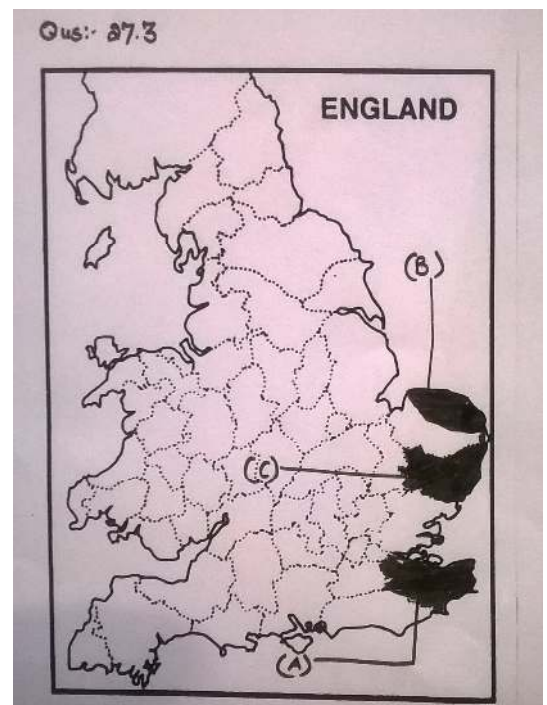
- A. A famous tribes that lived in this area of North-west Africa
- B. A national Park
- (b) On the same political map shade the appropriate area
- C. A place where Somali African tribe lived



OR

27.3 (a) Three features A, B and C are marked in the given physical map of United Kingdom. Identify these features with the help of the following information and write their correct names on the lines marked on the map

- A. Name the place where 49 machines were broken
- B. Write the name of the place where 50% enclosures of common field witnessed
- C. Write the name of place where least number of machines was broken

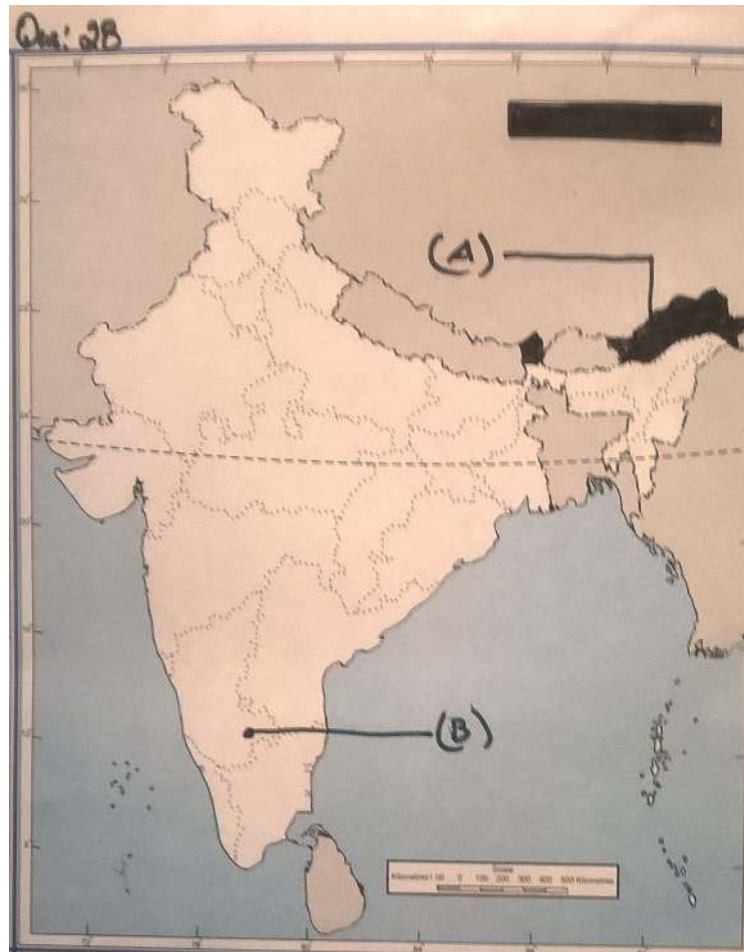


28.1. Two features A and B are marked in the given political map of India. Identify these features with the help of the following information and write their correct names on the lines marked on the map.

A. A type of Vegetation

B. Meteorological station

28.2. Locate and Label **the most scarcely populated state of India** with appropriate symbols on the same map given for identification.



29. Question Based on OTBA

30. Question Based on OTBA
