

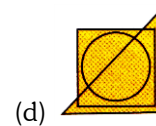
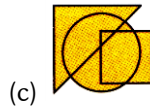
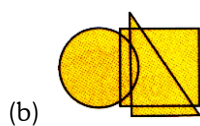
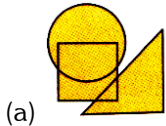
## QUESTIONS

**Direction (1-25):** In each of the following questions, from amongst the options select the one which satisfies the same conditions of placement of the dot(s) as in the Fig. (X).

1.



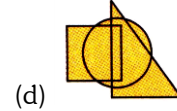
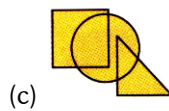
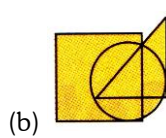
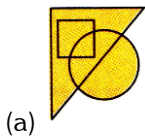
Fig. (X)



2.



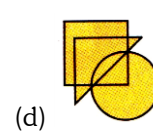
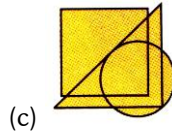
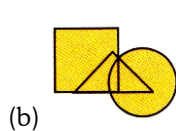
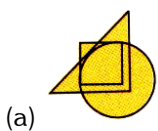
Fig. (X)



3.




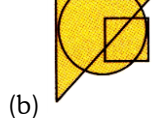
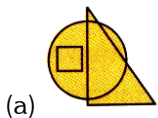
Fig. (X)



4.



Fig. (X)



5.

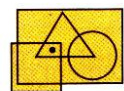

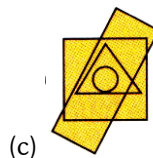
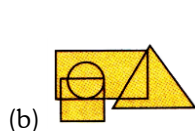
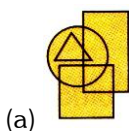


Fig. (X)



6.

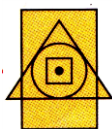
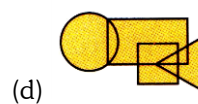
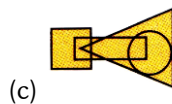
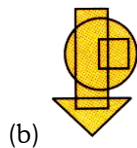
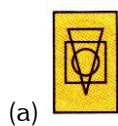



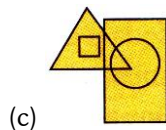
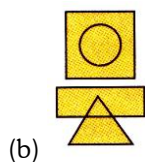

Fig. (X)



7.



Fig. (X)



8.


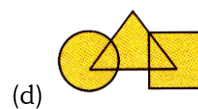
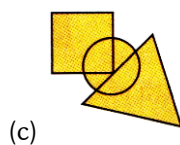
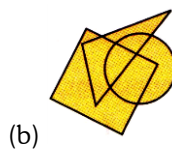
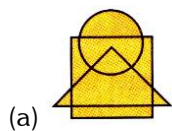


Fig. (X)



9.


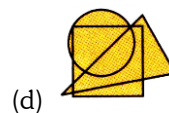

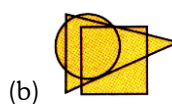
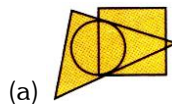


Fig. (X)



10.

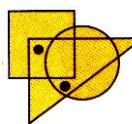
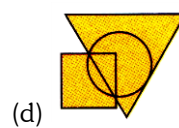
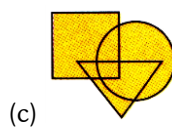
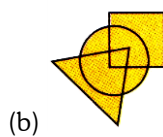
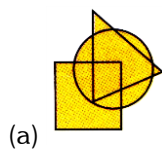


Fig. (X)



11.

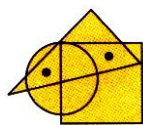
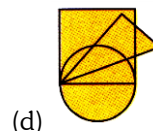
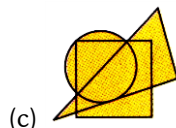
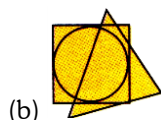
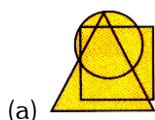


Fig. (X)



12.

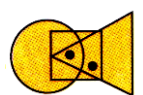
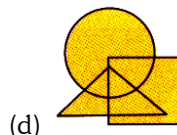

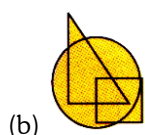
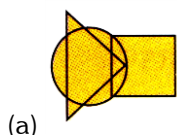


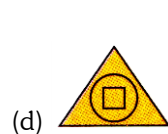
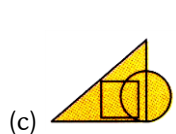
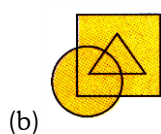
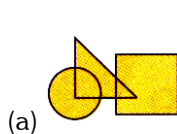
Fig. (X)



13.



Fig. (X)



14.

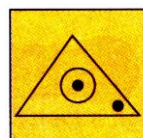
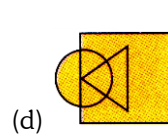
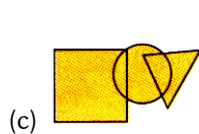
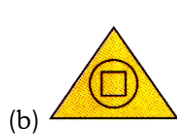
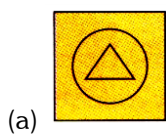



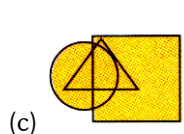
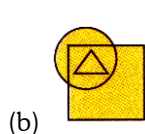
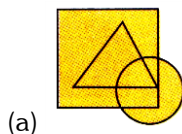
Fig. (X)



15.



Fig. (X)



16.


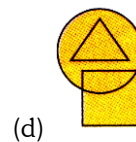

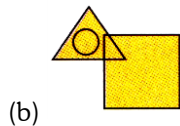



Fig. (X)



17.

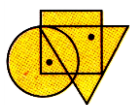
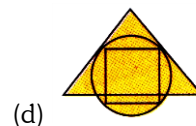
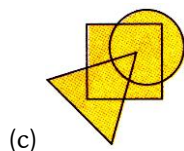
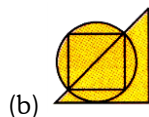
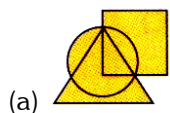


Fig. (X)



18.

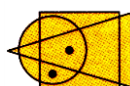
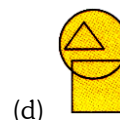
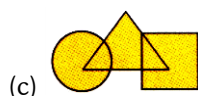
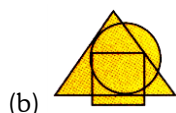
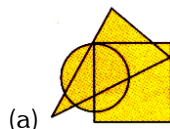


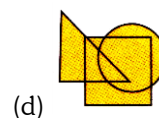
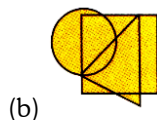
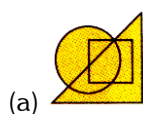
Fig. (X)



19.



Fig. (X)



20.

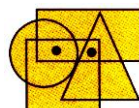
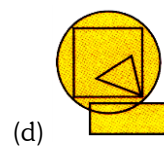
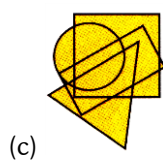
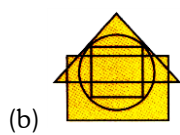
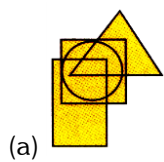


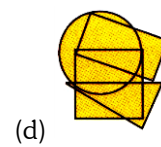
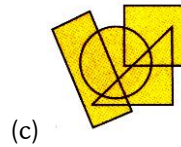
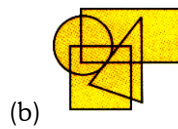

Fig. (X)



21.



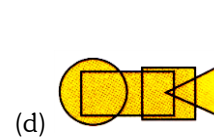
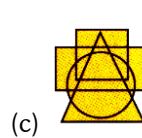
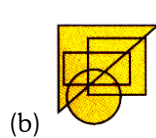
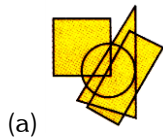
Fig. (X)



22.



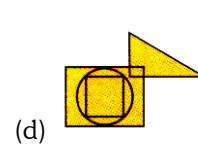
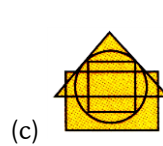
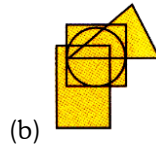
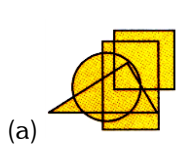
Fig. (X)



23.



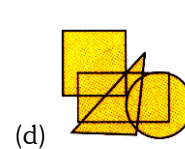
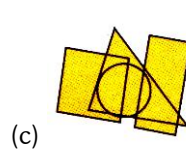
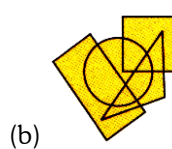
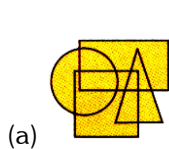
Fig. (X)



24.



Fig. (X)



25.

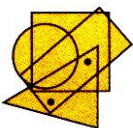
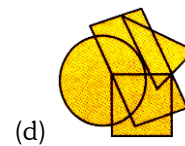
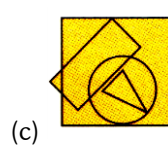
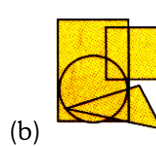
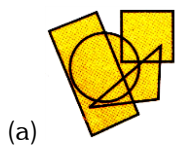


Fig. (X)



26. Which of the following options satisfies the same condition of placement of the dots as in Fig. (X)?

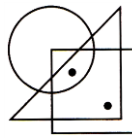
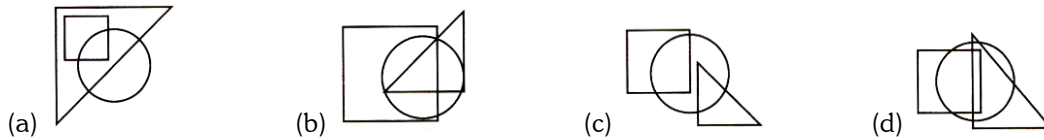


Fig.(X)



27. Select the figure from the options which satisfies the same conditions of placement of the dot as in Fig. (X).

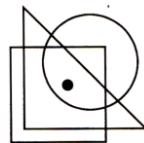



Fig. (X)



28. Select a figure from the options which does not satisfies the same condition of placement of the dots as in Fig. (X).

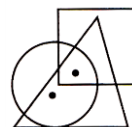


Fig. (X)



29. Select the figure from the options which satisfies the same conditions of placement of the dots as in Fig. (X).

(SOF NCO 2016)

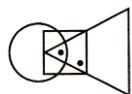


Fig. (X)



30. Which of the following figures do not satisfy the same condition of placement of dots as in Fig.(X)?

(SOF NSO 2016)

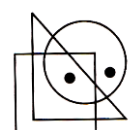



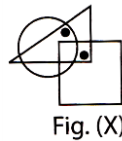
Fig. (X)





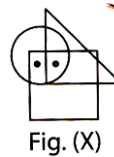
31. Select a figure from the options which satisfies the same conditions of placement of dots as in Fig. (X).

(SOF IMO 2016)



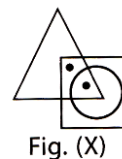
32. Select a figure from the options which does not satisfies the same condition of placement of the dots as in Fig. (X).

(SOF IMO 2016)



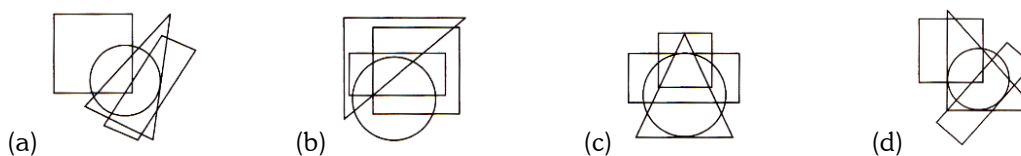
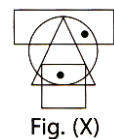
33. Select a figure from the options which satisfies the same conditions of placement of dots as in Fig. (X)

(SOF NCO 2017)



34. Which of the following options satisfies the same conditions of placement of dots as in Fig. (X)?

(SOF NSO 2017)



35. Select a figure from the options which satisfies the same condition of placement of the dots as in Fig. (X).

(SOF IMO 2017)

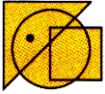


ANSWER - KEY				
<b>1.</b> C	<b>2.</b> A	<b>3.</b> D	<b>4.</b> B	<b>5.</b> C
<b>6.</b> A	<b>7.</b> A	<b>8.</b> B	<b>9.</b> D	<b>10.</b> C
<b>11.</b> A	<b>12.</b> D	<b>13.</b> A	<b>14.</b> D	<b>15.</b> D
<b>16.</b> C	<b>17.</b> C	<b>18.</b> A	<b>19.</b> A	<b>20.</b> C
<b>21.</b> D	<b>22.</b> A	<b>23.</b> A	<b>24.</b> A	<b>25.</b> D
<b>26.</b> A	<b>27.</b> B	<b>28.</b> B	<b>29.</b> D	<b>30.</b> A
<b>31.</b> A	<b>32.</b> D	<b>33.</b> A	<b>34.</b> D	<b>35.</b> D

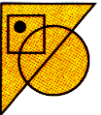


## EXPLANATIONS

1. (c)



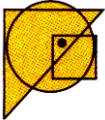
2. (a)



3. (d)



4. (b)




5. (c):



6. (a):




7. (a):



8. (b) :



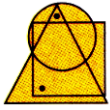
9. (d):



10. (c)



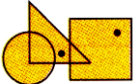
11. (a):



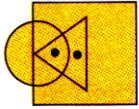
12. (d)



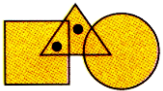
13. (a) :



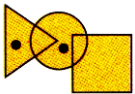
14. (d):



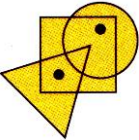
15. (d)



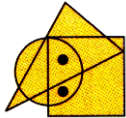
16. (c):



17. (c)



18. (a):



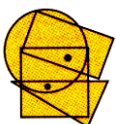
19. (a):



20. (c):



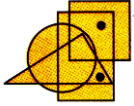
21. (d):



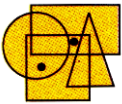
22. (a):



23. (a)



24. (a)



25. (d):



26. (a) Not Available

27. (b) Not Available

28. (b) Not Available

29. (d) Not Available

30. (a) Not Available

31. (a) Not Available

32. (d) Not Available

33. (a) Not Available

34. (d) Not Available

35. (d) Not Available