




Addition




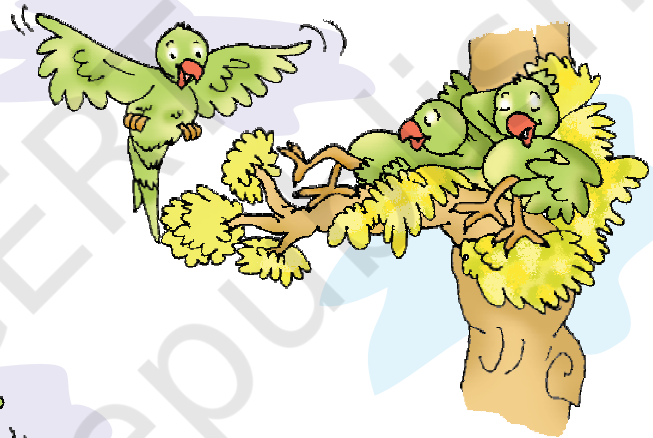
0119CH03

One more




One little parrot,
singing I love you,
One more joins in,
making them two.

Two little parrots,
resting on a tree,
One more joins in,
making them three.



Three little parrots,
looking for more,
One more joins in,
making them four.

Four little parrots,
wanting to dive,
One more joins in,
making them five.




Teachers Note

Refer to page no. 139 to develop understanding of addition.






How many altogether ?




2 cows and



1 cow

is equal to

3 cows



3 children and




2 children is equal to

5 children




Flowers and



Flowers

=

Flowers




Birds and






Birds



=




Birds





How many altogether?

| | | |
|---|---|--|
|  |  |  |
| 6 | and | 2 = 8 |

| | | |
|---|-----|--|
|  | |  |
| | and | = |




| | | |
|---|---|--|
|  |  |  |
| | and | = |




| | | |
|---|-----|--|
|  | |  |
| | and | = |

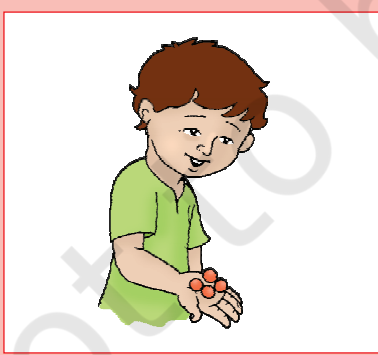

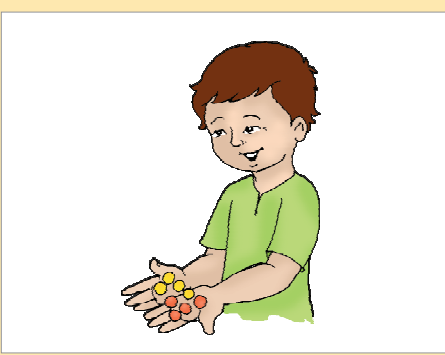




How many altogether?



| | | | | |
|---|---|---|---|---|
|  |  |  | | |
| 4 | + | 3 | = | 7 |



| | | | | |
|--|--|--|---|--|
|  |  |  | | |
| | + | | = | |

| | | | | |
|---|---|---|---|--|
|  |  |  | | |
| | + | | = | |






Addition



  $2 + 3 = 5$


 2
 $+ 3$



 5


 $4 + 2 =$ 


$5 + 1 =$ 

 $3 + 6 =$ 


$7 + 0 =$ 


 $0 + 9 =$ 


 4
 $+ 2$




5
 $+ 1$





 3
 $+ 6$



7
 $+ 0$



 0
 $+ 9$









Addition



$$3 + 2 = \boxed{5} \text{ balloons}$$



$$3 + 0 = \boxed{3} \text{ balloons}$$




$$0 + 2 = \boxed{}$$



$$4 + 0 = \boxed{}$$




$$5 + 0 = \boxed{}$$




$$3 + 4 = \boxed{}$$



Addition



3





4

+

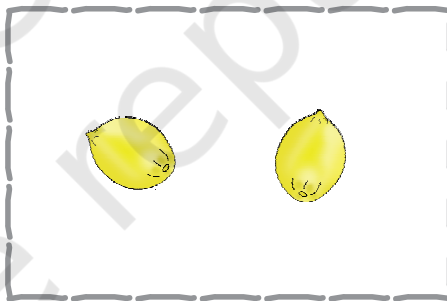
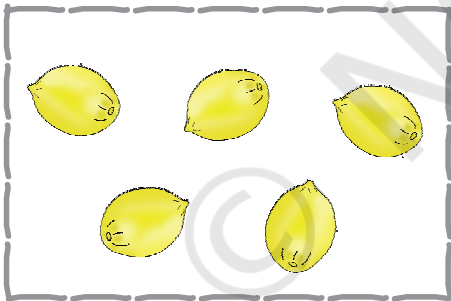
=

7





+

=



+

=



+

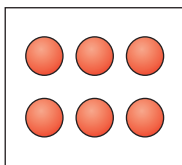
=





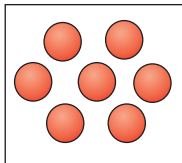
Add and Match

$3 + 2$



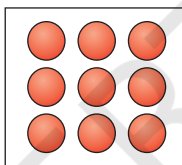
$3 + 3$

$4 + 2$



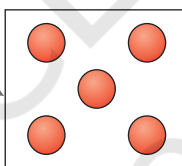
$2 + 3$

$3 + 4$



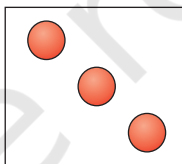
$0 + 8$

$8 + 0$



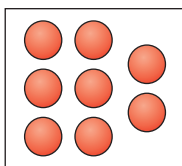
$3 + 6$

$6 + 3$



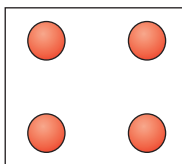
$5 + 2$

$2 + 1$



$1 + 2$

$1 + 3$



$3 + 1$



Add

$2 + 7 =$

$3 + 5 =$

$4 + 0 =$

$2 + 2 =$



$1 + 3 =$

$4 + 1 =$

$0 + 2 =$

$3 + 4 =$

$$\begin{array}{r} 3 \\ + 6 \\ \hline \end{array}$$

$$\begin{array}{r} 5 \\ + 2 \\ \hline \end{array}$$

$$\begin{array}{r} 3 \\ + 3 \\ \hline \end{array}$$

$$\begin{array}{r} 0 \\ + 8 \\ \hline \end{array}$$

$$\begin{array}{r} 6 \\ + 3 \\ \hline \end{array}$$

$$\begin{array}{r} 1 \\ + 7 \\ \hline \end{array}$$

$$\begin{array}{r} 2 \\ + 3 \\ \hline \end{array}$$

$$\begin{array}{r} 5 \\ + 0 \\ \hline \end{array}$$

$$\begin{array}{r} 3 \\ + 4 \\ \hline \end{array}$$





Write the missing numerals

$$\square + \square = 5$$

$$\square + \square = 6$$

$$\square + \square = 7$$

$$\square + \square = 3$$

$$\square + \square = 4$$

$$\square + \square = 9$$

$$\square + \square = 8$$

$$\square + \square = 1$$

