




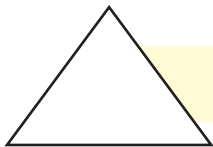
Data Handling



0119CH09



Count the shapes in the above picture.



Name the shapes

that occurs the most

that occurs the least

Teachers Note

Refer to page no. 145 to develop ²⁰²²⁻²³ understanding of data handling.



These children are friends.

Count the number of letters in each name-word.

Names						Number of letters
S	A	L	M	A		
J	O	S	E	P	H	
A	R	U	N			
C	H	I	N	T	U	
G	E	E	T	A		
A	S	H	A			
S	U	B	B	U		
A	H	M	A	D		
R	A	V	I			

How many names have four letters

How many names have five letters

How many names have six letters

How many times **S** comes in all the names taken together

How many times **A** comes in all the names taken together