

# Figure Formation and Analysis

## REASONING WORKBOOK

### FIGURE FORMATION

- This chapter deals with problems of the following types:
- Formation of a figure from its various components.
- Formation of 3-Dimensional figure from its net.
- Choosing an identical figure.
- Choosing a pattern with identical components.

### EXAMPLE

Find out which one of the four alternative figures can be formed from the pieces in the given Fig. (X).


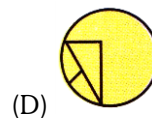
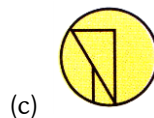
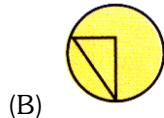


Fig. (X)



#### Explanation (c):

Joining the four pieces in Fig. (X), we get the following figure:

